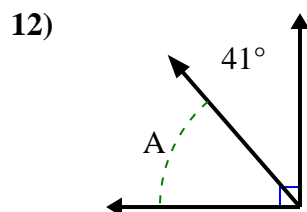
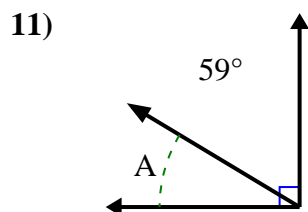
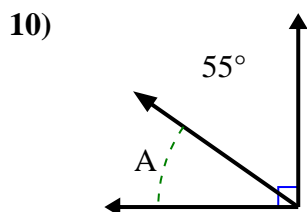
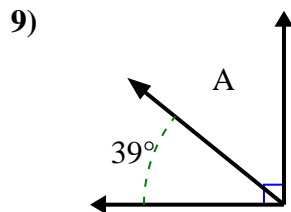
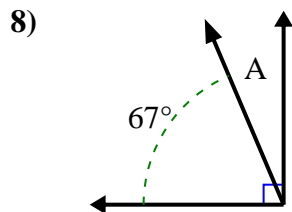
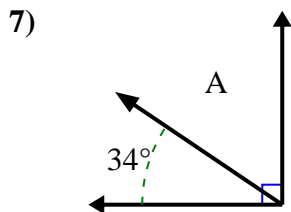
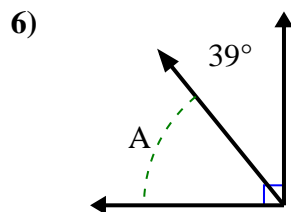
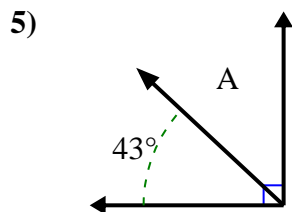
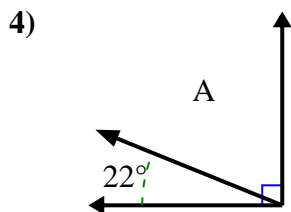
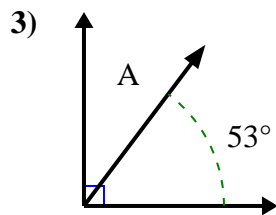
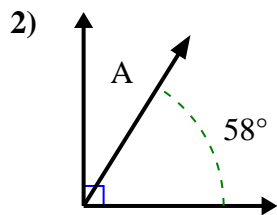
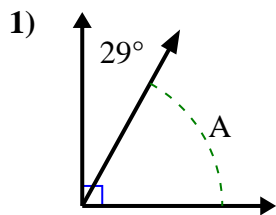




Find the value of 'A' in the set of complementary angles.

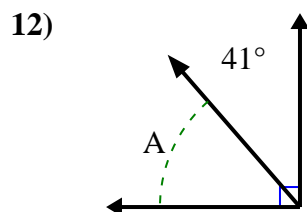
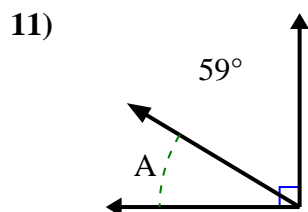
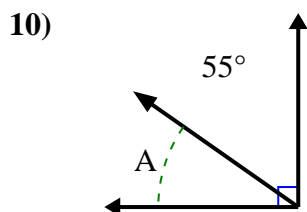
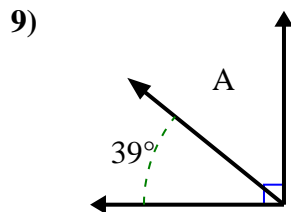
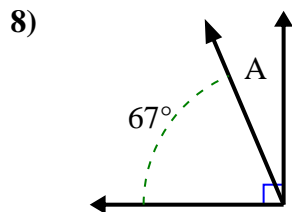
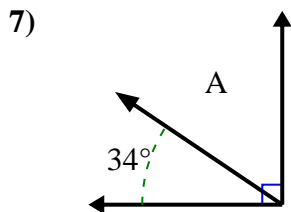
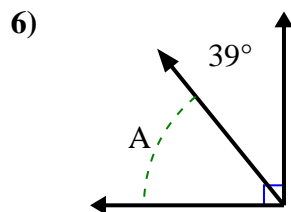
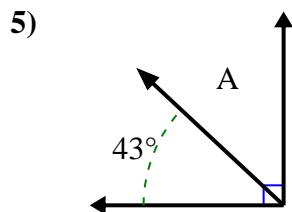
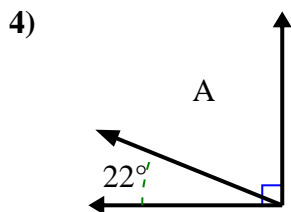
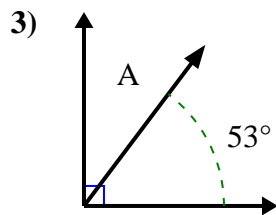
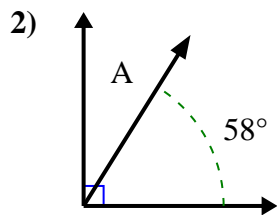
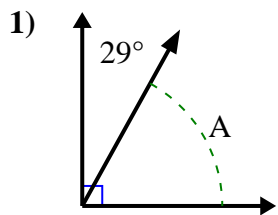
Answers



- 1. \_\_\_\_\_
- 2. \_\_\_\_\_
- 3. \_\_\_\_\_
- 4. \_\_\_\_\_
- 5. \_\_\_\_\_
- 6. \_\_\_\_\_
- 7. \_\_\_\_\_
- 8. \_\_\_\_\_
- 9. \_\_\_\_\_
- 10. \_\_\_\_\_
- 11. \_\_\_\_\_
- 12. \_\_\_\_\_



Find the value of 'A' in the set of complementary angles.



Answers

1. 61°

2. 32°

3. 37°

4. 68°

5. 47°

6. 51°

7. 56°

8. 23°

9. 51°

10. 35°

11. 31°

12. 49°