



Solve each problem.

1) $1 + 1 = \underline{\quad}$

2) $2 + 1 = \underline{\quad}$

3) $1 + 4 = \underline{\quad}$

4) $3 + 0 = \underline{\quad}$

5) $3 + 2 = \underline{\quad}$

6) $4 + 0 = \underline{\quad}$

7) $1 + 2 = \underline{\quad}$

8) $5 + 0 = \underline{\quad}$

9) $5 - 2 = \underline{\quad}$

10) $4 - 4 = \underline{\quad}$

11) $5 - 5 = \underline{\quad}$

12) $2 - 2 = \underline{\quad}$

13) $3 - 3 = \underline{\quad}$

14) $4 - 2 = \underline{\quad}$

15) $5 - 3 = \underline{\quad}$

16) $2 - 1 = \underline{\quad}$

Answers

1. _____

2. _____

3. _____

4. _____

5. _____

6. _____

7. _____

8. _____

9. _____

10. _____

11. _____

12. _____

13. _____

14. _____

15. _____

16. _____



Solve each problem.

1) $1 + 1 = \underline{2}$

2) $2 + 1 = \underline{3}$

3) $1 + 4 = \underline{5}$

4) $3 + 0 = \underline{3}$

5) $3 + 2 = \underline{5}$

6) $4 + 0 = \underline{4}$

7) $1 + 2 = \underline{3}$

8) $5 + 0 = \underline{5}$

9) $5 - 2 = \underline{3}$

10) $4 - 4 = \underline{0}$

11) $5 - 5 = \underline{0}$

12) $2 - 2 = \underline{0}$

13) $3 - 3 = \underline{0}$

14) $4 - 2 = \underline{2}$

15) $5 - 3 = \underline{2}$



16) $2 - 1 = \underline{1}$



Answers1. 22. 33. 54. 35. 56. 47. 38. 59. 310. 011. 012. 013. 014. 215. 216. 1






Solve each problem.



Answers


1) 1 + 1 = _____
 + 


2) 2 + 1 = _____
 + 

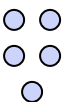
3) 1 + 4 = _____
 + 



4) 3 + 0 = _____




5) 3 + 2 = _____
 + 



6) 4 + 0 = _____




7) 1 + 2 = _____
 + 



8) 5 + 0 = _____




9) 5 - 2 = _____
 - 



10) 4 - 4 = _____
 - 



11) 5 - 5 = _____
 - 

12) 2 - 2 = _____
 - 

13) 3 - 3 = _____
 - 

14) 4 - 2 = _____
 - 

15) 5 - 3 = _____
 - 

16) 2 - 1 = _____
 - 

1. _____
2. _____
3. _____
4. _____
5. _____
6. _____
7. _____
8. _____
9. _____
10. _____
11. _____
12. _____
13. _____
14. _____
15. _____
16. _____



Solve each problem.

1) $5 + 0 = \underline{\quad}$

2) $4 + 0 = \underline{\quad}$

3) $2 + 0 = \underline{\quad}$

4) $1 + 1 = \underline{\quad}$

5) $4 + 1 = \underline{\quad}$

6) $1 + 4 = \underline{\quad}$

7) $1 + 2 = \underline{\quad}$

8) $2 + 3 = \underline{\quad}$

9) $4 - 4 = \underline{\quad}$

10) $5 - 5 = \underline{\quad}$

11) $2 - 2 = \underline{\quad}$

12) $5 - 3 = \underline{\quad}$

13) $5 - 4 = \underline{\quad}$

14) $3 - 3 = \underline{\quad}$

15) $4 - 1 = \underline{\quad}$

16) $3 - 2 = \underline{\quad}$

Answers

1. _____

2. _____

3. _____

4. _____

5. _____

6. _____

7. _____

8. _____

9. _____

10. _____

11. _____

12. _____

13. _____

14. _____

15. _____

16. _____



Solve each problem.

1) $5 + 0 = \underline{5}$

2) $4 + 0 = \underline{4}$

3) $2 + 0 = \underline{2}$

4) $1 + 1 = \underline{2}$

5) $4 + 1 = \underline{5}$

6) $1 + 4 = \underline{5}$

7) $1 + 2 = \underline{3}$

8) $2 + 3 = \underline{5}$

9) $4 - 4 = \underline{0}$

10) $5 - 5 = \underline{0}$

11) $2 - 2 = \underline{0}$

12) $5 - 3 = \underline{2}$

13) $5 - 4 = \underline{1}$

14) $3 - 3 = \underline{0}$

15) $4 - 1 = \underline{3}$


16) $3 - 2 = \underline{1}$

Answers1. 52. 43. 24. 25. 56. 57. 38. 59. 010. 011. 012. 213. 114. 015. 316. 1



Solve each problem.

1) 5 + 0 = _____



2) 4 + 0 = _____




3) 2 + 0 = _____



4) 1 + 1 = _____



5) 4 + 1 = _____



6) 1 + 4 = _____



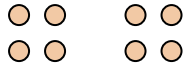
7) 1 + 2 = _____



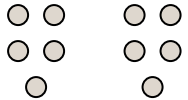
8) 2 + 3 = _____



9) 4 - 4 = _____



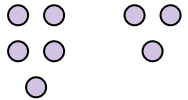
10) 5 - 5 = _____



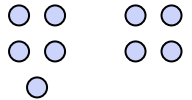
11) 2 - 2 = _____




12) 5 - 3 = _____




13) 5 - 4 = _____



14) 3 - 3 = _____



15) 4 - 1 = _____



16) 3 - 2 = _____



Answers

1. _____
2. _____
3. _____
4. _____
5. _____
6. _____
7. _____
8. _____
9. _____
10. _____
11. _____
12. _____
13. _____
14. _____
15. _____
16. _____



Solve each problem.

1) $3 + 2 = \underline{\quad}$

2) $5 + 0 = \underline{\quad}$

3) $2 + 1 = \underline{\quad}$

4) $2 + 3 = \underline{\quad}$

5) $1 + 2 = \underline{\quad}$

6) $3 + 0 = \underline{\quad}$

7) $4 + 0 = \underline{\quad}$

8) $2 + 0 = \underline{\quad}$

9) $1 - 1 = \underline{\quad}$

10) $5 - 4 = \underline{\quad}$

11) $5 - 5 = \underline{\quad}$

12) $3 - 1 = \underline{\quad}$

13) $2 - 2 = \underline{\quad}$

14) $4 - 4 = \underline{\quad}$

15) $5 - 2 = \underline{\quad}$

16) $5 - 1 = \underline{\quad}$

Answers

1. _____

2. _____

3. _____

4. _____

5. _____

6. _____

7. _____

8. _____

9. _____

10. _____

11. _____

12. _____

13. _____

14. _____

15. _____

16. _____



Solve each problem.

1) $3 + 2 = \underline{5}$

2) $5 + 0 = \underline{5}$

3) $2 + 1 = \underline{3}$

4) $2 + 3 = \underline{5}$

5) $1 + 2 = \underline{3}$

6) $3 + 0 = \underline{3}$

7) $4 + 0 = \underline{4}$

8) $2 + 0 = \underline{2}$

9) $1 - 1 = \underline{0}$

10) $5 - 4 = \underline{1}$

11) $5 - 5 = \underline{0}$

12) $3 - 1 = \underline{2}$

13) $2 - 2 = \underline{0}$

14) $4 - 4 = \underline{0}$

15) $5 - 2 = \underline{3}$


16) $5 - 1 = \underline{4}$

Answers1. 52. 53. 34. 55. 36. 37. 48. 29. 010. 111. 012. 213. 014. 015. 316. 4




Solve each problem.


1) $3 + 2 = \underline{\quad}$




2) $5 + 0 = \underline{\quad}$



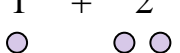
3) $2 + 1 = \underline{\quad}$




4) $2 + 3 = \underline{\quad}$




5) $1 + 2 = \underline{\quad}$




6) $3 + 0 = \underline{\quad}$




7) $4 + 0 = \underline{\quad}$



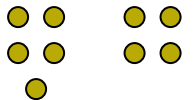
8) $2 + 0 = \underline{\quad}$



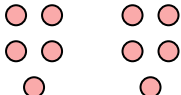
9) $1 - 1 = \underline{\quad}$



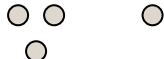
10) $5 - 4 = \underline{\quad}$




11) $5 - 5 = \underline{\quad}$




12) $3 - 1 = \underline{\quad}$



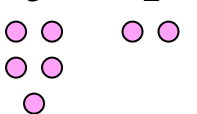
13) $2 - 2 = \underline{\quad}$




14) $4 - 4 = \underline{\quad}$



15) $5 - 2 = \underline{\quad}$



16) $5 - 1 = \underline{\quad}$



Answers

1. _____
2. _____
3. _____
4. _____
5. _____
6. _____
7. _____
8. _____
9. _____
10. _____
11. _____
12. _____
13. _____
14. _____
15. _____
16. _____



Solve each problem.

1) $2 + 1 = \underline{\quad}$

2) $4 + 1 = \underline{\quad}$

3) $2 + 0 = \underline{\quad}$

4) $2 + 2 = \underline{\quad}$

5) $1 + 1 = \underline{\quad}$

6) $3 + 0 = \underline{\quad}$

7) $3 + 2 = \underline{\quad}$

8) $1 + 3 = \underline{\quad}$

9) $3 - 2 = \underline{\quad}$

10) $5 - 5 = \underline{\quad}$

11) $5 - 4 = \underline{\quad}$

12) $5 - 3 = \underline{\quad}$

13) $4 - 4 = \underline{\quad}$

14) $2 - 1 = \underline{\quad}$

15) $3 - 1 = \underline{\quad}$

16) $2 - 2 = \underline{\quad}$

Answers

1. _____

2. _____

3. _____

4. _____

5. _____

6. _____

7. _____

8. _____

9. _____

10. _____

11. _____

12. _____

13. _____

14. _____

15. _____

16. _____



Solve each problem.

1) $2 + 1 = \underline{3}$

2) $4 + 1 = \underline{5}$

3) $2 + 0 = \underline{2}$

4) $2 + 2 = \underline{4}$

5) $1 + 1 = \underline{2}$

6) $3 + 0 = \underline{3}$

7) $3 + 2 = \underline{5}$

8) $1 + 3 = \underline{4}$

9) $3 - 2 = \underline{1}$

10) $5 - 5 = \underline{0}$

11) $5 - 4 = \underline{1}$

12) $5 - 3 = \underline{2}$

13) $4 - 4 = \underline{0}$

14) $2 - 1 = \underline{1}$

15) $3 - 1 = \underline{2}$

16) $2 - 2 = \underline{0}$

Answers1. 32. 53. 24. 45. 26. 37. 58. 49. 110. 011. 112. 213. 014. 115. 216. 0



Solve each problem.

1) 2 + 1 = _____
 +

2) 4 + 1 = _____
 +

3) 2 + 0 = _____

4) 2 + 2 = _____
 +

5) 1 + 1 = _____
 +

6) 3 + 0 = _____

7) 3 + 2 = _____
 +

8) 1 + 3 = _____
 +

9) 3 - 2 = _____
 -

10) 5 - 5 = _____
 -

11) 5 - 4 = _____
 -

12) 5 - 3 = _____
 -

13) 4 - 4 = _____
 -

14) 2 - 1 = _____
 -

15) 3 - 1 = _____
 -

16) 2 - 2 = _____
 -

Answers

1. _____
2. _____
3. _____
4. _____
5. _____
6. _____
7. _____
8. _____
9. _____
10. _____
11. _____
12. _____
13. _____
14. _____
15. _____
16. _____



Solve each problem.

1) $3 + 2 = \underline{\quad}$

2) $5 + 0 = \underline{\quad}$

3) $3 + 1 = \underline{\quad}$

4) $3 + 0 = \underline{\quad}$

5) $2 + 0 = \underline{\quad}$

6) $4 + 0 = \underline{\quad}$

7) $1 + 3 = \underline{\quad}$

8) $1 + 4 = \underline{\quad}$

9) $3 - 3 = \underline{\quad}$

10) $4 - 3 = \underline{\quad}$

11) $5 - 2 = \underline{\quad}$

12) $4 - 1 = \underline{\quad}$

13) $5 - 4 = \underline{\quad}$

14) $5 - 3 = \underline{\quad}$

15) $4 - 2 = \underline{\quad}$

16) $3 - 2 = \underline{\quad}$

Answers

1. _____

2. _____

3. _____

4. _____

5. _____

6. _____

7. _____

8. _____

9. _____

10. _____

11. _____

12. _____

13. _____

14. _____

15. _____

16. _____



Solve each problem.

1) $3 + 2 = \underline{5}$

2) $5 + 0 = \underline{5}$

3) $3 + 1 = \underline{4}$

4) $3 + 0 = \underline{3}$

5) $2 + 0 = \underline{2}$

6) $4 + 0 = \underline{4}$

7) $1 + 3 = \underline{4}$

8) $1 + 4 = \underline{5}$

9) $3 - 3 = \underline{0}$

10) $4 - 3 = \underline{1}$

11) $5 - 2 = \underline{3}$

12) $4 - 1 = \underline{3}$

13) $5 - 4 = \underline{1}$

14) $5 - 3 = \underline{2}$

15) $4 - 2 = \underline{2}$

16) $3 - 2 = \underline{1}$

Answers

1. 5

2. 5

3. 4

4. 3

5. 2

6. 4

7. 4

8. 5

9. 0

10. 1

11. 3

12. 3

13. 1

14. 2


15. 2

16. 1

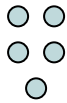


Solve each problem.


1) $3 + 2 = \underline{\quad}$




2) $5 + 0 = \underline{\quad}$




3) $3 + 1 = \underline{\quad}$




4) $3 + 0 = \underline{\quad}$



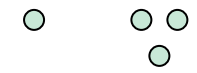
5) $2 + 0 = \underline{\quad}$



6) $4 + 0 = \underline{\quad}$




7) $1 + 3 = \underline{\quad}$




8) $1 + 4 = \underline{\quad}$



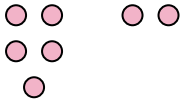
9) $3 - 3 = \underline{\quad}$




10) $4 - 3 = \underline{\quad}$



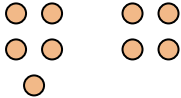
11) $5 - 2 = \underline{\quad}$



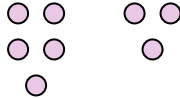
12) $4 - 1 = \underline{\quad}$




13) $5 - 4 = \underline{\quad}$




14) $5 - 3 = \underline{\quad}$



15) $4 - 2 = \underline{\quad}$



16) $3 - 2 = \underline{\quad}$



Answers

1. _____
2. _____
3. _____
4. _____
5. _____
6. _____
7. _____
8. _____
9. _____
10. _____
11. _____
12. _____
13. _____
14. _____
15. _____
16. _____



Solve each problem.

Answers

1) $2 + 2 = \underline{\quad}$

2) $5 + 0 = \underline{\quad}$

3) $3 + 0 = \underline{\quad}$

4) $1 + 1 = \underline{\quad}$

5) $4 + 1 = \underline{\quad}$

6) $2 + 3 = \underline{\quad}$

7) $1 + 4 = \underline{\quad}$

8) $1 + 3 = \underline{\quad}$

9) $5 - 5 = \underline{\quad}$

10) $5 - 1 = \underline{\quad}$

11) $5 - 4 = \underline{\quad}$

12) $5 - 3 = \underline{\quad}$

13) $5 - 2 = \underline{\quad}$

14) $4 - 4 = \underline{\quad}$

15) $3 - 3 = \underline{\quad}$

16) $3 - 1 = \underline{\quad}$

1. _____

2. _____

3. _____

4. _____

5. _____

6. _____

7. _____

8. _____

9. _____

10. _____

11. _____

12. _____

13. _____

14. _____

15. _____

16. _____



Solve each problem.

1) $2 + 2 = \underline{4}$

2) $5 + 0 = \underline{5}$

3) $3 + 0 = \underline{3}$

4) $1 + 1 = \underline{2}$

5) $4 + 1 = \underline{5}$

6) $2 + 3 = \underline{5}$

7) $1 + 4 = \underline{5}$

8) $1 + 3 = \underline{4}$

9) $5 - 5 = \underline{0}$

10) $5 - 1 = \underline{4}$

11) $5 - 4 = \underline{1}$

12) $5 - 3 = \underline{2}$

13) $5 - 2 = \underline{3}$

14) $4 - 4 = \underline{0}$



15) $3 - 3 = \underline{0}$


16) $3 - 1 = \underline{2}$


Answers1. 42. 53. 34. 25. 56. 57. 58. 49. 010. 411. 112. 213. 314. 015. 016. 2







Solve each problem.



1) 2 + 2 = _____
 + 



2) 5 + 0 = _____




3) 3 + 0 = _____




4) 1 + 1 = _____
 + 

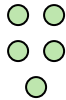

5) 4 + 1 = _____
 + 



6) 2 + 3 = _____
 + 



7) 1 + 4 = _____
 + 



8) 1 + 3 = _____
 + 



9) 5 - 5 = _____
 - 



10) 5 - 1 = _____
 - 



11) 5 - 4 = _____
 - 

12) 5 - 3 = _____
 - 

13) 5 - 2 = _____
 - 

14) 4 - 4 = _____
 - 

15) 3 - 3 = _____
 - 

16) 3 - 1 = _____
 - 

Answers

1. _____
2. _____
3. _____
4. _____
5. _____
6. _____
7. _____
8. _____
9. _____
10. _____
11. _____
12. _____
13. _____
14. _____
15. _____
16. _____



Solve each problem.

1) $4 + 0 = \underline{\quad}$

2) $5 + 0 = \underline{\quad}$

3) $4 + 1 = \underline{\quad}$

4) $2 + 2 = \underline{\quad}$

5) $1 + 2 = \underline{\quad}$

6) $3 + 1 = \underline{\quad}$

7) $1 + 0 = \underline{\quad}$

8) $1 + 1 = \underline{\quad}$

9) $3 - 2 = \underline{\quad}$

10) $4 - 1 = \underline{\quad}$

11) $5 - 5 = \underline{\quad}$

12) $2 - 1 = \underline{\quad}$

13) $5 - 4 = \underline{\quad}$

14) $5 - 1 = \underline{\quad}$

15) $4 - 3 = \underline{\quad}$

16) $4 - 4 = \underline{\quad}$

Answers

1. _____

2. _____

3. _____

4. _____

5. _____

6. _____

7. _____

8. _____

9. _____

10. _____

11. _____

12. _____

13. _____

14. _____

15. _____

16. _____



Solve each problem.

1) $4 + 0 = \underline{4}$

2) $5 + 0 = \underline{5}$

3) $4 + 1 = \underline{5}$

4) $2 + 2 = \underline{4}$

5) $1 + 2 = \underline{3}$

6) $3 + 1 = \underline{4}$

7) $1 + 0 = \underline{1}$

8) $1 + 1 = \underline{2}$

9) $3 - 2 = \underline{1}$

10) $4 - 1 = \underline{3}$

11) $5 - 5 = \underline{0}$

12) $2 - 1 = \underline{1}$

13) $5 - 4 = \underline{1}$

14) $5 - 1 = \underline{4}$

15) $4 - 3 = \underline{1}$


16) $4 - 4 = \underline{0}$

Answers1. 42. 53. 54. 45. 36. 47. 18. 29. 110. 311. 012. 113. 114. 415. 116. 0

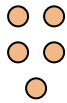


Solve each problem.


1) $4 + 0 = \underline{\quad}$




2) $5 + 0 = \underline{\quad}$




3) $4 + 1 = \underline{\quad}$



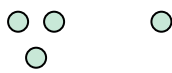
4) $2 + 2 = \underline{\quad}$




5) $1 + 2 = \underline{\quad}$




6) $3 + 1 = \underline{\quad}$




7) $1 + 0 = \underline{\quad}$




8) $1 + 1 = \underline{\quad}$



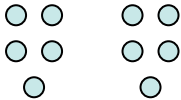
9) $3 - 2 = \underline{\quad}$




10) $4 - 1 = \underline{\quad}$



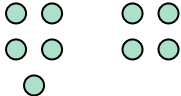
11) $5 - 5 = \underline{\quad}$




12) $2 - 1 = \underline{\quad}$




13) $5 - 4 = \underline{\quad}$




14) $5 - 1 = \underline{\quad}$



15) $4 - 3 = \underline{\quad}$



16) $4 - 4 = \underline{\quad}$



Answers

1. _____
2. _____
3. _____
4. _____
5. _____
6. _____
7. _____
8. _____
9. _____
10. _____
11. _____
12. _____
13. _____
14. _____
15. _____
16. _____



Solve each problem.

1) $2 + 2 = \underline{\quad}$

2) $3 + 2 = \underline{\quad}$

3) $5 + 0 = \underline{\quad}$

4) $4 + 1 = \underline{\quad}$

5) $1 + 3 = \underline{\quad}$

6) $2 + 3 = \underline{\quad}$

7) $2 + 1 = \underline{\quad}$

8) $3 + 1 = \underline{\quad}$

9) $4 - 3 = \underline{\quad}$

10) $5 - 5 = \underline{\quad}$

11) $4 - 4 = \underline{\quad}$

12) $3 - 3 = \underline{\quad}$

13) $5 - 4 = \underline{\quad}$

14) $5 - 2 = \underline{\quad}$

15) $4 - 2 = \underline{\quad}$

16) $3 - 2 = \underline{\quad}$

Answers

1. _____

2. _____

3. _____

4. _____

5. _____

6. _____

7. _____

8. _____

9. _____

10. _____

11. _____

12. _____

13. _____

14. _____

15. _____

16. _____



Solve each problem.

1) $2 + 2 = \underline{4}$

2) $3 + 2 = \underline{5}$

3) $5 + 0 = \underline{5}$

4) $4 + 1 = \underline{5}$

5) $1 + 3 = \underline{4}$

6) $2 + 3 = \underline{5}$

7) $2 + 1 = \underline{3}$

8) $3 + 1 = \underline{4}$

9) $4 - 3 = \underline{1}$

10) $5 - 5 = \underline{0}$

11) $4 - 4 = \underline{0}$

12) $3 - 3 = \underline{0}$

13) $5 - 4 = \underline{1}$

14) $5 - 2 = \underline{3}$



15) $4 - 2 = \underline{2}$



16) $3 - 2 = \underline{1}$


Answers1. 42. 53. 54. 55. 46. 57. 38. 49. 110. 011. 012. 013. 114. 315. 216. 1







Solve each problem.



1) 2 + 2 = _____
 



2) 3 + 2 = _____
 



3) 5 + 0 = _____




4) 4 + 1 = _____
 

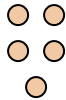
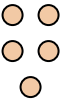
5) 1 + 3 = _____
 



6) 2 + 3 = _____
 



7) 2 + 1 = _____
 



8) 3 + 1 = _____
 



9) 4 - 3 = _____
 



10) 5 - 5 = _____
 



11) 4 - 4 = _____
 

12) 3 - 3 = _____
 

13) 5 - 4 = _____
 

14) 5 - 2 = _____
 

15) 4 - 2 = _____
 

16) 3 - 2 = _____
 

Answers

1. _____
2. _____
3. _____
4. _____
5. _____
6. _____
7. _____
8. _____
9. _____
10. _____
11. _____
12. _____
13. _____
14. _____
15. _____
16. _____



Solve each problem.

1) $4 + 1 = \underline{\quad}$

2) $1 + 3 = \underline{\quad}$

3) $3 + 2 = \underline{\quad}$

4) $4 + 0 = \underline{\quad}$

5) $1 + 2 = \underline{\quad}$

6) $5 + 0 = \underline{\quad}$

7) $2 + 2 = \underline{\quad}$

8) $2 + 0 = \underline{\quad}$

9) $5 - 4 = \underline{\quad}$

10) $5 - 5 = \underline{\quad}$

11) $4 - 2 = \underline{\quad}$

12) $4 - 3 = \underline{\quad}$

13) $3 - 2 = \underline{\quad}$

14) $1 - 1 = \underline{\quad}$

15) $3 - 1 = \underline{\quad}$

16) $5 - 2 = \underline{\quad}$

Answers

1. _____

2. _____

3. _____

4. _____

5. _____

6. _____

7. _____

8. _____

9. _____

10. _____

11. _____

12. _____

13. _____

14. _____

15. _____

16. _____



Solve each problem.

1) $4 + 1 = \underline{5}$

2) $1 + 3 = \underline{4}$

3) $3 + 2 = \underline{5}$

4) $4 + 0 = \underline{4}$

5) $1 + 2 = \underline{3}$

6) $5 + 0 = \underline{5}$

7) $2 + 2 = \underline{4}$

8) $2 + 0 = \underline{2}$

9) $5 - 4 = \underline{1}$

10) $5 - 5 = \underline{0}$

11) $4 - 2 = \underline{2}$

12) $4 - 3 = \underline{1}$

13) $3 - 2 = \underline{1}$

14) $1 - 1 = \underline{0}$

15) $3 - 1 = \underline{2}$

16) $5 - 2 = \underline{3}$


Answers1. 52. 43. 54. 45. 36. 57. 48. 29. 110. 011. 212. 113. 114. 015. 216. 3




Solve each problem.

Answers


1) $4 + 1 = \underline{\quad}$




2) $1 + 3 = \underline{\quad}$




3) $3 + 2 = \underline{\quad}$




4) $4 + 0 = \underline{\quad}$




5) $1 + 2 = \underline{\quad}$




6) $5 + 0 = \underline{\quad}$



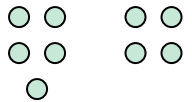
7) $2 + 2 = \underline{\quad}$



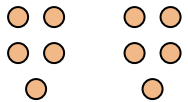
8) $2 + 0 = \underline{\quad}$



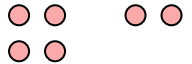
9) $5 - 4 = \underline{\quad}$




10) $5 - 5 = \underline{\quad}$




11) $4 - 2 = \underline{\quad}$




12) $4 - 3 = \underline{\quad}$




13) $3 - 2 = \underline{\quad}$



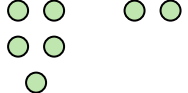
14) $1 - 1 = \underline{\quad}$



15) $3 - 1 = \underline{\quad}$



16) $5 - 2 = \underline{\quad}$



1. _____
2. _____
3. _____
4. _____
5. _____
6. _____
7. _____
8. _____
9. _____
10. _____
11. _____
12. _____
13. _____
14. _____
15. _____
16. _____



Solve each problem.

1) $4 + 1 = \underline{\quad}$

2) $2 + 2 = \underline{\quad}$

3) $2 + 3 = \underline{\quad}$

4) $3 + 2 = \underline{\quad}$

5) $1 + 4 = \underline{\quad}$

6) $5 + 0 = \underline{\quad}$

7) $1 + 3 = \underline{\quad}$

8) $3 + 1 = \underline{\quad}$

9) $5 - 3 = \underline{\quad}$

10) $5 - 5 = \underline{\quad}$

11) $5 - 4 = \underline{\quad}$

12) $4 - 4 = \underline{\quad}$

13) $2 - 1 = \underline{\quad}$

14) $4 - 2 = \underline{\quad}$

15) $3 - 1 = \underline{\quad}$

16) $4 - 3 = \underline{\quad}$

Answers

1. _____

2. _____

3. _____

4. _____

5. _____

6. _____

7. _____

8. _____

9. _____

10. _____

11. _____

12. _____

13. _____

14. _____

15. _____

16. _____



Solve each problem.

1) $4 + 1 = \underline{5}$

2) $2 + 2 = \underline{4}$

3) $2 + 3 = \underline{5}$

4) $3 + 2 = \underline{5}$

5) $1 + 4 = \underline{5}$

6) $5 + 0 = \underline{5}$

7) $1 + 3 = \underline{4}$

8) $3 + 1 = \underline{4}$

9) $5 - 3 = \underline{2}$

10) $5 - 5 = \underline{0}$

11) $5 - 4 = \underline{1}$

12) $4 - 4 = \underline{0}$

13) $2 - 1 = \underline{1}$

14) $4 - 2 = \underline{2}$

15) $3 - 1 = \underline{2}$

16) $4 - 3 = \underline{1}$

Answers1. 52. 43. 54. 55. 56. 57. 48. 49. 210. 011. 112. 013. 114. 215. 216. 1



Solve each problem.

1) $4 + 1 = \underline{\quad}$

2) $2 + 2 = \underline{\quad}$

3) $2 + 3 = \underline{\quad}$

4) $3 + 2 = \underline{\quad}$

5) $1 + 4 = \underline{\quad}$

6) $5 + 0 = \underline{\quad}$

7) $1 + 3 = \underline{\quad}$

8) $3 + 1 = \underline{\quad}$

9) $5 - 3 = \underline{\quad}$

10) $5 - 5 = \underline{\quad}$

11) $5 - 4 = \underline{\quad}$

12) $4 - 4 = \underline{\quad}$

13) $2 - 1 = \underline{\quad}$

14) $4 - 2 = \underline{\quad}$

15) $3 - 1 = \underline{\quad}$

16) $4 - 3 = \underline{\quad}$

Answers

1. _____
2. _____
3. _____
4. _____
5. _____
6. _____
7. _____
8. _____
9. _____
10. _____
11. _____
12. _____
13. _____
14. _____
15. _____
16. _____