



Solve each problem.

1) $4 + 1 = \underline{\quad}$

2) $1 + 3 = \underline{\quad}$

3) $3 + 2 = \underline{\quad}$

4) $4 + 0 = \underline{\quad}$

5) $1 + 2 = \underline{\quad}$

6) $5 + 0 = \underline{\quad}$

7) $2 + 2 = \underline{\quad}$

8) $2 + 0 = \underline{\quad}$

9) $5 - 4 = \underline{\quad}$

10) $5 - 5 = \underline{\quad}$

11) $4 - 2 = \underline{\quad}$

12) $4 - 3 = \underline{\quad}$

13) $3 - 2 = \underline{\quad}$

14) $1 - 1 = \underline{\quad}$

15) $3 - 1 = \underline{\quad}$

16) $5 - 2 = \underline{\quad}$

Answers

1. _____

2. _____

3. _____

4. _____

5. _____

6. _____

7. _____

8. _____

9. _____

10. _____

11. _____

12. _____

13. _____

14. _____

15. _____

16. _____



Solve each problem.

1) $4 + 1 = \underline{5}$

2) $1 + 3 = \underline{4}$

3) $3 + 2 = \underline{5}$

4) $4 + 0 = \underline{4}$

5) $1 + 2 = \underline{3}$

6) $5 + 0 = \underline{5}$

7) $2 + 2 = \underline{4}$

8) $2 + 0 = \underline{2}$

9) $5 - 4 = \underline{1}$

10) $5 - 5 = \underline{0}$

11) $4 - 2 = \underline{2}$

12) $4 - 3 = \underline{1}$

13) $3 - 2 = \underline{1}$

14) $1 - 1 = \underline{0}$

15) $3 - 1 = \underline{2}$

16) $5 - 2 = \underline{3}$

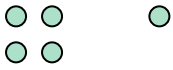
Answers1. 52. 43. 54. 45. 36. 57. 48. 29. 110. 011. 212. 113. 114. 015. 216. 3




Solve each problem.

Answers

1) $4 + 1 = \underline{\quad}$




2) $1 + 3 = \underline{\quad}$




1. _____

2. _____

3) $3 + 2 = \underline{\quad}$




4) $4 + 0 = \underline{\quad}$



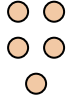
3. _____

4. _____

5) $1 + 2 = \underline{\quad}$



6) $5 + 0 = \underline{\quad}$




5. _____


6. _____

7. _____

7) $2 + 2 = \underline{\quad}$



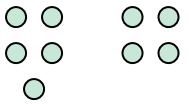
8) $2 + 0 = \underline{\quad}$



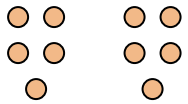
8. _____

9. _____

9) $5 - 4 = \underline{\quad}$



10) $5 - 5 = \underline{\quad}$




10. _____


11. _____

12. _____

11) $4 - 2 = \underline{\quad}$



12) $4 - 3 = \underline{\quad}$




13. _____


14. _____

15. _____

13) $3 - 2 = \underline{\quad}$




14) $1 - 1 = \underline{\quad}$



16. _____

15) $3 - 1 = \underline{\quad}$



16) $5 - 2 = \underline{\quad}$

