



Solve each problem.

1) $2 + 2 = \underline{\quad}$

2) $5 + 0 = \underline{\quad}$

3) $3 + 0 = \underline{\quad}$

4) $1 + 1 = \underline{\quad}$

5) $4 + 1 = \underline{\quad}$

6) $2 + 3 = \underline{\quad}$

7) $1 + 4 = \underline{\quad}$

8) $1 + 3 = \underline{\quad}$

9) $5 - 5 = \underline{\quad}$

10) $5 - 1 = \underline{\quad}$

11) $5 - 4 = \underline{\quad}$

12) $5 - 3 = \underline{\quad}$

13) $5 - 2 = \underline{\quad}$

14) $4 - 4 = \underline{\quad}$

15) $3 - 3 = \underline{\quad}$

16) $3 - 1 = \underline{\quad}$

Answers

1. _____

2. _____

3. _____

4. _____

5. _____

6. _____

7. _____

8. _____

9. _____

10. _____

11. _____

12. _____

13. _____

14. _____

15. _____

16. _____



Solve each problem.

1) $2 + 2 = \underline{4}$

2) $5 + 0 = \underline{5}$

3) $3 + 0 = \underline{3}$

4) $1 + 1 = \underline{2}$

5) $4 + 1 = \underline{5}$

6) $2 + 3 = \underline{5}$

7) $1 + 4 = \underline{5}$

8) $1 + 3 = \underline{4}$

9) $5 - 5 = \underline{0}$

10) $5 - 1 = \underline{4}$

11) $5 - 4 = \underline{1}$

12) $5 - 3 = \underline{2}$

13) $5 - 2 = \underline{3}$

14) $4 - 4 = \underline{0}$

15) $3 - 3 = \underline{0}$

16) $3 - 1 = \underline{2}$

Answers1. 42. 53. 34. 25. 56. 57. 58. 49. 010. 411. 112. 213. 314. 015. 016. 2

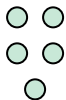


Solve each problem.

1) $2 + 2 = \underline{\quad}$



2) $5 + 0 = \underline{\quad}$



3) $3 + 0 = \underline{\quad}$



4) $1 + 1 = \underline{\quad}$



5) $4 + 1 = \underline{\quad}$




6) $2 + 3 = \underline{\quad}$



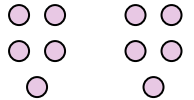
7) $1 + 4 = \underline{\quad}$



8) $1 + 3 = \underline{\quad}$



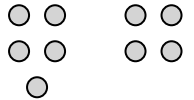
9) $5 - 5 = \underline{\quad}$



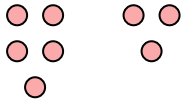
10) $5 - 1 = \underline{\quad}$



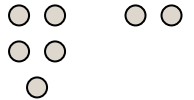
11) $5 - 4 = \underline{\quad}$



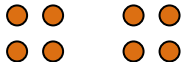
12) $5 - 3 = \underline{\quad}$




13) $5 - 2 = \underline{\quad}$



14) $4 - 4 = \underline{\quad}$



15) $3 - 3 = \underline{\quad}$



16) $3 - 1 = \underline{\quad}$



Answers

1. _____

2. _____

3. _____

4. _____

5. _____

6. _____

7. _____

8. _____

9. _____

10. _____

11. _____

12. _____

13. _____

14. _____

15. _____

16. _____