



Solve each problem.

1)  $1 + 1 = \underline{\quad}$

2)  $2 + 1 = \underline{\quad}$

3)  $1 + 4 = \underline{\quad}$

4)  $3 + 0 = \underline{\quad}$

5)  $3 + 2 = \underline{\quad}$

6)  $4 + 0 = \underline{\quad}$

7)  $1 + 2 = \underline{\quad}$

8)  $5 + 0 = \underline{\quad}$

9)  $5 - 2 = \underline{\quad}$

10)  $4 - 4 = \underline{\quad}$

11)  $5 - 5 = \underline{\quad}$

12)  $2 - 2 = \underline{\quad}$

13)  $3 - 3 = \underline{\quad}$

14)  $4 - 2 = \underline{\quad}$

15)  $5 - 3 = \underline{\quad}$

16)  $2 - 1 = \underline{\quad}$

**Answers**

1. \_\_\_\_\_

2. \_\_\_\_\_

3. \_\_\_\_\_

4. \_\_\_\_\_

5. \_\_\_\_\_

6. \_\_\_\_\_

7. \_\_\_\_\_

8. \_\_\_\_\_

9. \_\_\_\_\_

10. \_\_\_\_\_

11. \_\_\_\_\_

12. \_\_\_\_\_

13. \_\_\_\_\_

14. \_\_\_\_\_

15. \_\_\_\_\_

16. \_\_\_\_\_



Solve each problem.

1)  $1 + 1 = \underline{2}$

2)  $2 + 1 = \underline{3}$

3)  $1 + 4 = \underline{5}$

4)  $3 + 0 = \underline{3}$

5)  $3 + 2 = \underline{5}$

6)  $4 + 0 = \underline{4}$

7)  $1 + 2 = \underline{3}$

8)  $5 + 0 = \underline{5}$

9)  $5 - 2 = \underline{3}$

10)  $4 - 4 = \underline{0}$

11)  $5 - 5 = \underline{0}$

12)  $2 - 2 = \underline{0}$

13)  $3 - 3 = \underline{0}$

14)  $4 - 2 = \underline{2}$

15)  $5 - 3 = \underline{2}$



16)  $2 - 1 = \underline{1}$



**Answers**1. 22. 33. 54. 35. 56. 47. 38. 59. 310. 011. 012. 013. 014. 215. 216. 1






Solve each problem.



Answers


1) 1 + 1 = \_\_\_\_\_  
 + 


2) 2 + 1 = \_\_\_\_\_  
 + 

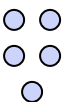
3) 1 + 4 = \_\_\_\_\_  
 + 



4) 3 + 0 = \_\_\_\_\_  




5) 3 + 2 = \_\_\_\_\_  
 + 



6) 4 + 0 = \_\_\_\_\_  




7) 1 + 2 = \_\_\_\_\_  
 + 



8) 5 + 0 = \_\_\_\_\_  




9) 5 - 2 = \_\_\_\_\_  
 - 



10) 4 - 4 = \_\_\_\_\_  
 - 



11) 5 - 5 = \_\_\_\_\_  
 - 

12) 2 - 2 = \_\_\_\_\_  
 - 

13) 3 - 3 = \_\_\_\_\_  
 - 

14) 4 - 2 = \_\_\_\_\_  
 - 

15) 5 - 3 = \_\_\_\_\_  
 - 

16) 2 - 1 = \_\_\_\_\_  
 - 

1. \_\_\_\_\_
2. \_\_\_\_\_
3. \_\_\_\_\_
4. \_\_\_\_\_
5. \_\_\_\_\_
6. \_\_\_\_\_
7. \_\_\_\_\_
8. \_\_\_\_\_
9. \_\_\_\_\_
10. \_\_\_\_\_
11. \_\_\_\_\_
12. \_\_\_\_\_
13. \_\_\_\_\_
14. \_\_\_\_\_
15. \_\_\_\_\_
16. \_\_\_\_\_