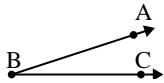




Solve each problem.

Answers

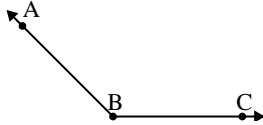
1)



Which choice best represents $\angle ABC$?

- A. 91°
- B. 18°
- C. 173°
- D. 133°

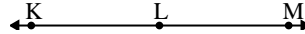
2)



Which choice best represents $\angle ABC$?

- A. 157°
- B. 37°
- C. 135°
- D. 7°

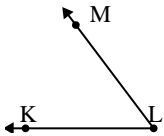
3)



Which choice best represents $\angle KLM$?

- A. 57°
- B. 180°
- C. 12°
- D. 158°

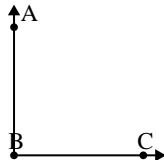
4)



Which choice best represents $\angle KLM$?

- A. 147°
- B. 13°
- C. 53°
- D. 170°

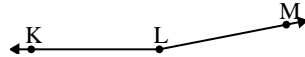
5)



Which choice best represents $\angle ABC$?

- A. 90°
- B. 114°
- C. 50°
- D. 4°

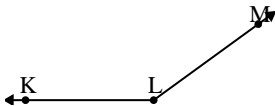
6)



Which choice best represents $\angle KLM$?

- A. 107°
- B. 169°
- C. 11°
- D. 39°

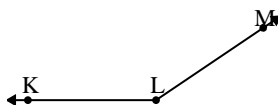
7)



Which choice best represents $\angle KLM$?

- A. 144°
- B. 38°
- C. 104°
- D. 2°

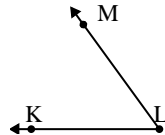
8)



Which choice best represents $\angle KLM$?

- A. 86°
- B. 40°
- C. 146°
- D. 173°

9)



Which choice best represents $\angle KLM$?

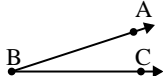
- A. 54°
- B. 89°
- C. 28°
- D. 151°

1. _____
2. _____
3. _____
4. _____
5. _____
6. _____
7. _____
8. _____
9. _____



Solve each problem.

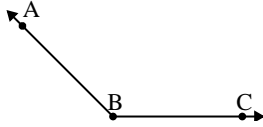
1)



Which choice best represents $\angle ABC$?

- A. 91°
- B. 18°
- C. 173°
- D. 133°

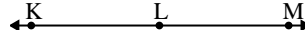
2)



Which choice best represents $\angle ABC$?

- A. 157°
- B. 37°
- C. 135°
- D. 7°

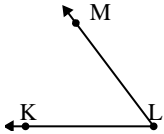
3)



Which choice best represents $\angle KLM$?

- A. 57°
- B. 180°
- C. 12°
- D. 158°

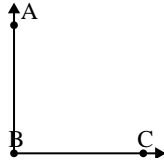
4)



Which choice best represents $\angle KLM$?

- A. 147°
- B. 13°
- C. 53°
- D. 170°

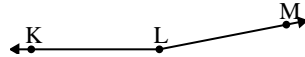
5)



Which choice best represents $\angle ABC$?

- A. 90°
- B. 114°
- C. 50°
- D. 4°

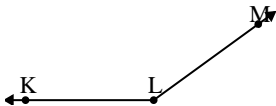
6)



Which choice best represents $\angle KLM$?

- A. 107°
- B. 169°
- C. 11°
- D. 39°

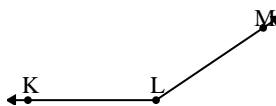
7)



Which choice best represents $\angle KLM$?

- A. 144°
- B. 38°
- C. 104°
- D. 2°

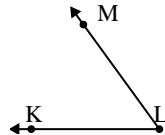
8)



Which choice best represents $\angle KLM$?

- A. 86°
- B. 40°
- C. 146°
- D. 173°

9)



Which choice best represents $\angle KLM$?

- A. 54°
- B. 89°
- C. 28°
- D. 151°

Answers

1. **B**
2. **C**
3. **B**
4. **C**
5. **A**
6. **B**
7. **A**
8. **C**
9. **A**