



Fill in the blanks to find the amounts.

Ex)

1)

2)

**Answers**

Ex.     4    

1. \_\_\_\_\_

2. \_\_\_\_\_

3. \_\_\_\_\_

4. \_\_\_\_\_

5. \_\_\_\_\_

6. \_\_\_\_\_

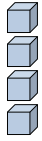
7. \_\_\_\_\_

8. \_\_\_\_\_

9. \_\_\_\_\_

10. \_\_\_\_\_

11. \_\_\_\_\_



0

4

tens

ones



tens

ones



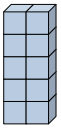
tens

ones

3)

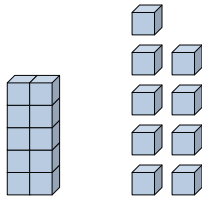
4)

5)



tens

ones



tens

ones



tens

ones

6)

7)

8)



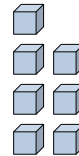
tens

ones



tens

ones



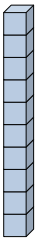
tens

ones

9)

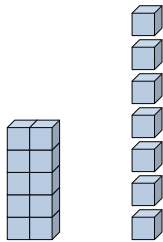
10)

11)



tens

ones



tens

ones



tens

ones

