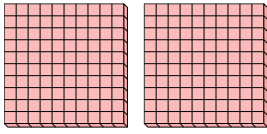




Use the groups to answer each question.

**Answers**

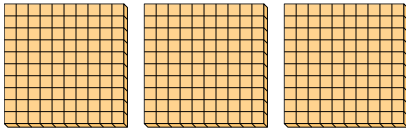
- 1) a. How many groups of 100 are there?
- b. How many small blocks are there total?



1. \_\_\_\_\_

2. \_\_\_\_\_


- 2) a. How many groups of 100 are there?
- b. How many small blocks are there total?



3. \_\_\_\_\_

4. \_\_\_\_\_

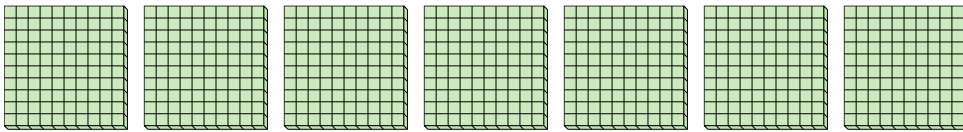
- 3) a. How many groups of 100 are there?
- b. How many small blocks are there total?



5. \_\_\_\_\_


6. \_\_\_\_\_

- 4) a. How many groups of 100 are there?
- b. How many small blocks are there total?

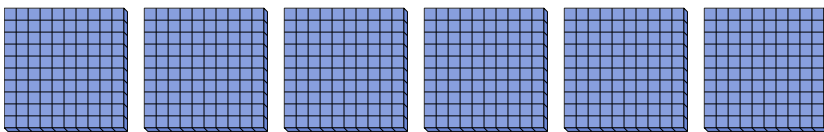


7. \_\_\_\_\_

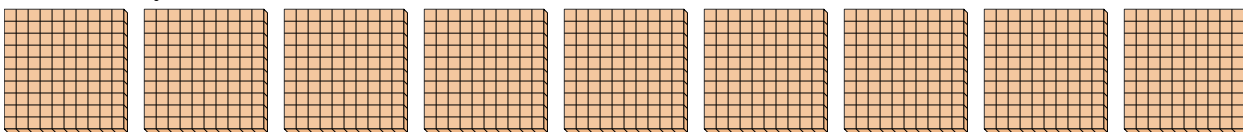
- 5) a. How many groups of 100 are there?
- b. How many small blocks are there total?



- 6) a. How many groups of 100 are there?
- b. How many small blocks are there total?



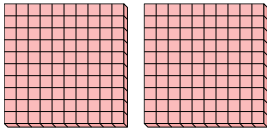
- 7) a. How many groups of 100 are there?
- b. How many small blocks are there total?



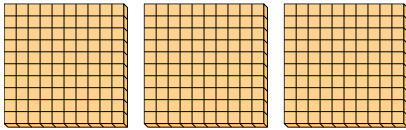


Use the groups to answer each question.


- 1) a. How many groups of 100 are there?
- b. How many small blocks are there total?



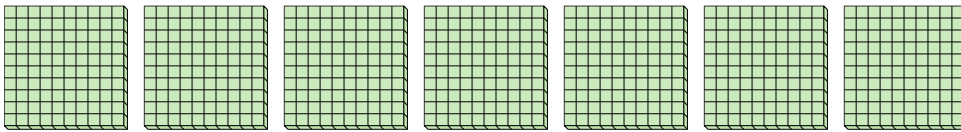
- 2) a. How many groups of 100 are there?
- b. How many small blocks are there total?




- 3) a. How many groups of 100 are there?
- b. How many small blocks are there total?



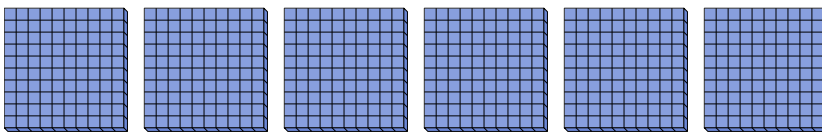
- 4) a. How many groups of 100 are there?
- b. How many small blocks are there total?



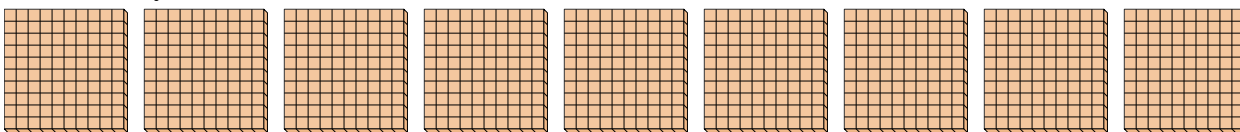
- 5) a. How many groups of 100 are there?
- b. How many small blocks are there total?



- 6) a. How many groups of 100 are there?
- b. How many small blocks are there total?



- 7) a. How many groups of 100 are there?
- b. How many small blocks are there total?



**Answers**

- 1.   2    200
- 2.   3    300
- 3.   5    500
- 4.   7    700
- 5.   8    800
- 6.   6    600
- 7.   9    900