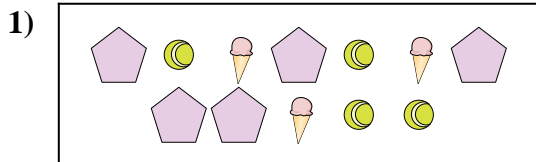





Compare the number of shapes.



Are there less or less ?

A.

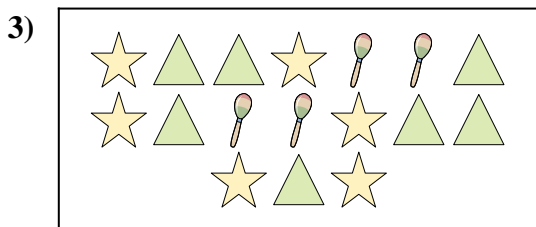
B.



Are there more or more ?

A.


B.



Are there less or less ?

A.


B.



Are there less or less ?

A.

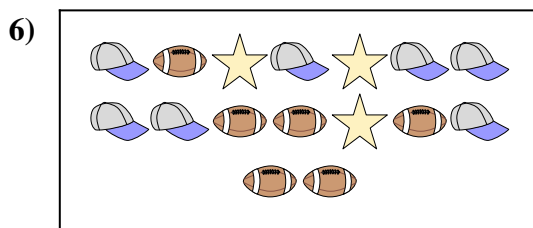
B.



Are there less or less ?

A.

B.



Are there less or less ?

A.

B.

**Answers**

1. \_\_\_\_\_

2. \_\_\_\_\_

3. \_\_\_\_\_

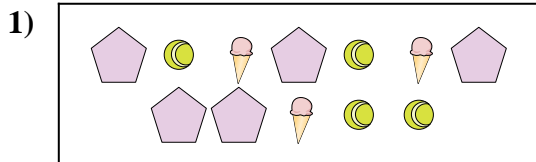
4. \_\_\_\_\_

5. \_\_\_\_\_


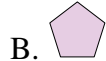
6. \_\_\_\_\_



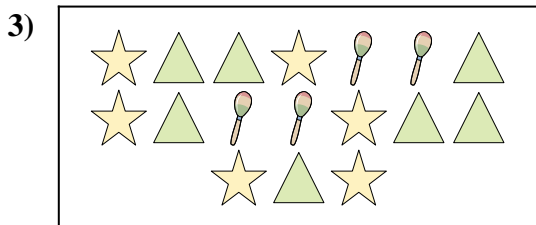
Compare the number of shapes.




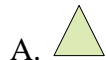
Are there less or less ?




Are there more or more ?



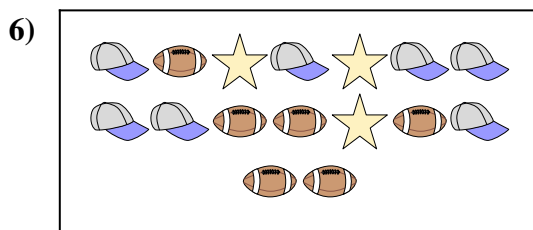
Are there less or less ?



Are there less or less ?



Are there less or less ?



Are there less or less ?



**Answers**

1. **A**

2. **A**

3. **B**

4. **B**

5. **A**

6. **B**