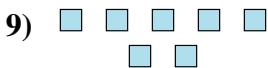
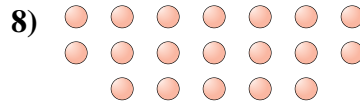
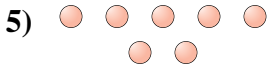
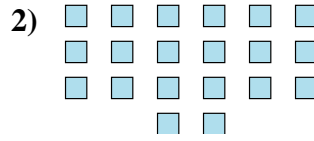
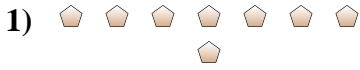




Determine if the number of shapes is even or odd.



Answers

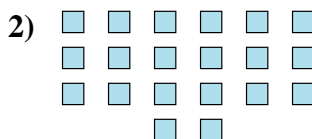
- 1. _____
- 2. _____
- 3. _____
- 4. _____
- 5. _____
- 6. _____
- 7. _____
- 8. _____
- 9. _____
- 10. _____



Determine if the number of shapes is even or odd.



8



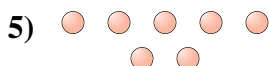
20



7



7



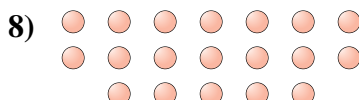
7



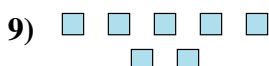
11



8



19



7



7

Answers

1. even

2. even

3. odd

4. odd

5. odd

6. odd

7. even

8. odd

9. odd

10. odd