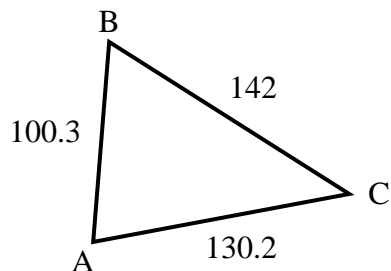




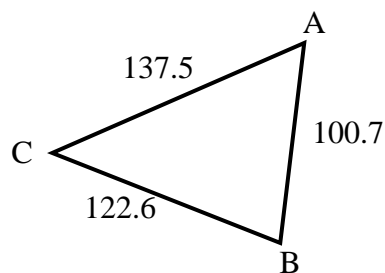
Find the length of the side listed.

Answers

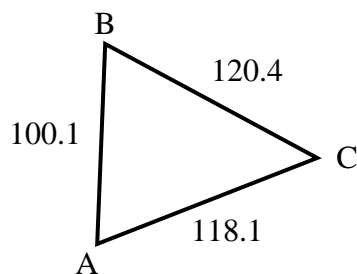
- 1) Find the length of side B.



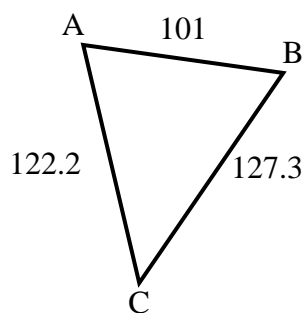
- 2) Find the length of side A.



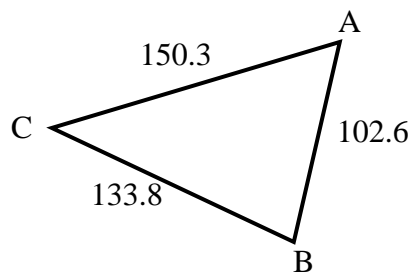
- 3) Find the length of side A.



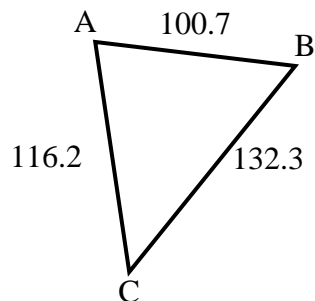
- 4) Find the length of side A.



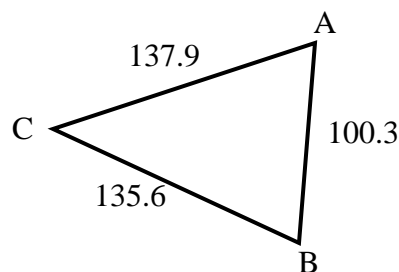
- 5) Find the length of side A.



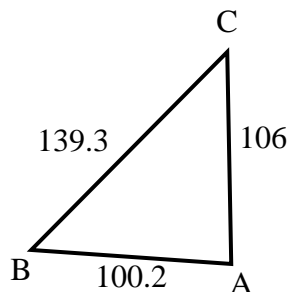
- 6) Find the length of side B.



- 7) Find the length of side A.



- 8) Find the length of side A.

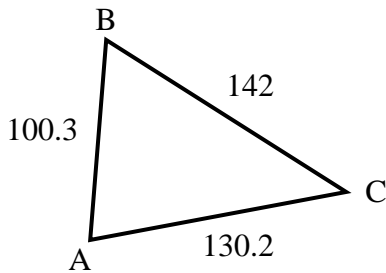


1. _____
2. _____
3. _____
4. _____
5. _____
6. _____
7. _____
8. _____

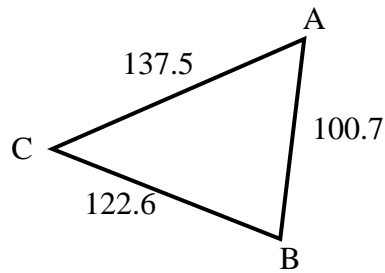


Find the length of the side listed.

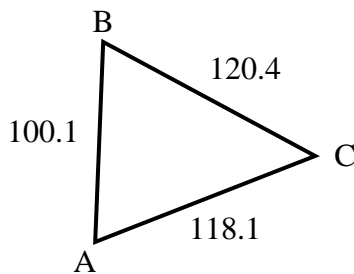
- 1) Find the length of side B.



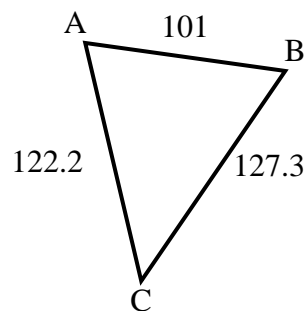
- 2) Find the length of side A.



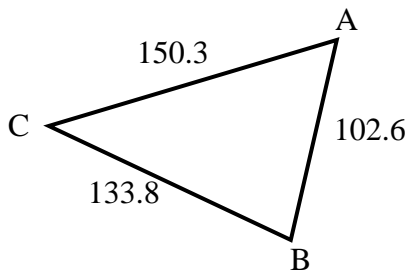
- 3) Find the length of side A.



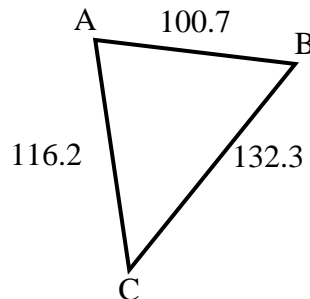
- 4) Find the length of side A.



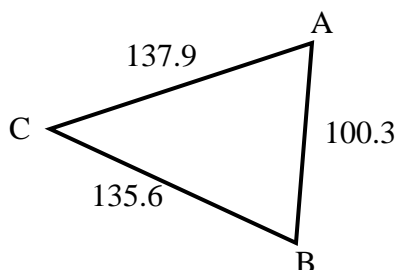
- 5) Find the length of side A.



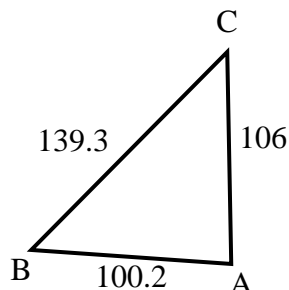
- 6) Find the length of side B.



- 7) Find the length of side A.



- 8) Find the length of side A.

**Answers**

1. **130.2**
2. **122.6**
3. **120.4**
4. **127.3**
5. **133.8**
6. **116.2**
7. **135.6**
8. **139.3**