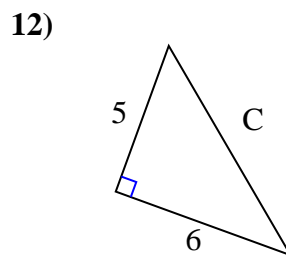
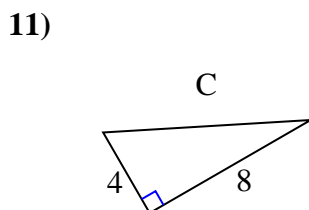
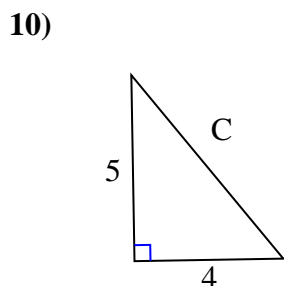
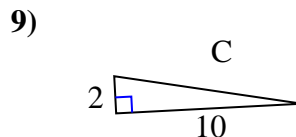
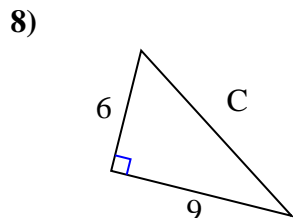
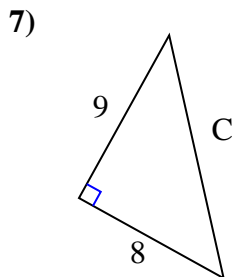
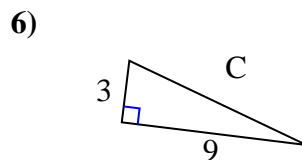
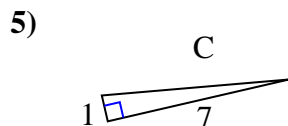
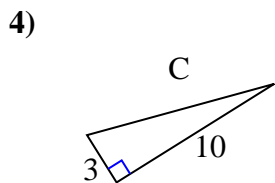
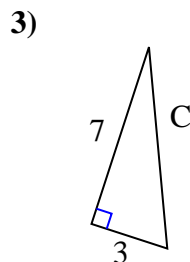
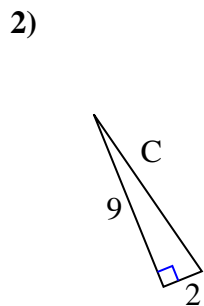
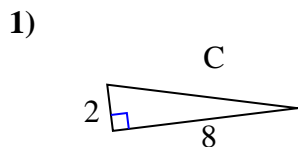




Find the value of 'C' round your answer to the nearest hundredth.

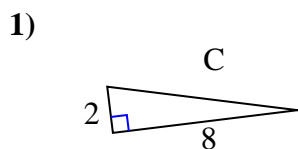


Answers

1. \_\_\_\_\_
2. \_\_\_\_\_
3. \_\_\_\_\_
4. \_\_\_\_\_
5. \_\_\_\_\_
6. \_\_\_\_\_
7. \_\_\_\_\_
8. \_\_\_\_\_
9. \_\_\_\_\_
10. \_\_\_\_\_
11. \_\_\_\_\_
12. \_\_\_\_\_

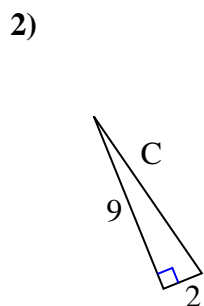


Find the value of 'C' round your answer to the nearest hundredth.



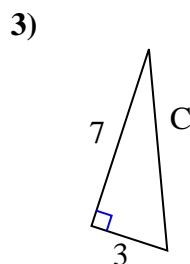
$$4 + 64 = 68$$

$$\sqrt{68} = 8.25$$



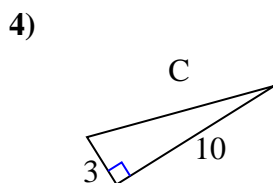
$$81 + 4 = 85$$

$$\sqrt{85} = 9.22$$



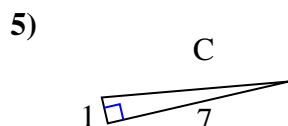
$$49 + 9 = 58$$

$$\sqrt{58} = 7.62$$



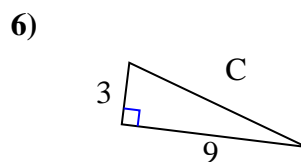
$$9 + 100 = 109$$

$$\sqrt{109} = 10.44$$



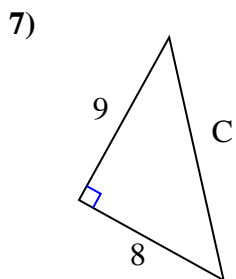
$$1 + 49 = 50$$

$$\sqrt{50} = 7.07$$



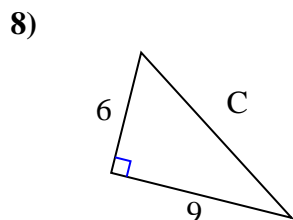
$$9 + 81 = 90$$

$$\sqrt{90} = 9.49$$



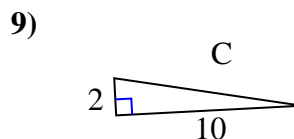
$$81 + 64 = 145$$

$$\sqrt{145} = 12.04$$



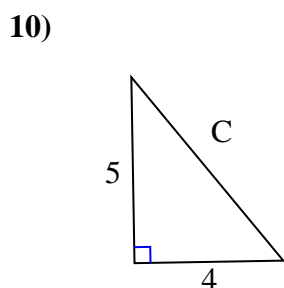
$$36 + 81 = 117$$

$$\sqrt{117} = 10.82$$



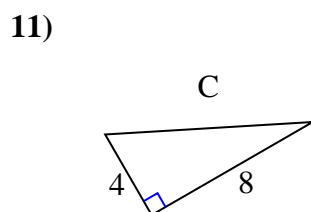
$$4 + 100 = 104$$

$$\sqrt{104} = 10.2$$



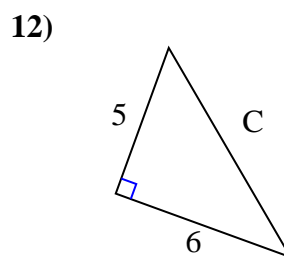
$$25 + 16 = 41$$

$$\sqrt{41} = 6.4$$



$$16 + 64 = 80$$

$$\sqrt{80} = 8.94$$



$$25 + 36 = 61$$

$$\sqrt{61} = 7.81$$

Answers1. 8.252. 9.223. 7.624. 10.445. 7.076. 9.497. 12.048. 10.829. 10.210. 6.411. 8.9412. 7.81