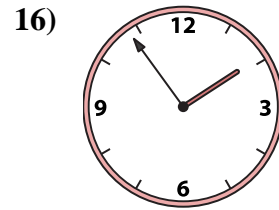
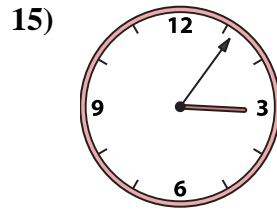
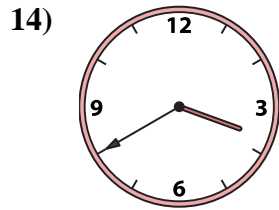
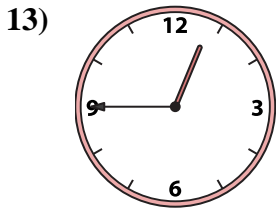
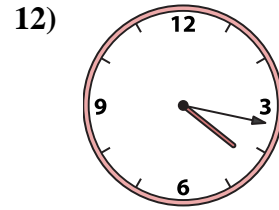
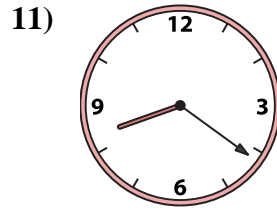
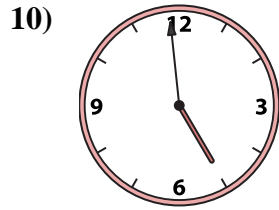
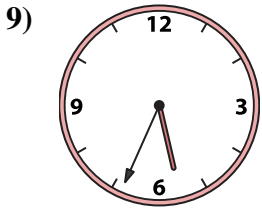
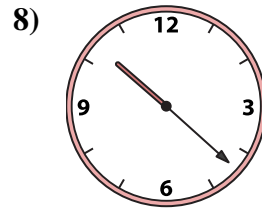
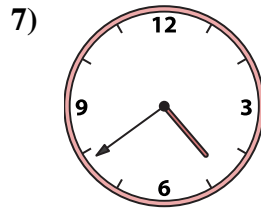
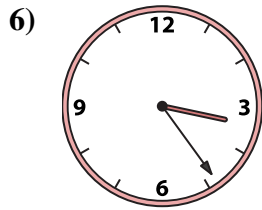
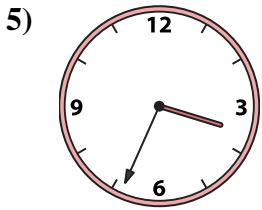
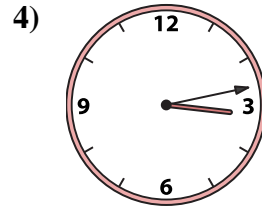
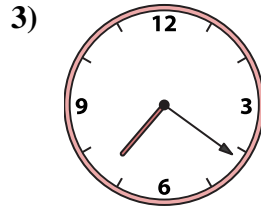
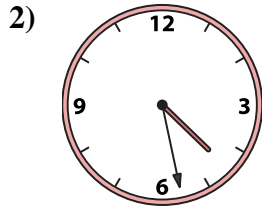
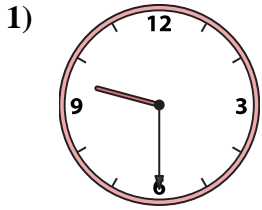




Match the analog clock to the digital clock.

Answers



A. 3:34

B. 5:34

C. 4:39

D. 10:22

E. 4:59

F. 4:17

G. 4:28

H. 9:30

I. 3:24

J. 12:45

K. 3:13

L. 7:21

M. 1:54

N. 8:21

O. 3:40

P. 3:06

1. _____

2. _____

3. _____

4. _____

5. _____

6. _____

7. _____

8. _____

9. _____

10. _____

11. _____

12. _____

13. _____

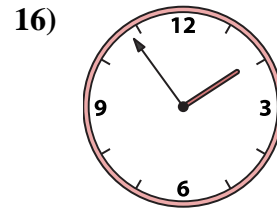
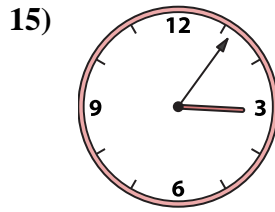
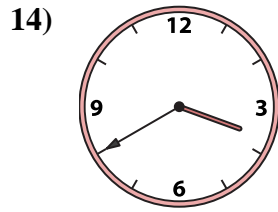
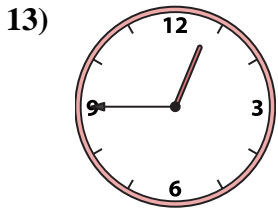
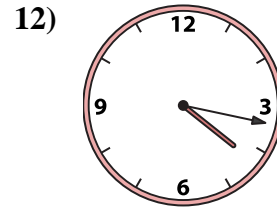
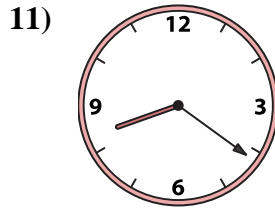
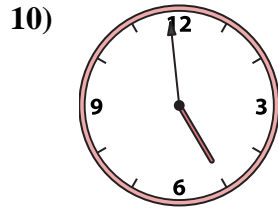
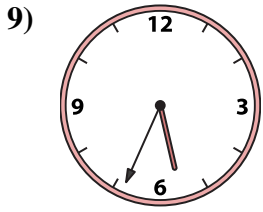
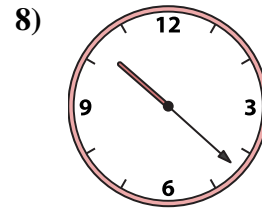
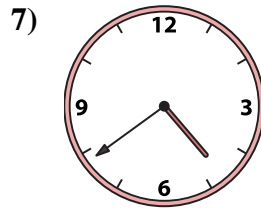
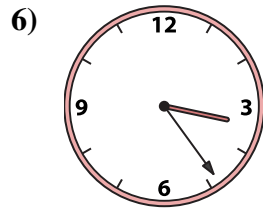
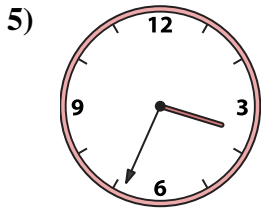
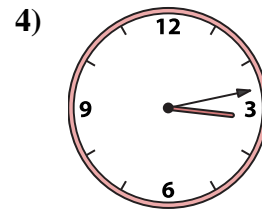
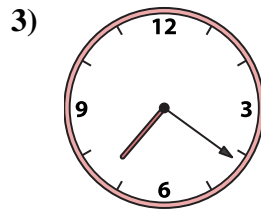
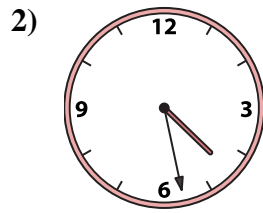
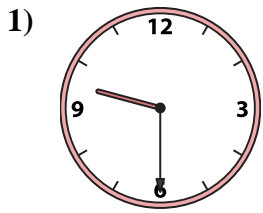
14. _____

15. _____

16. _____



Match the analog clock to the digital clock.



A. **3:34**

B. **5:34**

C. **4:39**

D. **10:22**

E. **4:59**

F. **4:17**

G. **4:28**

H. **9:30**

I. **3:24**

J. **12:45**

K. **3:13**

L. **7:21**

M. **1:54**

N. **8:21**

O. **3:40**

P. **3:06**

Answers

1. **H**

2. **G**

3. **L**

4. **K**

5. **A**

6. **I**

7. **C**

8. **D**

9. **B**

10. **E**

11. **N**

12. **F**

13. **J**

14. **O**

15. **P**

16. **M**