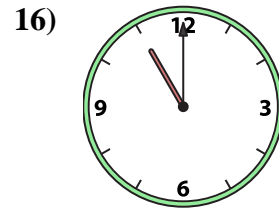
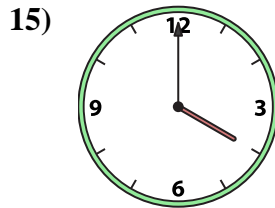
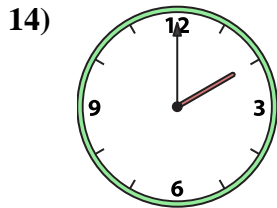
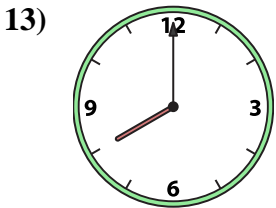
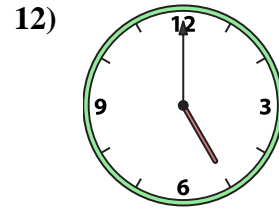
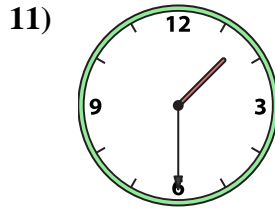
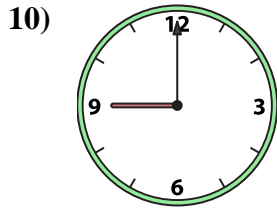
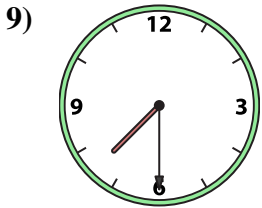
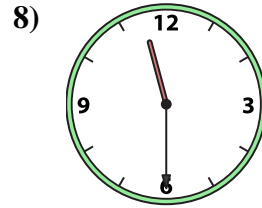
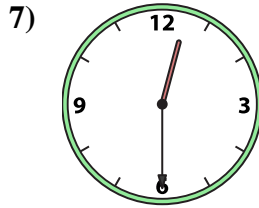

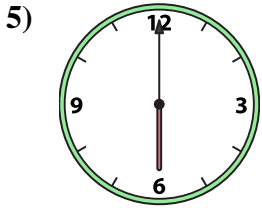
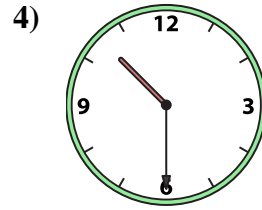
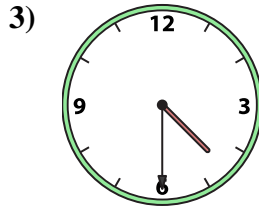
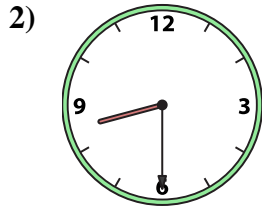
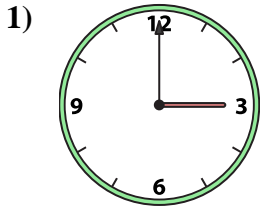




Match the analog clock to the digital clock.

Answers



A. 3:00

B. 10:00

C. 8:30

D. 11:30

E. 6:00

F. 1:30

G. 4:30

H. 9:00

I. 8:00

J. 12:30

K. 11:00

L. 5:00

M. 2:00

N. 7:30

O. 4:00

P. 10:30

1. _____

2. _____

3. _____

4. _____

5. _____

6. _____

7. _____

8. _____

9. _____

10. _____

11. _____

12. _____

13. _____

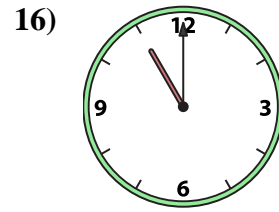
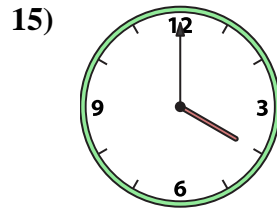
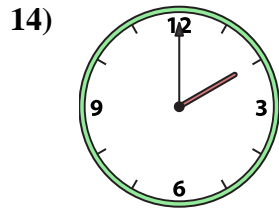
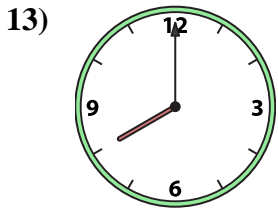
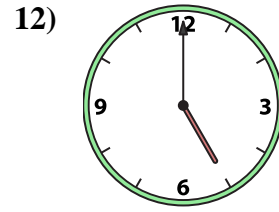
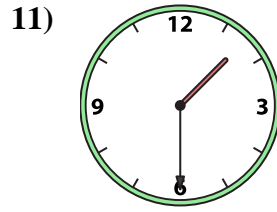
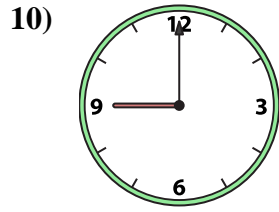
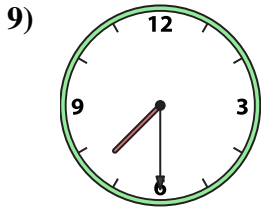
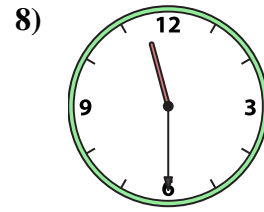
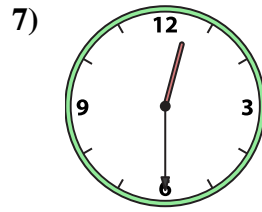
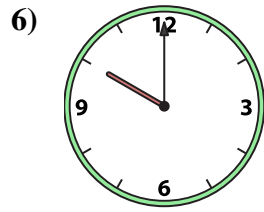
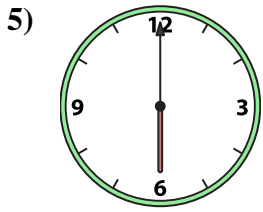
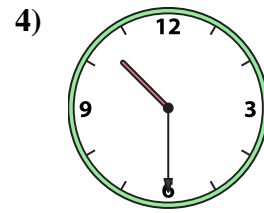
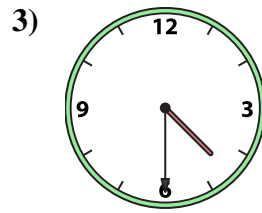
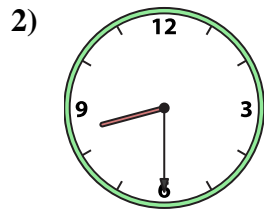
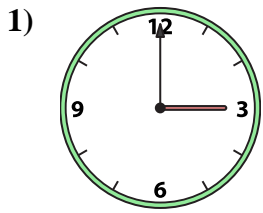
14. _____

15. _____

16. _____



Match the analog clock to the digital clock.



A. 3:00

B. 10:00

C. 8:30

D. 11:30

E. 6:00

F. 1:30

G. 4:30

H. 9:00

I. 8:00

J. 12:30

K. 11:00

L. 5:00

M. 2:00

N. 7:30

O. 4:00

P. 10:30

Answers

1. **A**

2. **C**

3. **G**

4. **P**

5. **E**

6. **B**

7. **J**

8. **D**

9. **N**

10. **H**

11. **F**

12. **L**

13. **I**

14. **M**

15. **O**

16. **K**