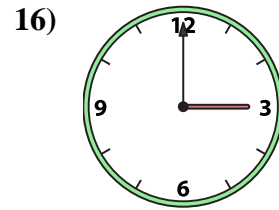
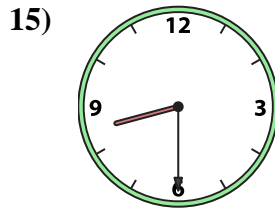
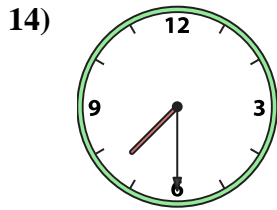
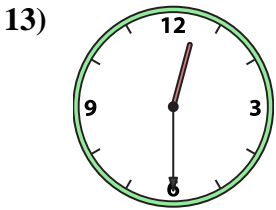
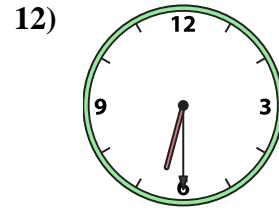
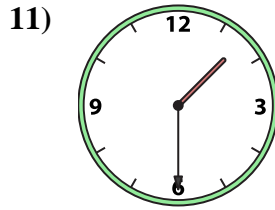
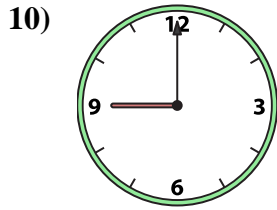
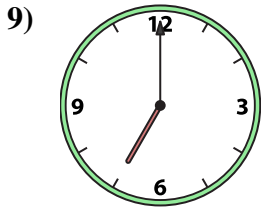
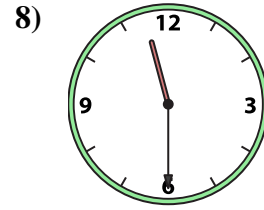
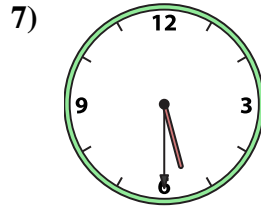
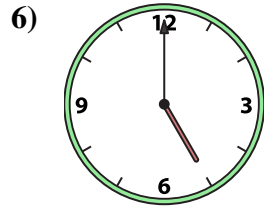
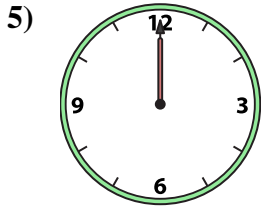
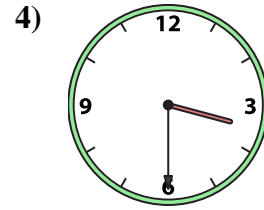
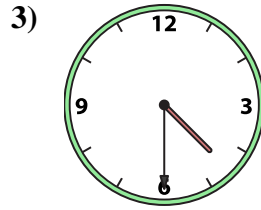
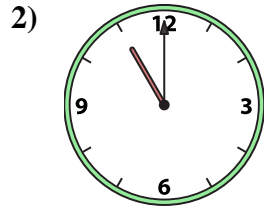
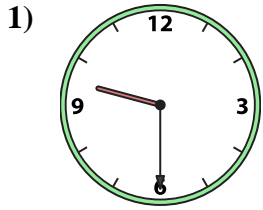




Match the analog clock to the digital clock.



A. 5:30

B. 3:00

C. 3:30

D. 12:00

E. 6:30

F. 7:30

G. 9:30

H. 4:30

I. 8:30

J. 5:00

K. 9:00

L. 11:00

M. 7:00

N. 1:30

O. 12:30

P. 11:30

Answers

1. _____

2. _____

3. _____

4. _____

5. _____

6. _____

7. _____

8. _____

9. _____

10. _____

11. _____

12. _____

13. _____

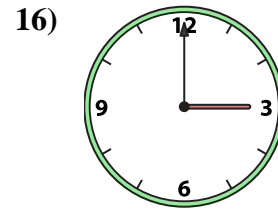
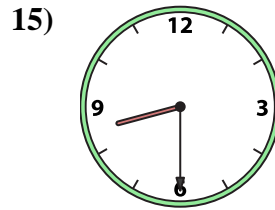
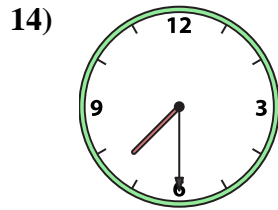
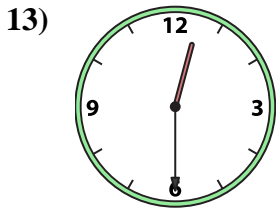
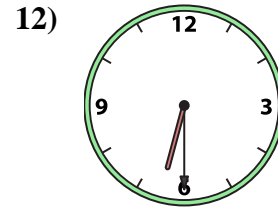
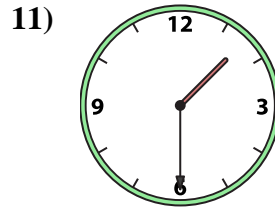
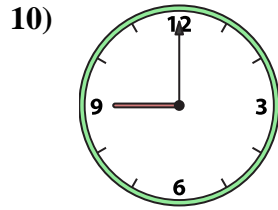
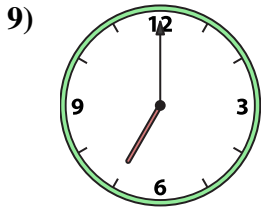
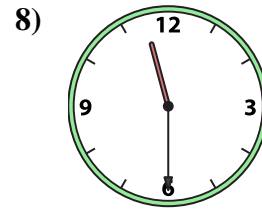
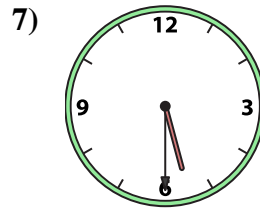
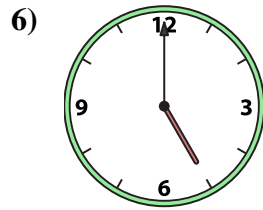
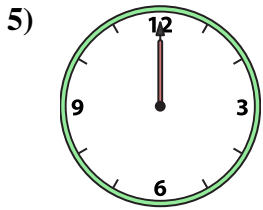
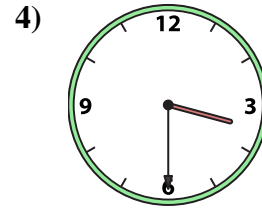
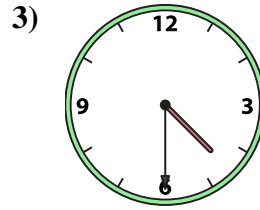
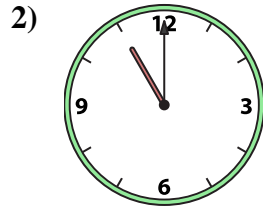
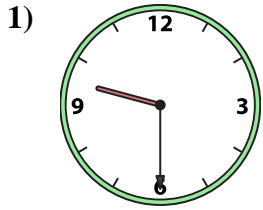
14. _____

15. _____

16. _____



Match the analog clock to the digital clock.



A. **5:30**

B. **3:00**

C. **3:30**

D. **12:00**

E. **6:30**

F. **7:30**

G. **9:30**

H. **4:30**

I. **8:30**

J. **5:00**

K. **9:00**

L. **11:00**

M. **7:00**

N. **1:30**

O. **12:30**

P. **11:30**

Answers

1. **G**

2. **L**

3. **H**

4. **C**

5. **D**

6. **J**

7. **A**

8. **P**

9. **M**

10. **K**

11. **N**

12. **E**

13. **O**

14. **F**

15. **I**

16. **B**