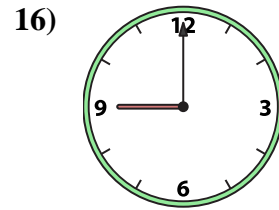
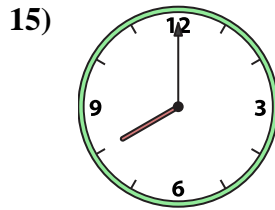
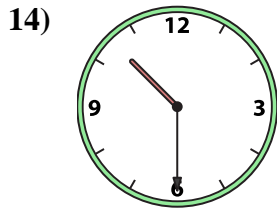
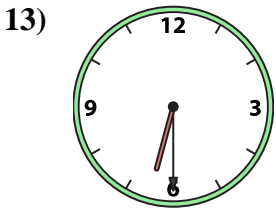
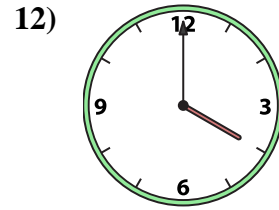
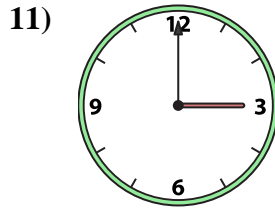
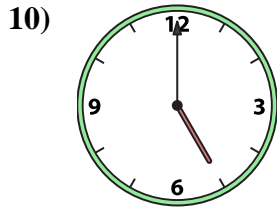
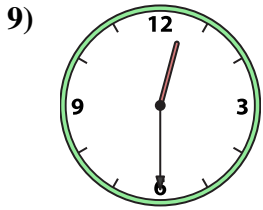
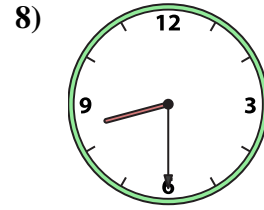
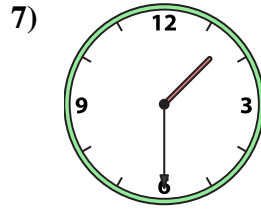
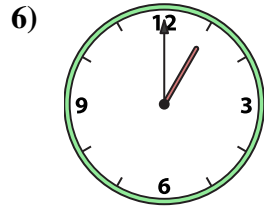
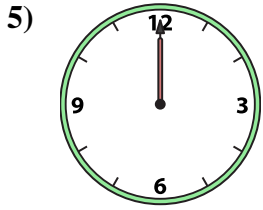
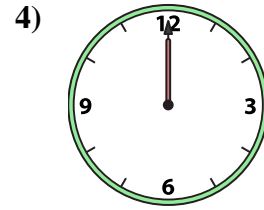
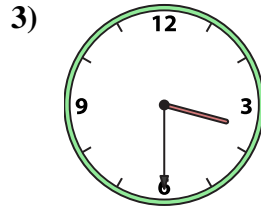
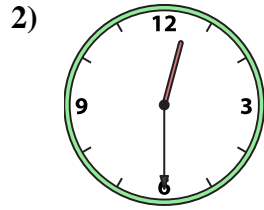





Match the analog clock to the digital clock.



A. 3:30

B. 9:00

C. 12:00

D. 12:00

E. 10:30

F. 12:30

G. 8:00

H. 11:00

I. 5:00

J. 1:30

K. 12:30

L. 4:00

M. 3:00

N. 6:30

O. 8:30

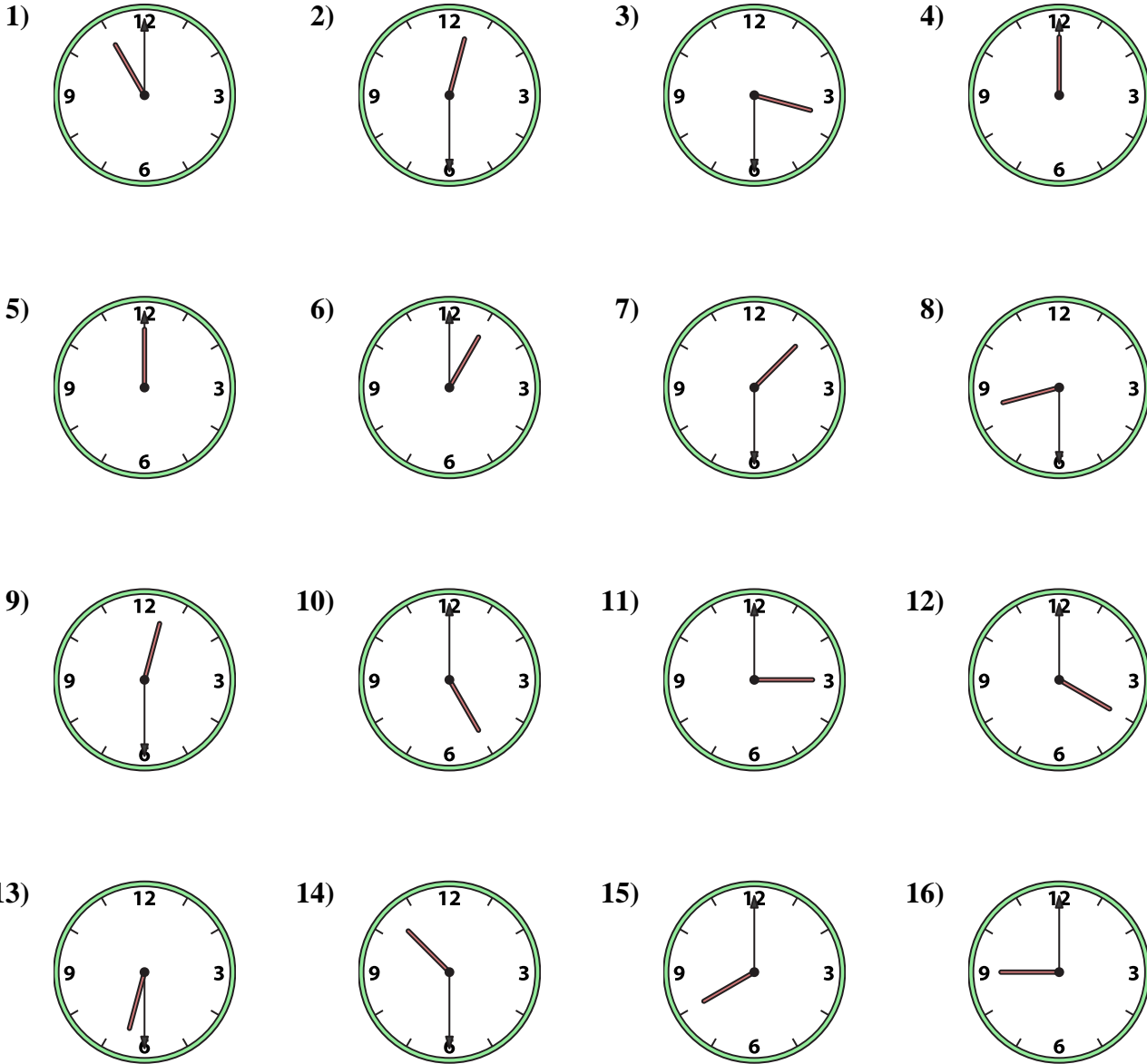
P. 1:00

Answers

1. _____
2. _____
3. _____
4. _____
5. _____
6. _____
7. _____
8. _____
9. _____
10. _____
11. _____
12. _____
13. _____
14. _____
15. _____
16. _____



Match the analog clock to the digital clock.



- A.
- B.
- C.
- D.
- E.
- F.
- G.
- H.
- I.
- J.
- K.
- L.
- M.
- N.
- O.
- P.

Answers

- 1. **H**
- 2. **F**
- 3. **A**
- 4. **C**
- 5. **D**
- 6. **P**
- 7. **J**
- 8. **O**
- 9. **K**
- 10. **I**
- 11. **M**
- 12. **L**
- 13. **N**
- 14. **E**
- 15. **G**
- 16. **B**