



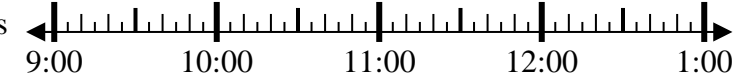
Solve each problem.

Answers

1) Start: \_\_\_\_\_

Elapsed: 2 hrs & 30 mins

End: 12:05

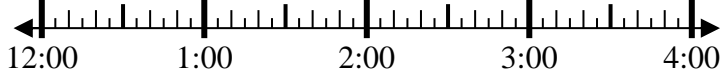


1. \_\_\_\_\_

2) Start: \_\_\_\_\_

Elapsed: 1 hr & 45 mins

End: 2:35

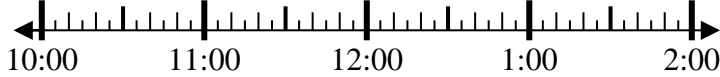


2. \_\_\_\_\_

3) Start: \_\_\_\_\_

Elapsed: 1 hr & 25 mins

End: 11:40

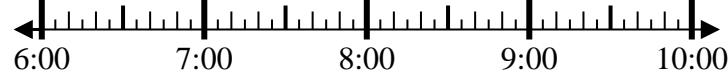


3. \_\_\_\_\_

4) Start: \_\_\_\_\_

Elapsed: 1 hr & 45 mins

End: 8:10

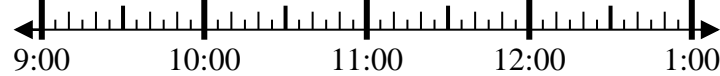


4. \_\_\_\_\_

5) Start: \_\_\_\_\_

Elapsed: 1 hr & 15 mins

End: 10:25

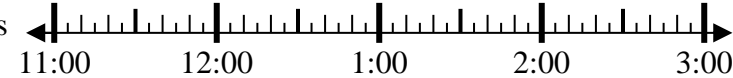


5. \_\_\_\_\_

6) Start: \_\_\_\_\_

Elapsed: 2 hrs & 15 mins

End: 2:00

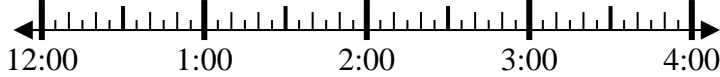


6. \_\_\_\_\_

7) Start: \_\_\_\_\_

Elapsed: 1 hr & 40 mins

End: 2:00

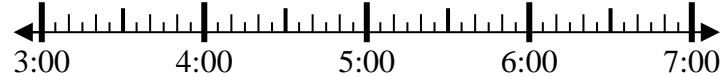


7. \_\_\_\_\_

8) Start: \_\_\_\_\_

Elapsed: 1 hr & 40 mins

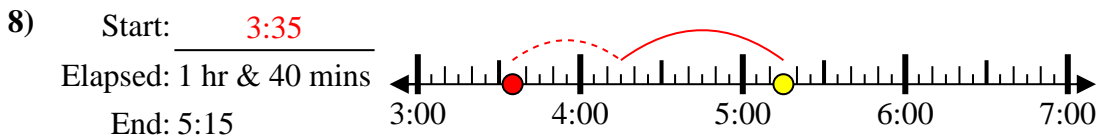
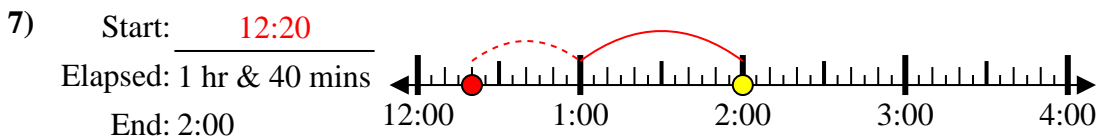
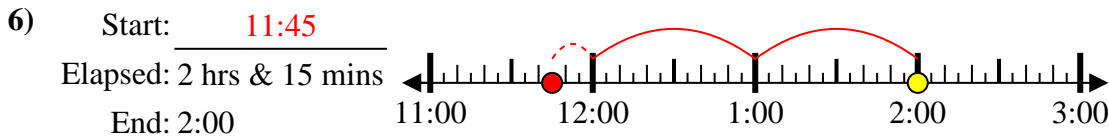
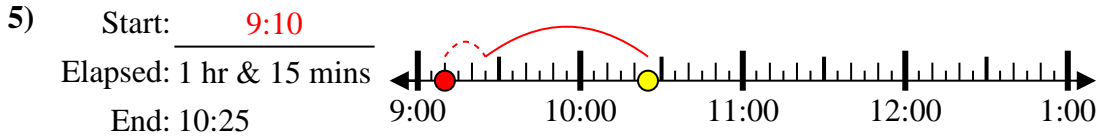
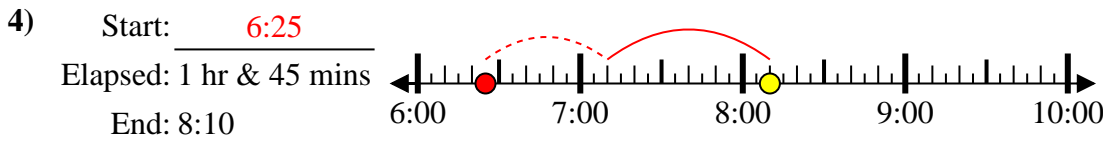
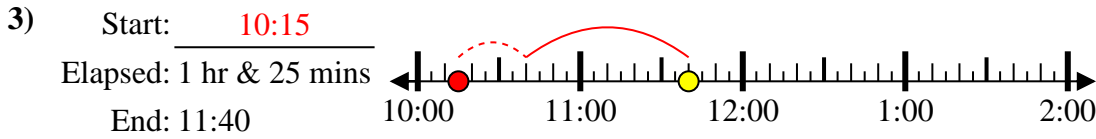
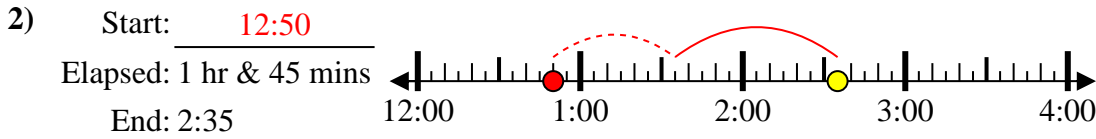
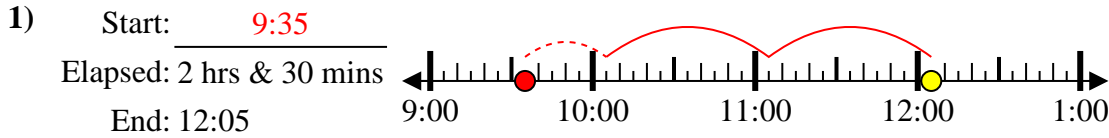
End: 5:15



8. \_\_\_\_\_



Solve each problem.



Answers

1. 9:35

2. 12:50

3. 10:15

4. 6:25

5. 9:10

6. 11:45

7. 12:20

8. 3:35