



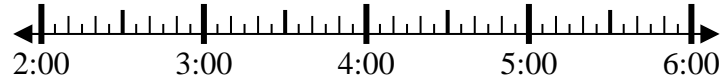
Solve each problem.

Answers

1) Start: 2:00

Elapsed: 1 hr & 45 mins

End: \_\_\_\_\_

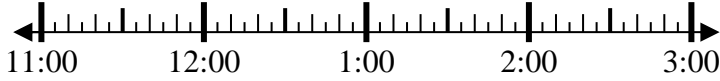


1. \_\_\_\_\_

2) Start: 11:35

Elapsed: 2 hrs & 45 mins

End: \_\_\_\_\_

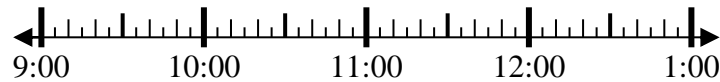


2. \_\_\_\_\_

3) Start: 9:00

Elapsed: 1 hr & 10 mins

End: \_\_\_\_\_

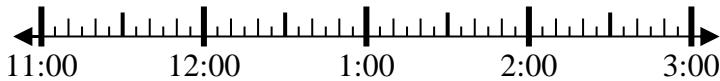


3. \_\_\_\_\_

4) Start: 11:45

Elapsed: 1 hr & 20 mins

End: \_\_\_\_\_



4. \_\_\_\_\_

5) Start: 12:20

Elapsed: 1 hr & 15 mins

End: \_\_\_\_\_

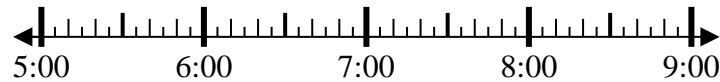


5. \_\_\_\_\_

6) Start: 5:25

Elapsed: 1 hr & 10 mins

End: \_\_\_\_\_

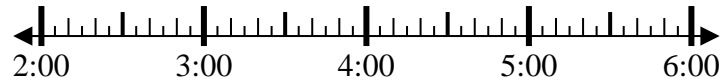


6. \_\_\_\_\_

7) Start: 2:35

Elapsed: 1 hr & 45 mins

End: \_\_\_\_\_

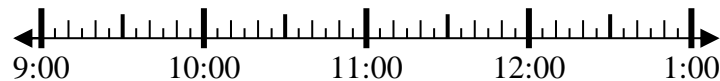


7. \_\_\_\_\_

8) Start: 9:35

Elapsed: 2 hrs & 45 mins

End: \_\_\_\_\_



8. \_\_\_\_\_



Solve each problem.

1) Start: 2:00

Elapsed: 1 hr & 45 mins

End: 3:45



2) Start: 11:35

Elapsed: 2 hrs & 45 mins

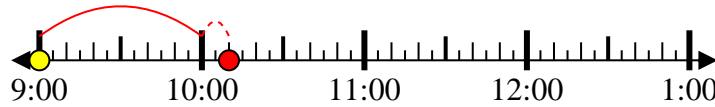
End: 2:20



3) Start: 9:00

Elapsed: 1 hr & 10 mins

End: 10:10



4) Start: 11:45

Elapsed: 1 hr & 20 mins

End: 1:05



5) Start: 12:20

Elapsed: 1 hr & 15 mins

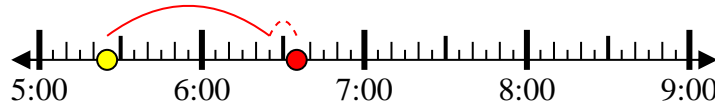
End: 1:35



6) Start: 5:25

Elapsed: 1 hr & 10 mins

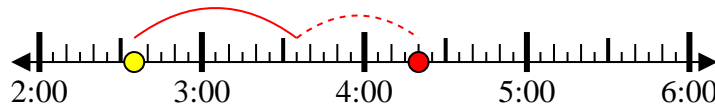
End: 6:35



7) Start: 2:35

Elapsed: 1 hr & 45 mins

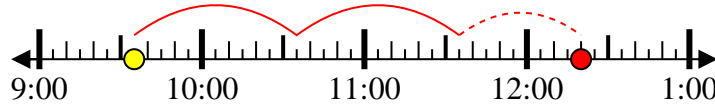
End: 4:20



8) Start: 9:35

Elapsed: 2 hrs & 45 mins

End: 12:20



Answers

1. 3:45

2. 2:20

3. 10:10

4. 1:05

5. 1:35

6. 6:35

7. 4:20

8. 12:20