



Draw the hour and minute hand on the clock so it represents the time shown.

1) 4:35



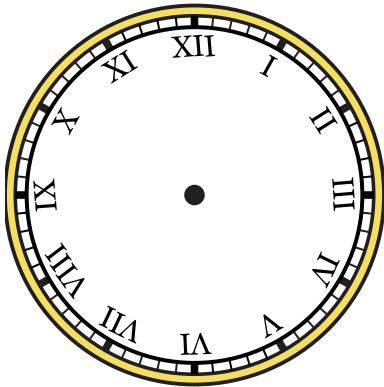
2) 7:25



3) 12:55



4) 6:35



5) 7:45



6) 12:15



7) 10:35



8) 11:45




9) 1:25






Draw the hour and minute hand on the clock so it represents the time shown.


1) 4:35




2) 7:25




3) 12:55




4) 6:35



5) 7:45




6) 12:15



7) 10:35



8) 11:45



9) 1:25

