

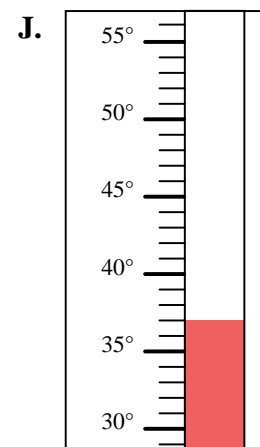
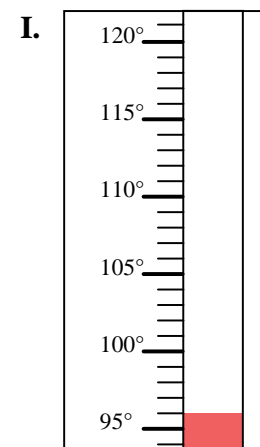
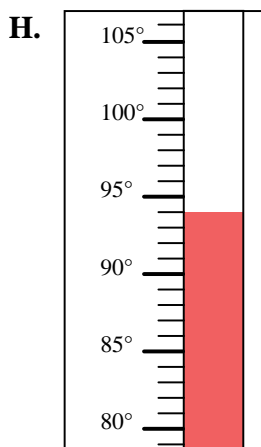
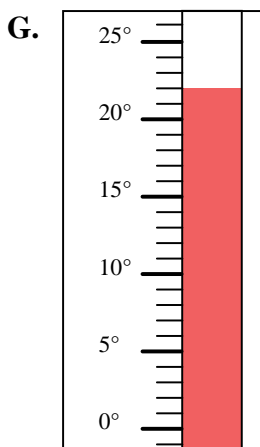
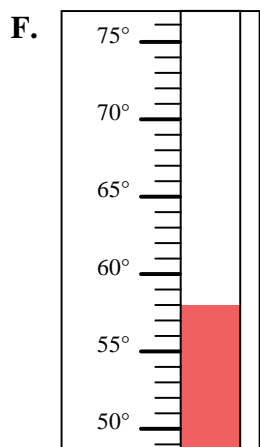
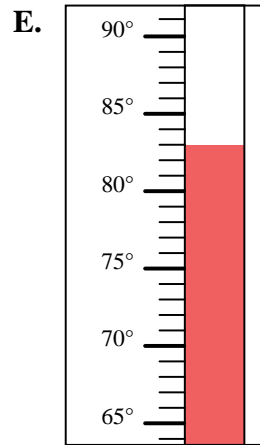
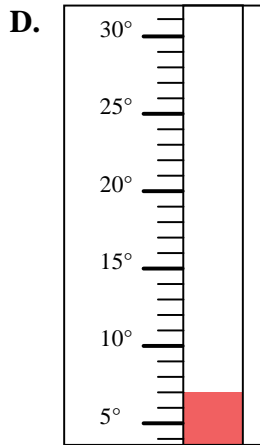
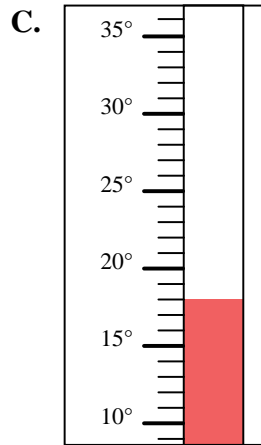
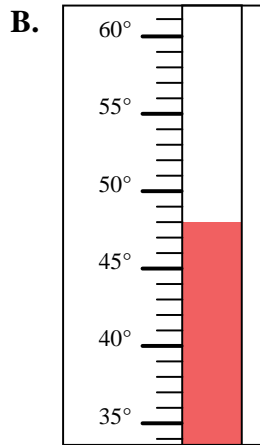
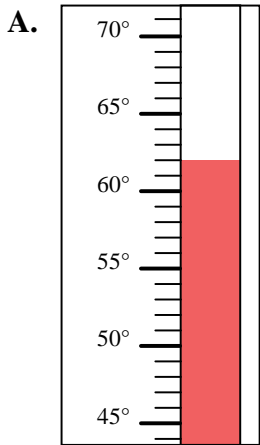


Determine which letter best answers each question.

**Answers**

- 1) Which thermometer best represents the temperature 58°?
- 2) Which thermometer best represents the temperature 96°?
- 3) Which thermometer best represents the temperature 48°?
- 4) Which thermometer best represents the temperature 83°?
- 5) Which thermometer best represents the temperature 22°?
- 6) Which thermometer best represents the temperature 37°?
- 7) Which thermometer best represents the temperature 7°?
- 8) Which thermometer best represents the temperature 62°?
- 9) Which thermometer best represents the temperature 18°?
- 10) Which thermometer best represents the temperature 94°?

1. \_\_\_\_\_
2. \_\_\_\_\_
3. \_\_\_\_\_
4. \_\_\_\_\_
5. \_\_\_\_\_
6. \_\_\_\_\_
7. \_\_\_\_\_
8. \_\_\_\_\_
9. \_\_\_\_\_
10. \_\_\_\_\_





Determine which letter best answers each question.

**Answers**

- 1) Which thermometer best represents the temperature 58°?
- 2) Which thermometer best represents the temperature 96°?
- 3) Which thermometer best represents the temperature 48°?
- 4) Which thermometer best represents the temperature 83°?
- 5) Which thermometer best represents the temperature 22°?
- 6) Which thermometer best represents the temperature 37°?
- 7) Which thermometer best represents the temperature 7°?
- 8) Which thermometer best represents the temperature 62°?
- 9) Which thermometer best represents the temperature 18°?
- 10) Which thermometer best represents the temperature 94°?

1. **F**
2. **I**
3. **B**
4. **E**
5. **G**
6. **J**
7. **D**
8. **A**
9. **C**
10. **H**

