



Express each number using tally marks.

1) 43 \_\_\_\_\_

2) 23 \_\_\_\_\_

3) 71 \_\_\_\_\_

4) 19 \_\_\_\_\_

5) 47 \_\_\_\_\_

6) 7 \_\_\_\_\_

7) 69 \_\_\_\_\_

8) 74 \_\_\_\_\_

9) 64 \_\_\_\_\_

10) 78 \_\_\_\_\_

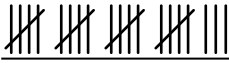
11) 32 \_\_\_\_\_

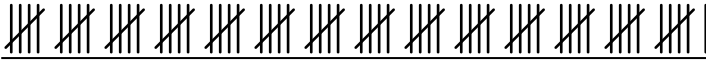
12) 65 \_\_\_\_\_



Express each number using tally marks.

1) 43 

2) 23 

3) 71 

4) 19 


5) 47 

6) 7 

7) 69 

8) 74 

9) 64 

10) 78 

11) 32 

12) 65 