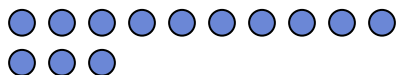




Use the visual model to solve each problem.

Answers

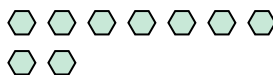
1) There are 13 circles below.



If you were to take away 1, how many would be left?

$13 - 1 = ?$

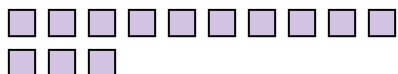
2) There are 9 hexagons below.



If you were to take away 6, how many would be left?

$9 - 6 = ?$

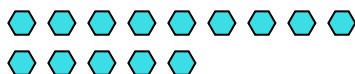
3) There are 13 squares below.



If you were to take away 11, how many would be left?

$13 - 11 = ?$

4) There are 14 hexagons below.



If you were to take away 7, how many would be left?

$14 - 7 = ?$

5) There are 10 rectangles below.



If you were to take away 4, how many would be left?

$10 - 4 = ?$

6) There are 5 rectangles below.



If you were to take away 1, how many would be left?

$5 - 1 = ?$

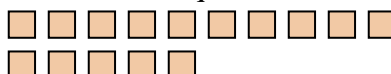
7) There are 17 pentagons below.



If you were to take away 2, how many would be left?

$17 - 2 = ?$

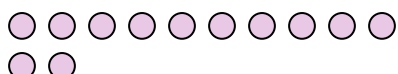
8) There are 15 squares below.



If you were to take away 12, how many would be left?

$15 - 12 = ?$

9) There are 12 circles below.



If you were to take away 3, how many would be left?

$12 - 3 = ?$

10) There are 5 rectangles below.



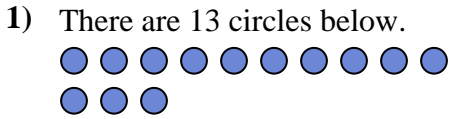
If you were to take away 4, how many would be left?

$5 - 4 = ?$

1. _____
2. _____
3. _____
4. _____
5. _____
6. _____
7. _____
8. _____
9. _____
10. _____

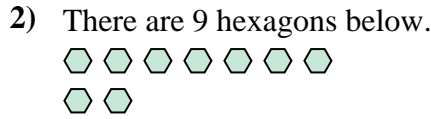


Use the visual model to solve each problem.



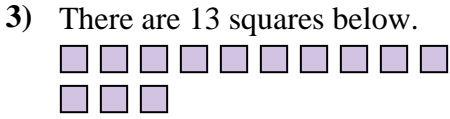
If you were to take away 1, how many would be left?

$13 - 1 = ?$




If you were to take away 6, how many would be left?

$9 - 6 = ?$



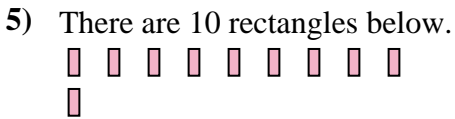
If you were to take away 11, how many would be left?

$13 - 11 = ?$



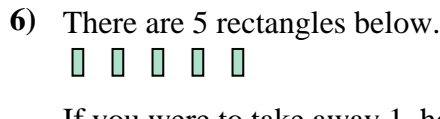
If you were to take away 7, how many would be left?

$14 - 7 = ?$



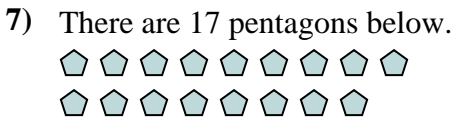
If you were to take away 4, how many would be left?

$10 - 4 = ?$



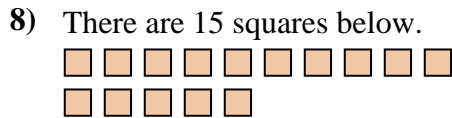
If you were to take away 1, how many would be left?

$5 - 1 = ?$



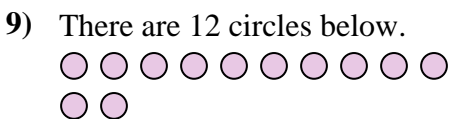
If you were to take away 2, how many would be left?

$17 - 2 = ?$



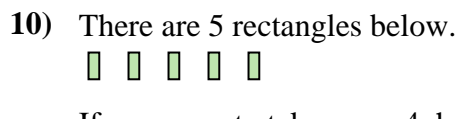
If you were to take away 12, how many would be left?

$15 - 12 = ?$



If you were to take away 3, how many would be left?

$12 - 3 = ?$



If you were to take away 4, how many would be left?

$5 - 4 = ?$

Answers

1. 12

2. 3

3. 2

4. 7

5. 6

6. 4

7. 15

8. 3

9. 9

10. 1