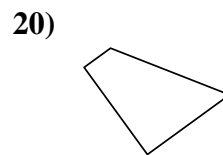
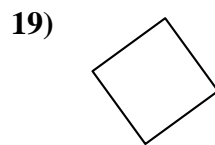
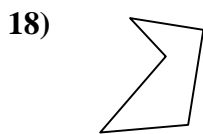
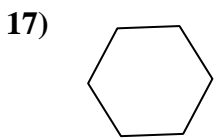
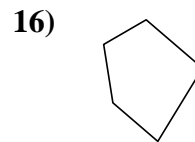
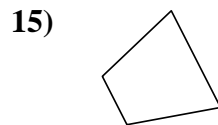

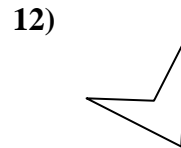
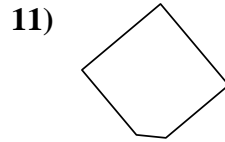
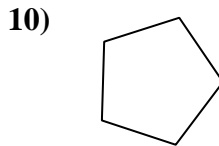
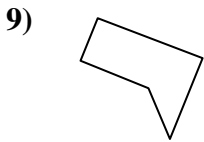
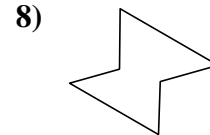
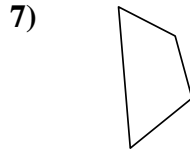
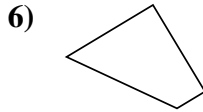
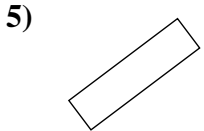
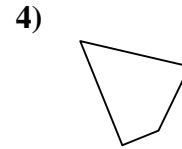
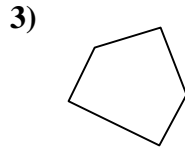
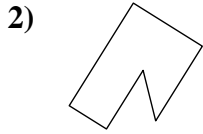
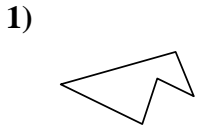




Determine if the shape shown is a quadrilateral (yes) or not (no).

Answers

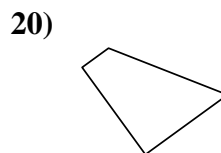
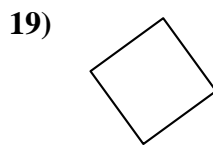
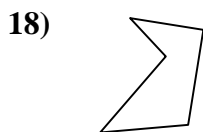
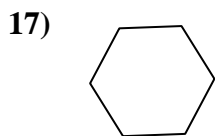
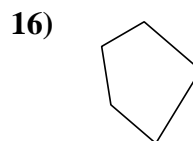
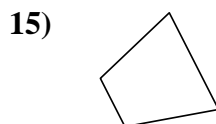
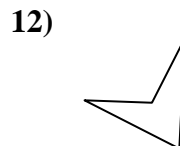
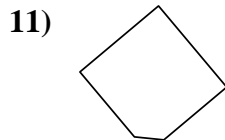
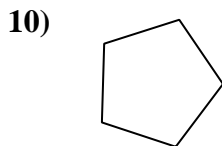
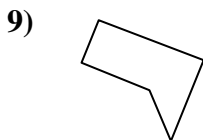
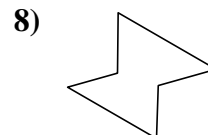
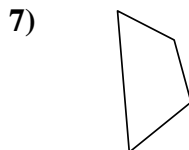
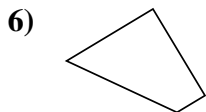
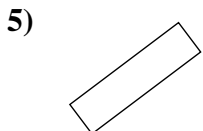
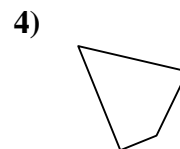
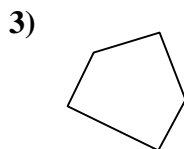
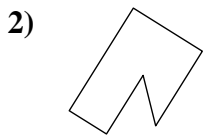
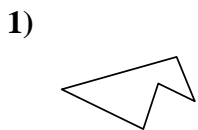


- 1. _____
- 2. _____
- 3. _____
- 4. _____
- 5. _____
- 6. _____
- 7. _____
- 8. _____
- 9. _____
- 10. _____
- 11. _____
- 12. _____
- 13. _____
- 14. _____
- 15. _____
- 16. _____
- 17. _____
- 18. _____
- 19. _____
- 20. _____



Determine if the shape shown is a quadrilateral (yes) or not (no).

Answers



1. no

2. no

3. no

4. yes

5. yes

6. yes

7. yes

8. no

9. no

10. no

11. no

12. yes

13. yes

14. yes

15. yes

16. no

17. no

18. no

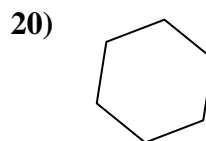
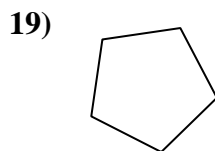
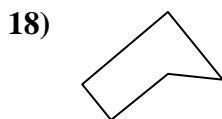
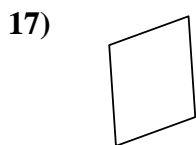
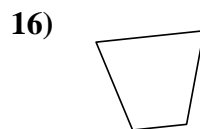
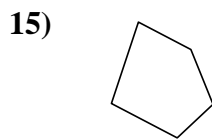
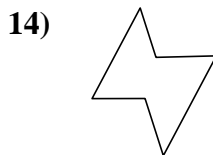
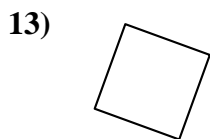
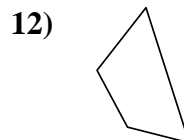
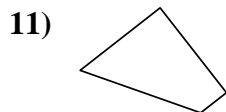
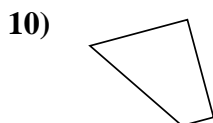
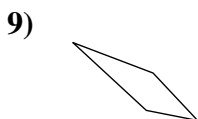
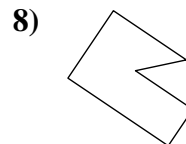
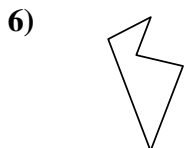
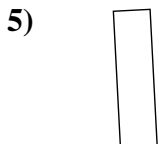
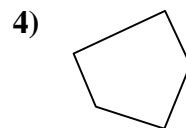
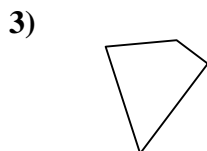
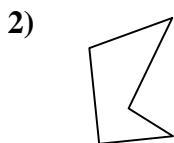
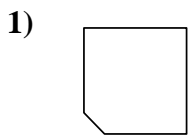
19. yes

20. yes



Determine if the shape shown is a quadrilateral (yes) or not (no).

Answers

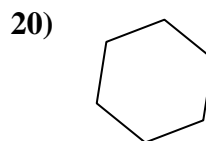
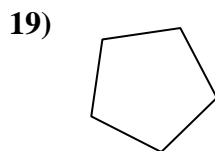
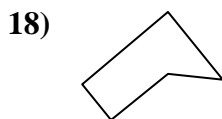
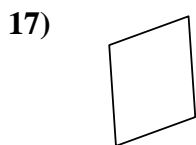
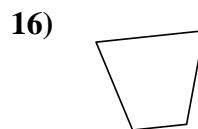
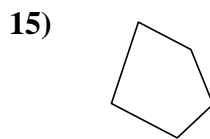
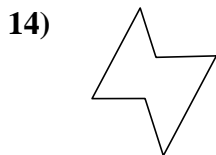
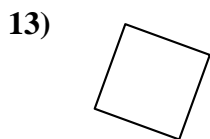
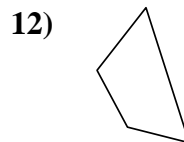
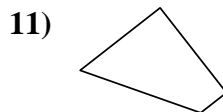
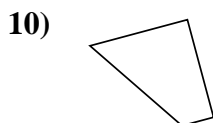
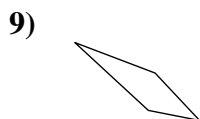
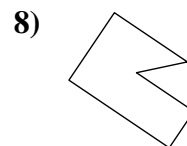
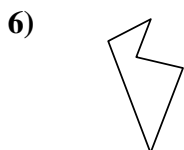
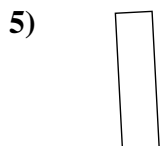
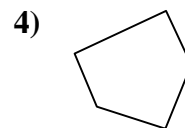
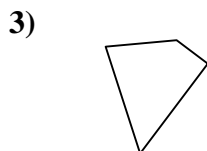
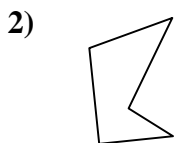
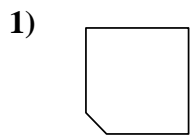


- 1. _____
- 2. _____
- 3. _____
- 4. _____
- 5. _____
- 6. _____
- 7. _____
- 8. _____
- 9. _____
- 10. _____
- 11. _____
- 12. _____
- 13. _____
- 14. _____
- 15. _____
- 16. _____
- 17. _____
- 18. _____
- 19. _____
- 20. _____



Determine if the shape shown is a quadrilateral (yes) or not (no).

Answers



1. no

2. no

3. yes

4. no

5. yes

6. no

7. yes

8. no

9. yes

10. yes

11. yes

12. yes

13. yes

14. no

15. no

16. yes

17. yes

18. no

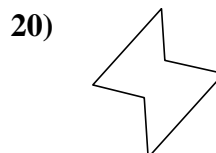
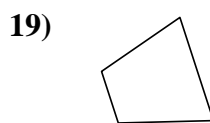
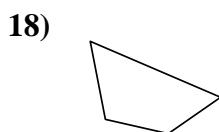
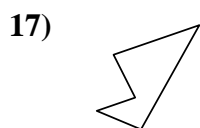
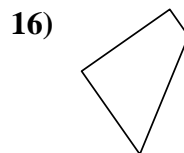
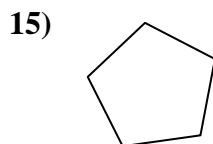
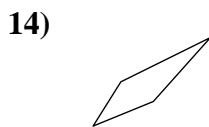
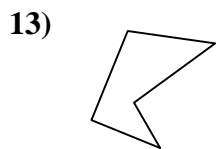
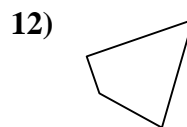
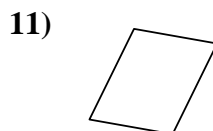
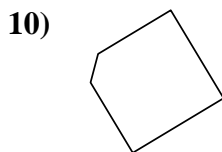
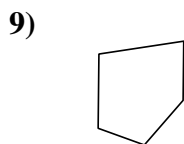
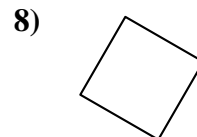
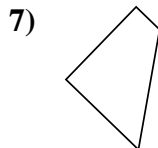
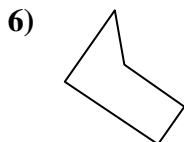
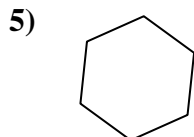

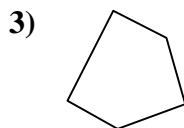
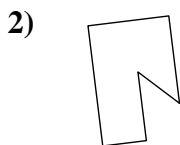
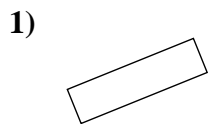
19. no

20. no



Determine if the shape shown is a quadrilateral (yes) or not (no).

Answers



1. _____

2. _____

3. _____

4. _____

5. _____

6. _____

7. _____

8. _____

9. _____

10. _____

11. _____

12. _____

13. _____

14. _____

15. _____

16. _____

17. _____

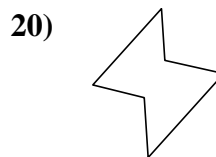
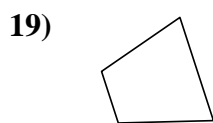
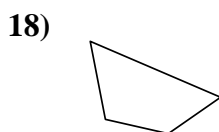
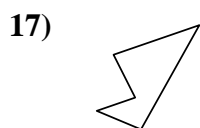
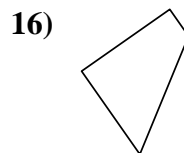
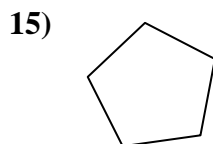
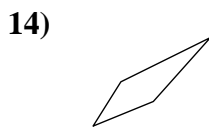
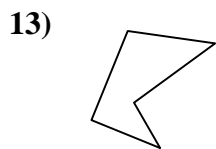
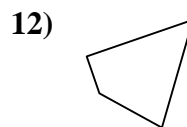
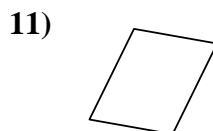
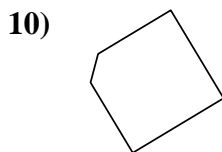
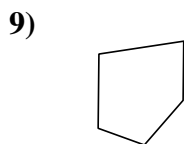
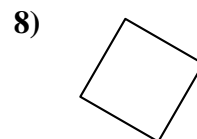
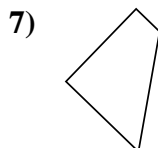
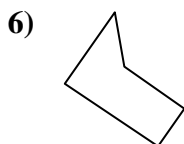
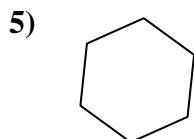
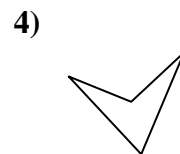
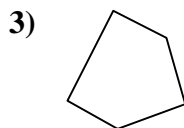
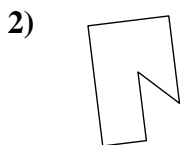
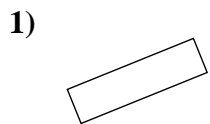
18. _____

19. _____

20. _____



Determine if the shape shown is a quadrilateral (yes) or not (no).



Answers

1. yes

2. no

3. no

4. yes

5. no

6. no

7. yes

8. yes

9. no

10. no

11. yes

12. yes

13. no

14. yes

15. no

16. yes

17. no

18. yes

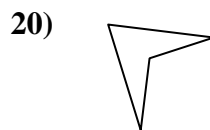
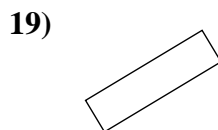
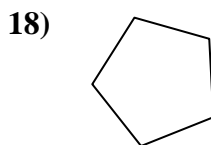
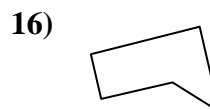
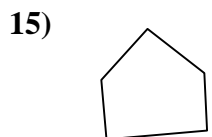
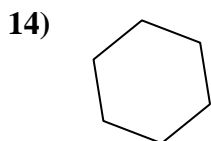
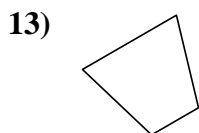
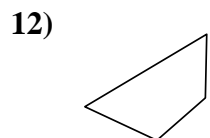
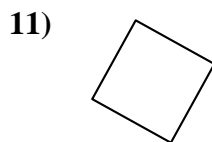
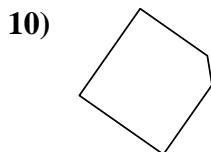

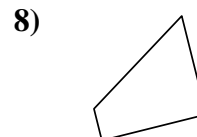
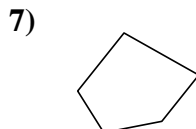
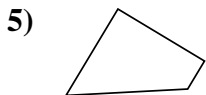
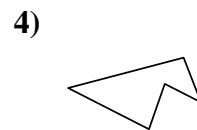
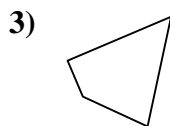
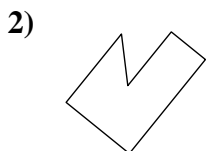
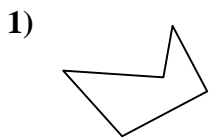
19. yes

20. no



Determine if the shape shown is a quadrilateral (yes) or not (no).

Answers

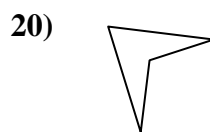
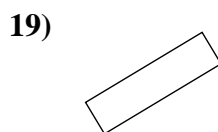
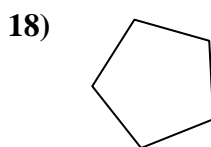
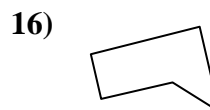
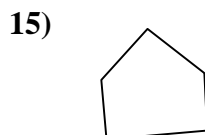
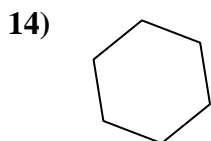
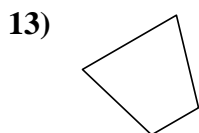
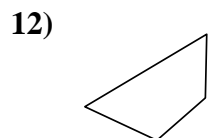
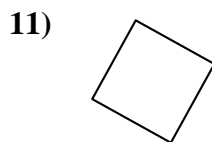
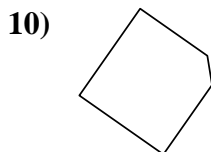
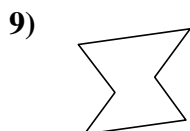
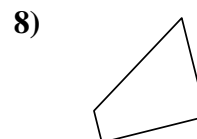
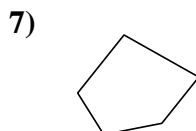
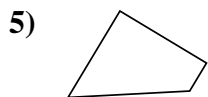
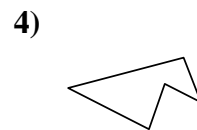
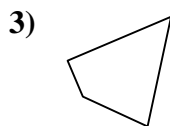
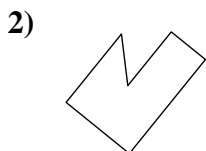
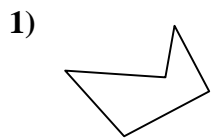


1. _____
2. _____
3. _____
4. _____
5. _____
6. _____
7. _____
8. _____
9. _____
10. _____
11. _____
12. _____
13. _____
14. _____
15. _____
16. _____
17. _____
18. _____
19. _____
20. _____



Determine if the shape shown is a quadrilateral (yes) or not (no).

Answers



1. no

2. no

3. yes

4. no

5. yes

6. yes

7. no

8. yes

9. no

10. no

11. yes

12. yes

13. yes

14. no

15. no

16. no

17. yes

18. no

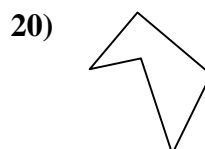
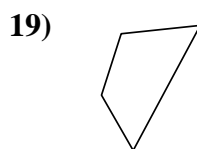
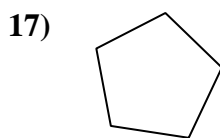
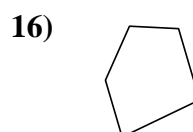
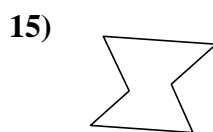
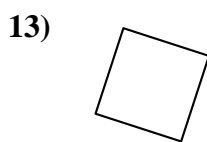
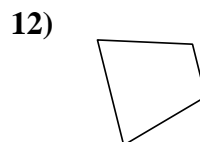
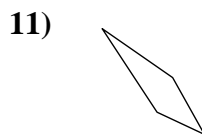
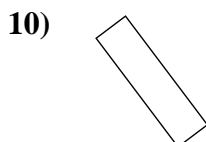
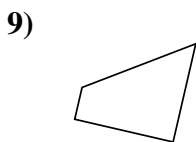
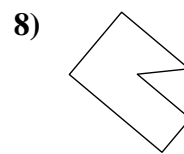
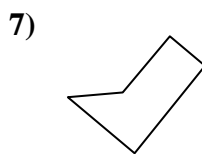
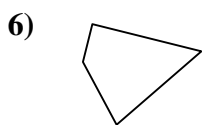
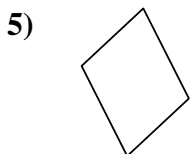
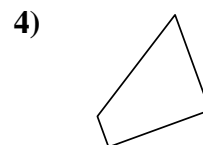
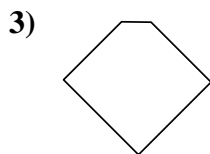
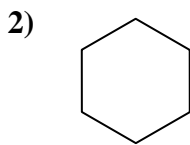
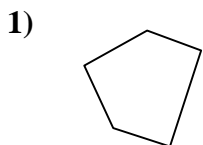
19. yes

20. yes



Determine if the shape shown is a quadrilateral (yes) or not (no).

Answers

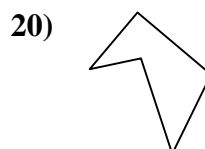
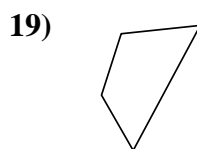
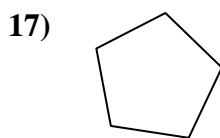
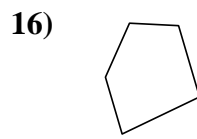
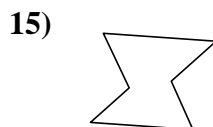
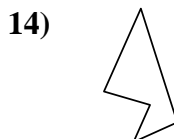
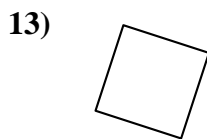
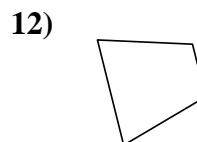
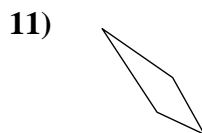
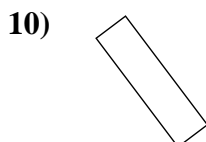
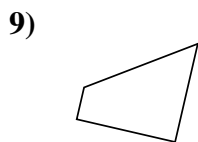
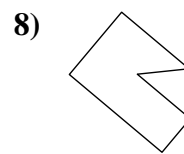
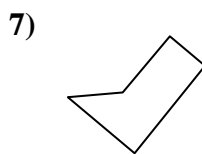
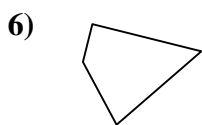
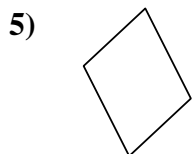
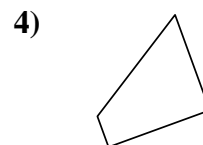
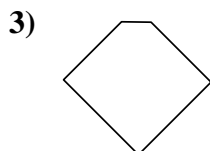
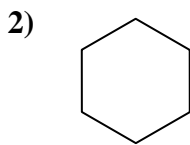
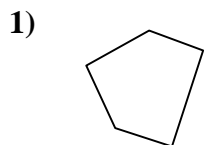


1. _____
2. _____
3. _____
4. _____
5. _____
6. _____
7. _____
8. _____
9. _____
10. _____
11. _____
12. _____
13. _____
14. _____
15. _____
16. _____
17. _____
18. _____
19. _____
20. _____



Determine if the shape shown is a quadrilateral (yes) or not (no).

Answers



1. no

2. no

3. no

4. yes

5. yes

6. yes

7. no

8. no

9. yes

10. yes

11. yes

12. yes

13. yes

14. no

15. no

16. no

17. no

18. yes

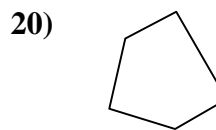
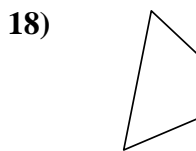
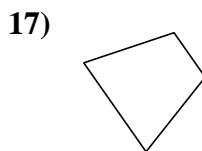
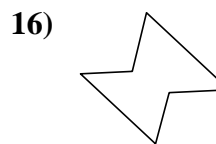
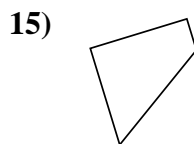
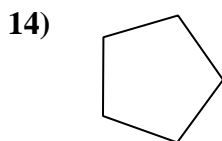

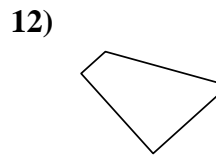
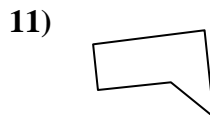
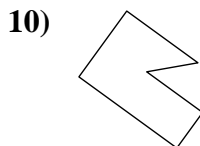
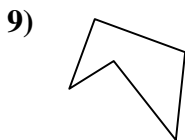
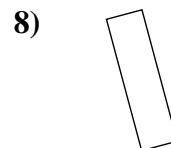
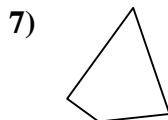
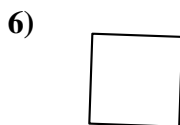
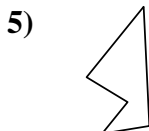
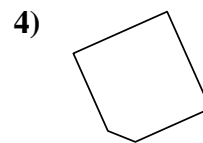
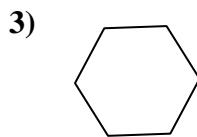
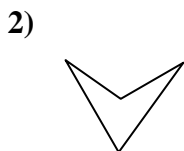
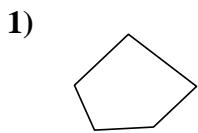
19. yes

20. no



Determine if the shape shown is a quadrilateral (yes) or not (no).

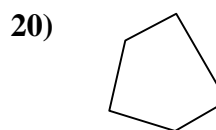
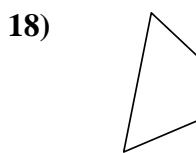
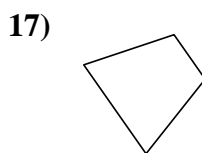
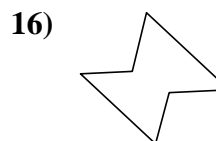
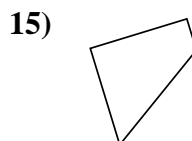
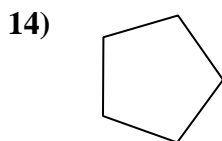
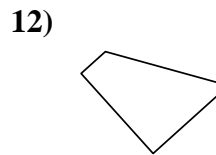
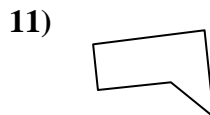
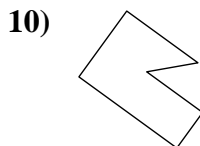
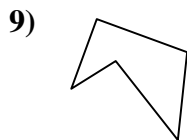
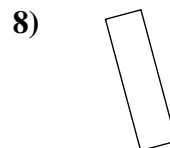
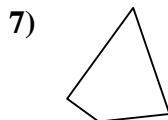
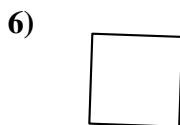
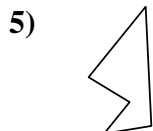
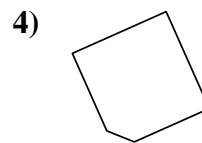
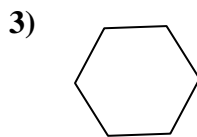
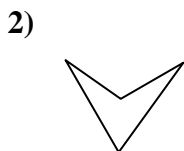
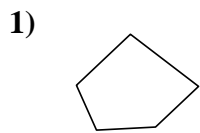
Answers



- 1. _____
- 2. _____
- 3. _____
- 4. _____
- 5. _____
- 6. _____
- 7. _____
- 8. _____
- 9. _____
- 10. _____
- 11. _____
- 12. _____
- 13. _____
- 14. _____
- 15. _____
- 16. _____
- 17. _____
- 18. _____
- 19. _____
- 20. _____



Determine if the shape shown is a quadrilateral (yes) or not (no).



Answers

1. no

2. yes

3. no

4. no

5. no

6. yes

7. yes

8. yes

9. no

10. no

11. no

12. yes

13. yes

14. no

15. yes

16. no

17. yes

18. yes

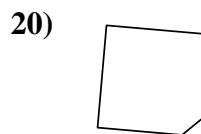
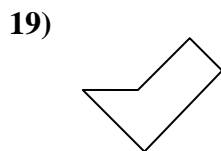
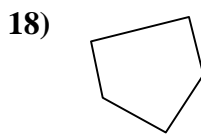
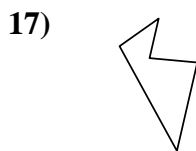
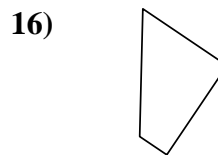
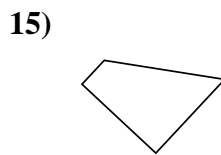
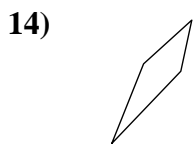
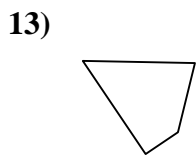
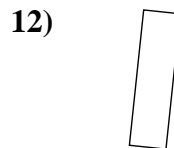
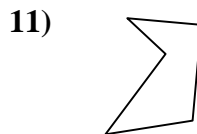
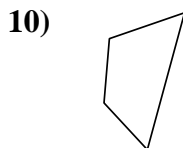
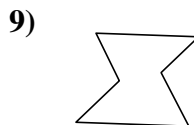
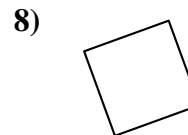
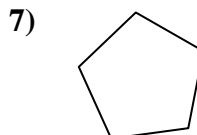
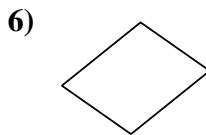
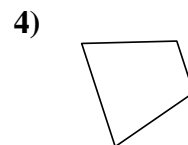
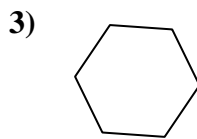
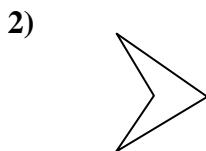
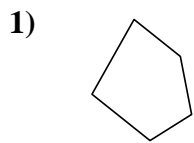
19. yes

20. no



Determine if the shape shown is a quadrilateral (yes) or not (no).

Answers

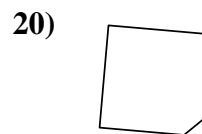
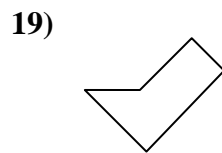
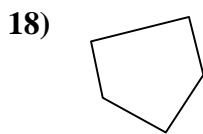
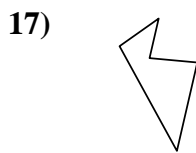
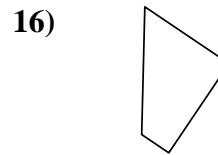
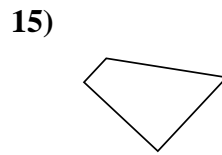
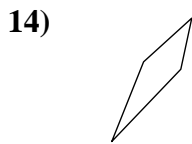
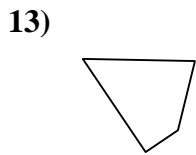
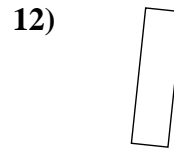
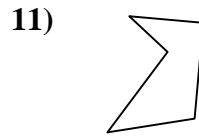
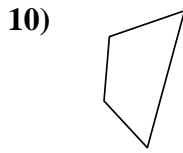
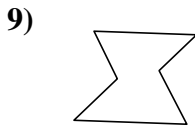
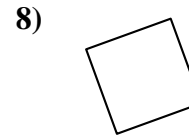
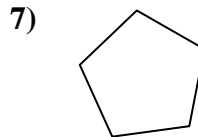
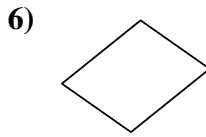
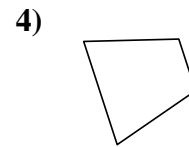
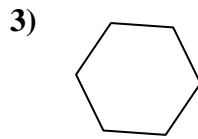
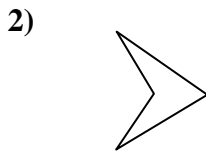
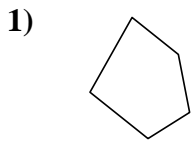


- 1. _____
- 2. _____
- 3. _____
- 4. _____
- 5. _____
- 6. _____
- 7. _____
- 8. _____
- 9. _____
- 10. _____
- 11. _____
- 12. _____
- 13. _____
- 14. _____
- 15. _____
- 16. _____
- 17. _____
- 18. _____
- 19. _____
- 20. _____



Determine if the shape shown is a quadrilateral (yes) or not (no).

Answers



1. no

2. yes

3. no

4. yes

5. no

6. yes

7. no

8. yes

9. no

10. yes

11. no

12. yes

13. yes

14. yes

15. yes

16. yes

17. no

18. no

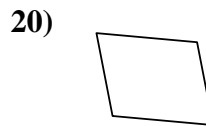
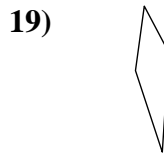
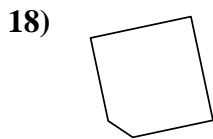
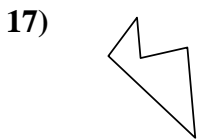
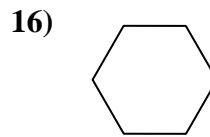
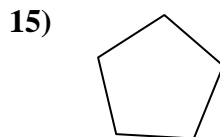
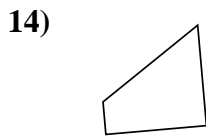
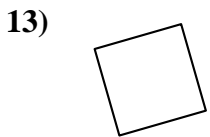
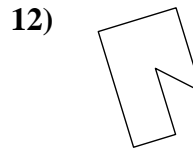
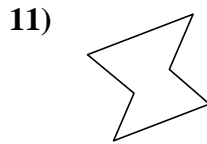
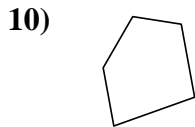
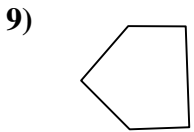
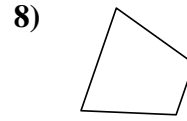
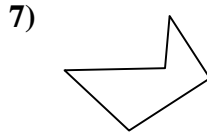
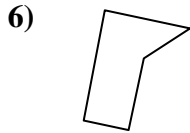

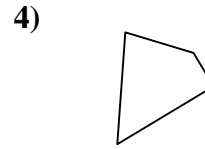
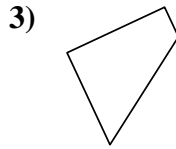
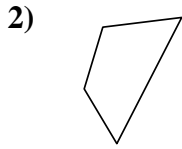

19. no

20. no



Determine if the shape shown is a quadrilateral (yes) or not (no).

Answers

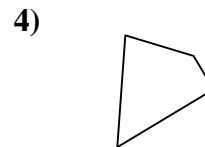
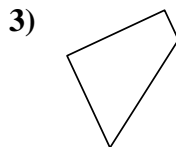
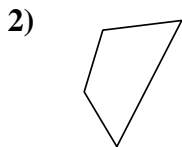
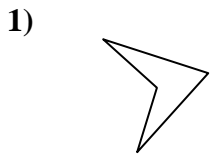


- 1. _____
- 2. _____
- 3. _____
- 4. _____
- 5. _____
- 6. _____
- 7. _____
- 8. _____
- 9. _____
- 10. _____
- 11. _____
- 12. _____
- 13. _____
- 14. _____
- 15. _____
- 16. _____
- 17. _____
- 18. _____
- 19. _____
- 20. _____



Determine if the shape shown is a quadrilateral (yes) or not (no).

Answers

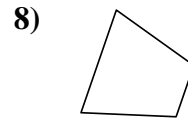
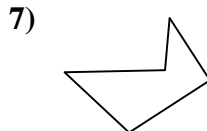
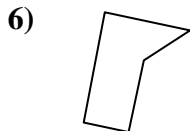



1. yes

2. yes

3. yes

4. yes

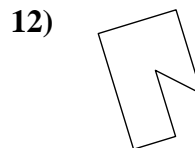
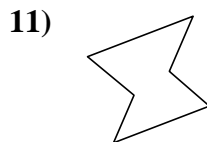
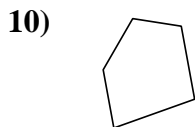
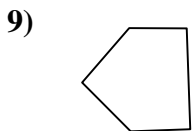


5. yes

6. no

7. no

8. yes

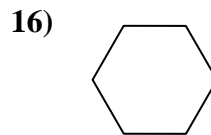
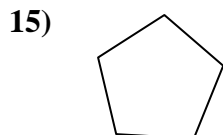
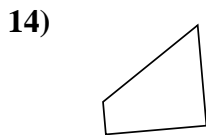
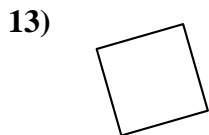


9. no

10. no

11. no

12. no

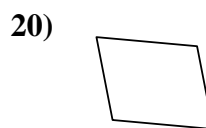
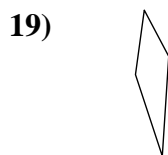
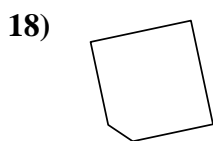
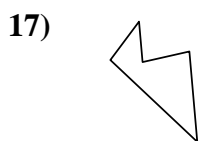


13. yes

14. yes

15. no

16. no



17. no

18. no

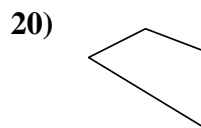
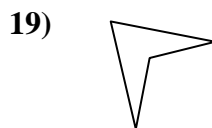
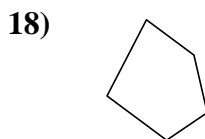
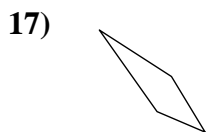
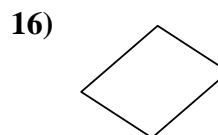
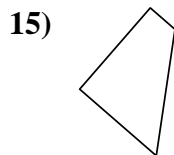
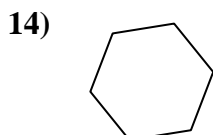
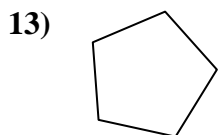
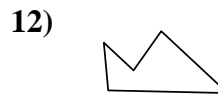
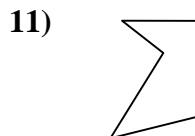
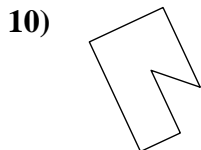
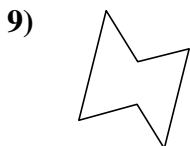
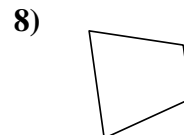
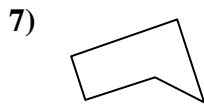
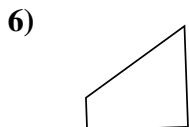
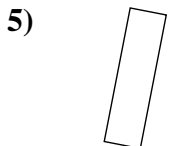
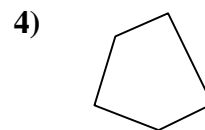
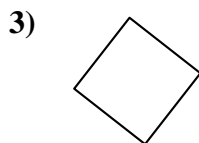
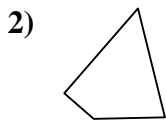
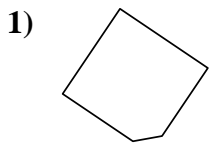
19. yes

20. yes



Determine if the shape shown is a quadrilateral (yes) or not (no).

Answers

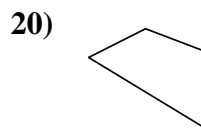
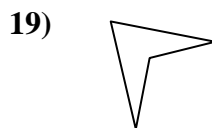
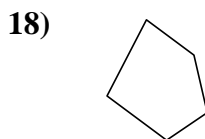
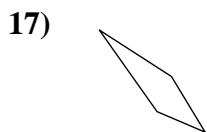
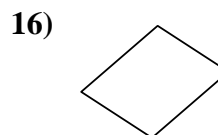
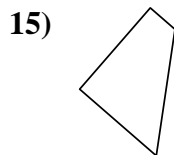
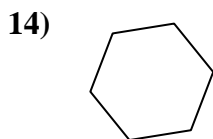
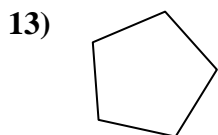
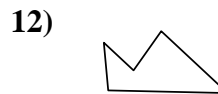
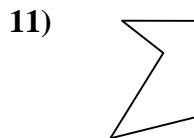
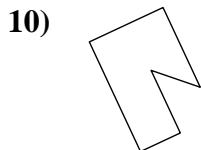
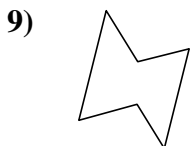
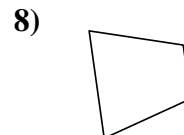
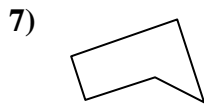
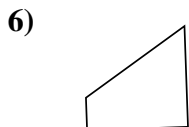
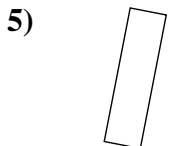
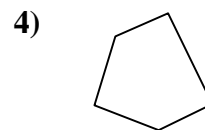
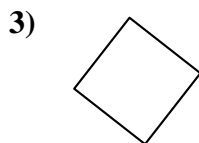
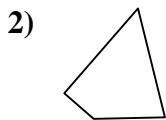
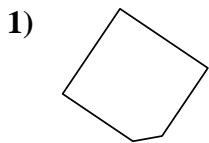


- 1. _____
- 2. _____
- 3. _____
- 4. _____
- 5. _____
- 6. _____
- 7. _____
- 8. _____
- 9. _____
- 10. _____
- 11. _____
- 12. _____
- 13. _____
- 14. _____
- 15. _____
- 16. _____
- 17. _____
- 18. _____
- 19. _____
- 20. _____



Determine if the shape shown is a quadrilateral (yes) or not (no).

Answers



1. no

2. yes

3. yes

4. no

5. yes

6. yes

7. no

8. yes

9. no

10. no

11. no

12. no

13. no

14. no

15. yes

16. yes

17. yes

18. no

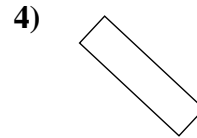
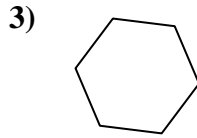
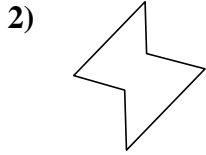
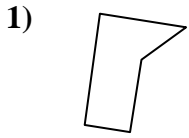
19. yes

20. yes



Determine if the shape shown is a quadrilateral (yes) or not (no).

Answers

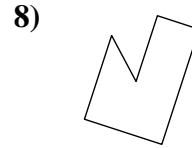
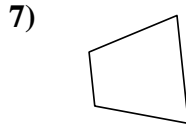
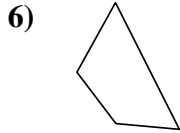
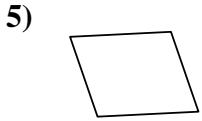


1. _____

2. _____

3. _____

4. _____


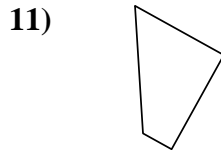
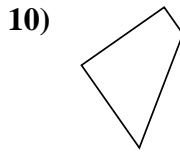


5. _____

6. _____

7. _____

8. _____

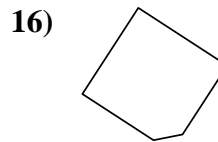
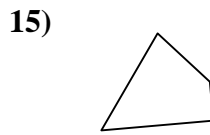
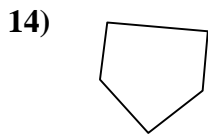
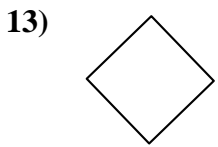


9. _____

10. _____

11. _____

12. _____

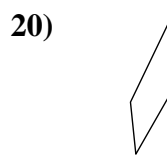
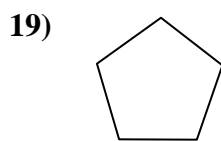
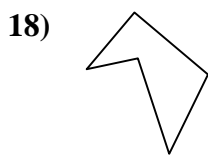
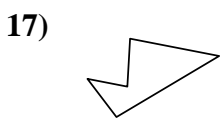


13. _____

14. _____

15. _____

16. _____



17. _____

18. _____

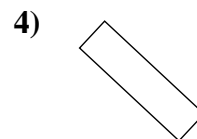
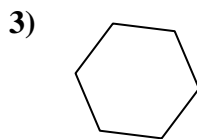
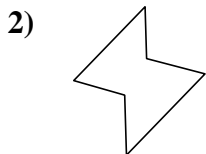
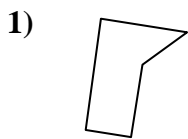
19. _____

20. _____



Determine if the shape shown is a quadrilateral (yes) or not (no).

Answers

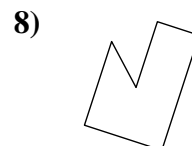
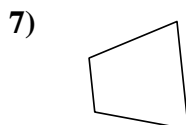


1. no

2. no

3. no

4. yes

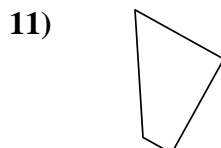
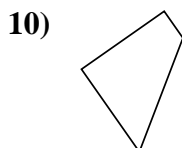


5. yes

6. yes

7. yes

8. no

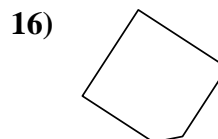
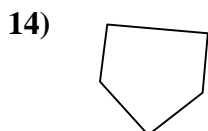
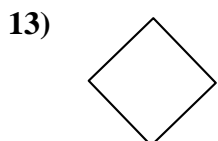


9. yes

10. yes

11. yes

12. no

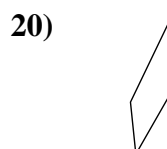
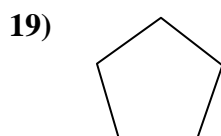
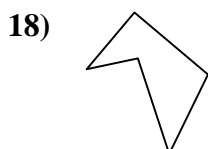


13. yes

14. no

15. yes

16. no



17. no

18. no

19. no

20. yes