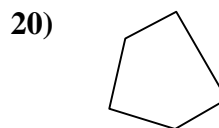
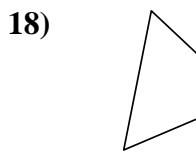
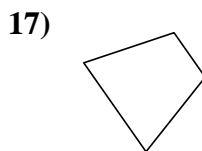
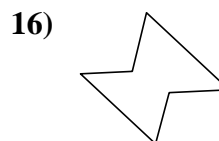
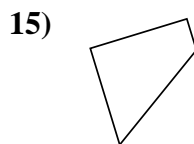
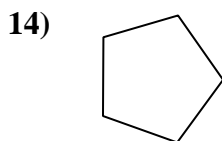

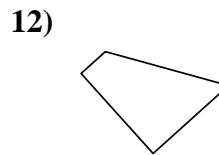
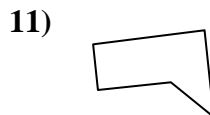
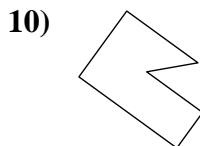
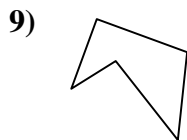
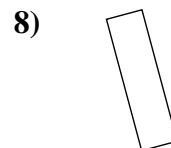
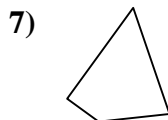
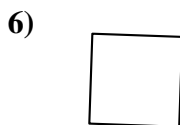
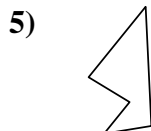
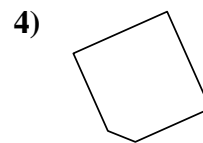
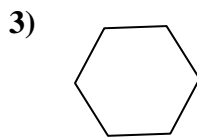
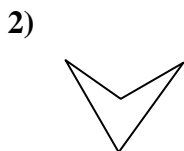
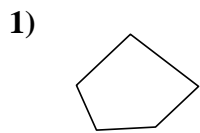




Determine if the shape shown is a quadrilateral (yes) or not (no).

Answers

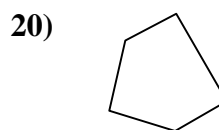
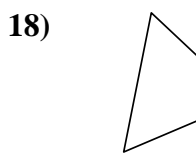
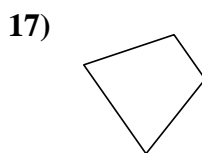
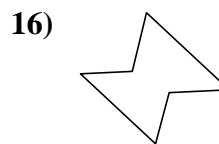
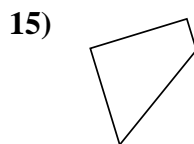
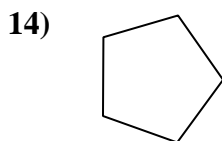
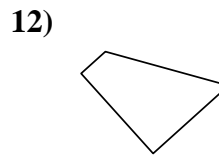
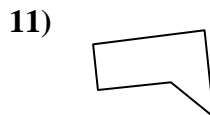
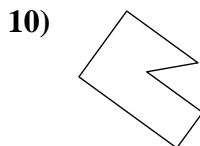
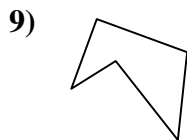
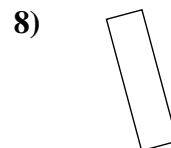
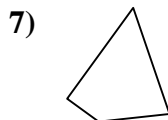
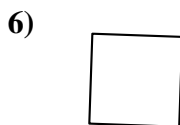
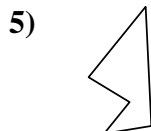
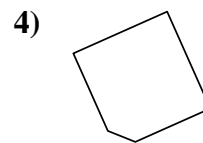
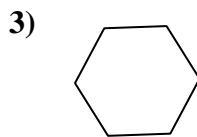
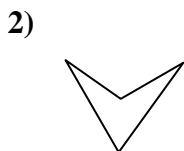
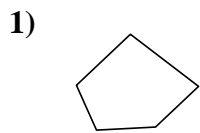


- 1. _____
- 2. _____
- 3. _____
- 4. _____
- 5. _____
- 6. _____
- 7. _____
- 8. _____
- 9. _____
- 10. _____
- 11. _____
- 12. _____
- 13. _____
- 14. _____
- 15. _____
- 16. _____
- 17. _____
- 18. _____
- 19. _____
- 20. _____



Determine if the shape shown is a quadrilateral (yes) or not (no).

Answers



1. no

2. yes

3. no

4. no

5. no

6. yes

7. yes

8. yes

9. no

10. no

11. no

12. yes

13. yes

14. no

15. yes

16. no

17. yes

18. yes

19. yes

20. no