



Use the double numberline to solve the problems.

Answers

- 1) A sloppy joe restaurant gave 7 napkins for every 4 items ordered. If someone bought 24 items, how many napkins should they get?
- item  
←————→  
napkins ←————→
- 2) A store had a sale where you could get 8 bags of cashews for \$5. If you wanted to buy 80 bags, how much would it cost?
- cashews  
←————→  
price ←————→
- 3) A box of candy had 4 cherry pieces for every 9 lemon pieces. If the box had 18 lemon pieces, how many cherry pieces would there be?
- lemon  
←————→  
cherry ←————→
- 4) On her MP3 player for every 2 pop song Isabel had she also had 4 country song. If she has 20 pop songs on her MP3 player, how many country songs does she have?
- pop  
←————→  
country ←————→
- 5) A builder could get 6 sheets of sheetrock for \$2. If he bought 48 sheets, how much money would he have spent?
- heetrock  
←————→  
price ←————→
- 6) A recipe call for 3 teaspoons of seasoning for every 2 batches of chicken. If you have 18 batches of chicken, how many teaspoons of seasoning will you need?
- chicken  
←————→  
easoning ←————→
- 7) For every 3 cans Mike collected for recycling he earned 9 cents. After he collected 24 cans, how much money would he have earned?
- cans  
←————→  
money ←————→
- 8) The ratio of boys to girls at the park was 7 to 3. If there were 42 boys, how many girls were there?
- boys  
←————→  
girls ←————→
1. \_\_\_\_\_  
2. \_\_\_\_\_  
3. \_\_\_\_\_  
4. \_\_\_\_\_  
5. \_\_\_\_\_  
6. \_\_\_\_\_  
7. \_\_\_\_\_  
8. \_\_\_\_\_

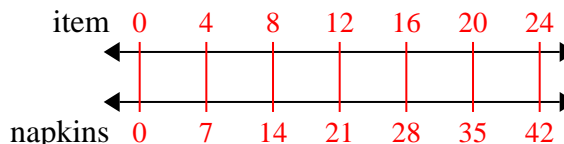


Use the double numberline to solve the problems.

Answers

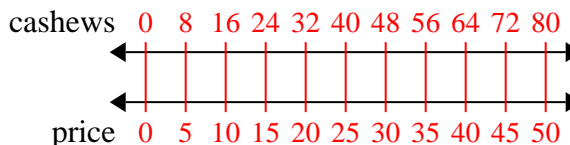
1)

A sloppy joe restaurant gave 7 napkins for every 4 items ordered. If someone bought 24 items, how many napkins should they get?

1. 42

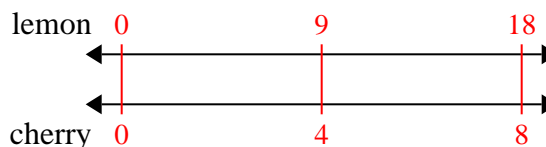
2)

A store had a sale where you could get 8 bags of cashews for \$5. If you wanted to buy 80 bags, how much would it cost?

3. 8

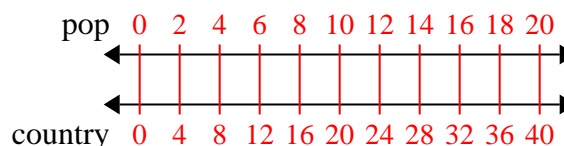
3)

A box of candy had 4 cherry pieces for every 9 lemon pieces. If the box had 18 lemon pieces, how many cherry pieces would there be?

4. 405. 166. 277. 72

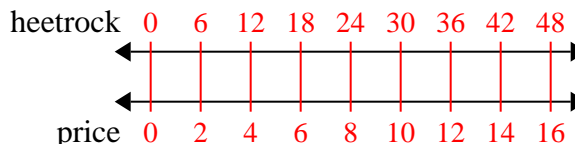
4)

On her MP3 player for every 2 pop song Isabel had she also had 4 country song. If she has 20 pop songs on her MP3 player, how many country songs does she have?

8. 18

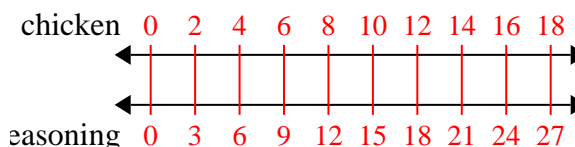
5)

A builder could get 6 sheets of sheetrock for \$2. If he bought 48 sheets, how much money would he have spent?



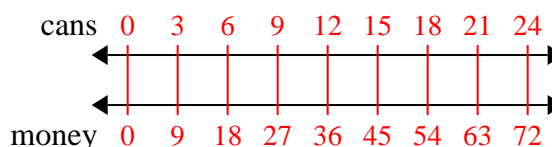
6)

A recipe call for 3 teaspoons of seasoning for every 2 batches of chicken. If you have 18 batches of chicken, how many teaspoons of seasoning will you need?



7)

For every 3 cans Mike collected for recycling he earned 9 cents. After he collected 24 cans, how much money would he have earned?



8)

The ratio of boys to girls at the park was 7 to 3. If there were 42 boys, how many girls were there?

