


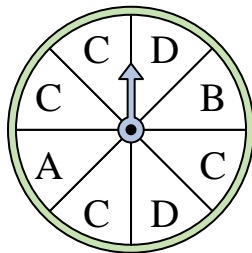


Solve each problem.

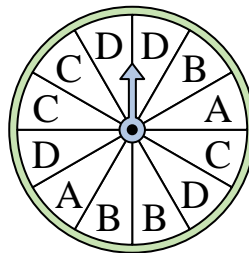
- 1) Which number is the spinner least likely to land on?




- 2) Which letter is the spinner most likely to land on?



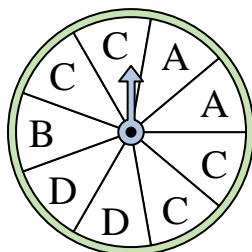
- 3) Which letter is the spinner least likely to land on?



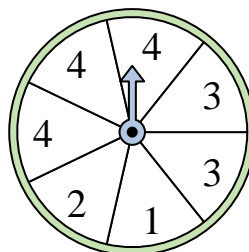
- 4) Which number is the spinner most likely to land on?




- 5) Which letter is the spinner most likely to land on?




- 6) Which two numbers is the spinner equally likely to land on?



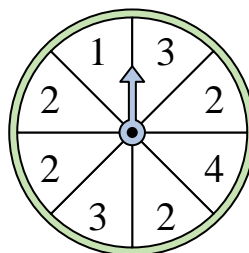
- 7) Which number is the spinner least likely to land on?



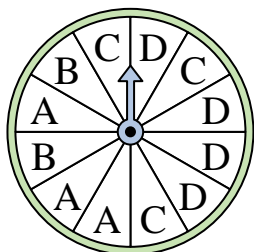
- 8) Which number is the spinner most likely to land on?




- 9) Which number is the spinner most likely to land on?



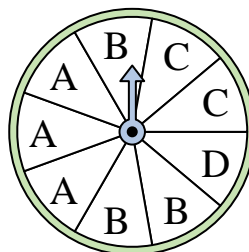
- 10) Which letter is the spinner least likely to land on?



- 11) Which number is the spinner most likely to land on?



- 12) Which two letters is the spinner equally likely to land on?




Answers

- 1. _____
- 2. _____
- 3. _____
- 4. _____
- 5. _____
- 6. _____
- 7. _____
- 8. _____
- 9. _____
- 10. _____
- 11. _____
- 12. _____

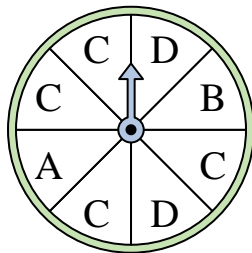


Solve each problem.

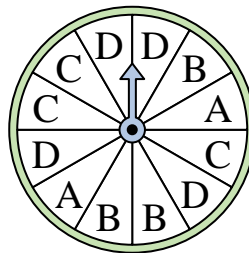
- 1) Which number is the spinner least likely to land on?




- 2) Which letter is the spinner most likely to land on?



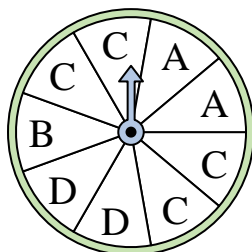
- 3) Which letter is the spinner least likely to land on?



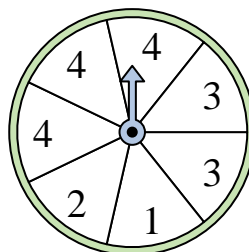
- 4) Which number is the spinner most likely to land on?




- 5) Which letter is the spinner most likely to land on?




- 6) Which two numbers is the spinner equally likely to land on?



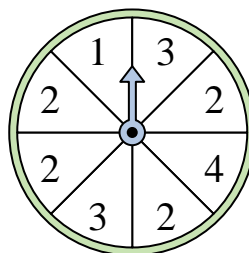
- 7) Which number is the spinner least likely to land on?



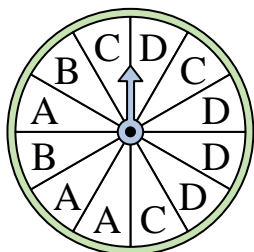
- 8) Which number is the spinner most likely to land on?




- 9) Which number is the spinner most likely to land on?



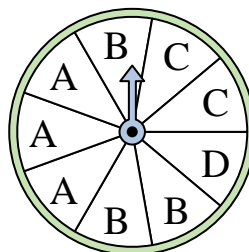
- 10) Which letter is the spinner least likely to land on?



- 11) Which number is the spinner most likely to land on?



- 12) Which two letters is the spinner equally likely to land on?



Answers

1. 4
2. C
3. A
4. 3
5. C
6. 1 & 2
7. 2
8. 1
9. 2
10. B
11. 3
12. A & B