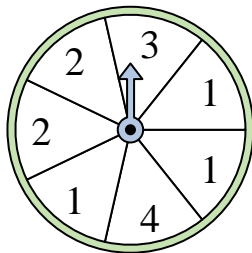


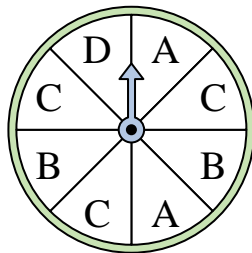


Solve each problem.

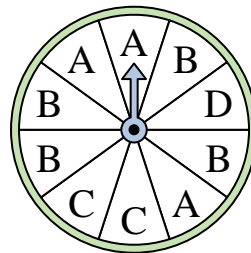
- 1) Which number is the spinner most likely to land on?



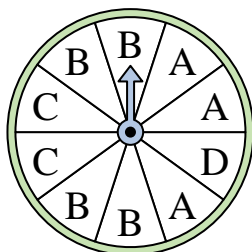
- 2) Which two letters is the spinner equally likely to land on?




- 3) Which letter is the spinner least likely to land on?



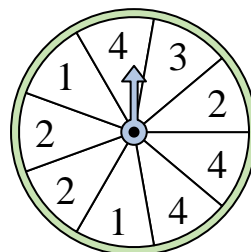
- 4) Which letter is the spinner most likely to land on?



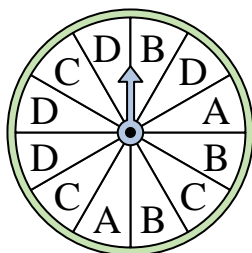
- 5) Which number is the spinner most likely to land on?



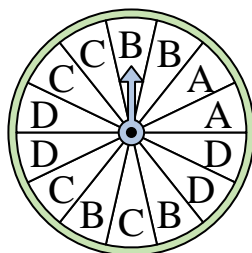
- 6) Which two numbers is the spinner equally likely to land on?



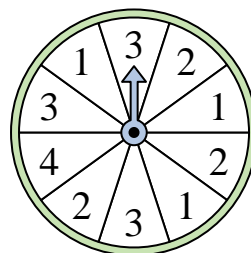
- 7) Which letter is the spinner least likely to land on?




- 8) Which letter is the spinner least likely to land on?



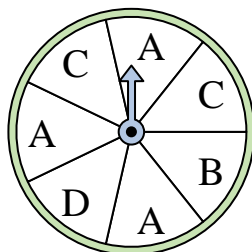
- 9) Which number is the spinner least likely to land on?



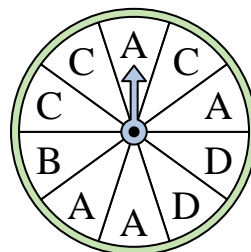
- 10) Which number is the spinner least likely to land on?



- 11) Which two letters is the spinner equally likely to land on?



- 12) Which letter is the spinner most likely to land on?



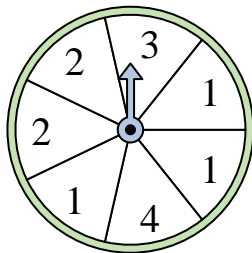
Answers

1. \_\_\_\_\_
2. \_\_\_\_\_
3. \_\_\_\_\_
4. \_\_\_\_\_
5. \_\_\_\_\_
6. \_\_\_\_\_
7. \_\_\_\_\_
8. \_\_\_\_\_
9. \_\_\_\_\_
10. \_\_\_\_\_
11. \_\_\_\_\_
12. \_\_\_\_\_

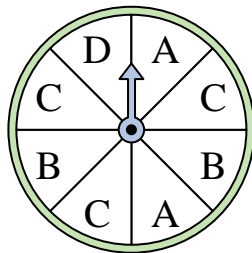


Solve each problem.

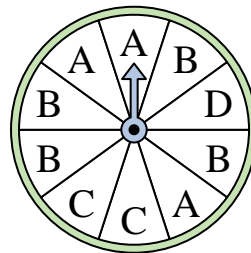
- 1) Which number is the spinner most likely to land on?



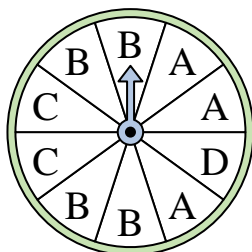
- 2) Which two letters is the spinner equally likely to land on?




- 3) Which letter is the spinner least likely to land on?



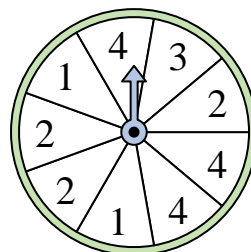
- 4) Which letter is the spinner most likely to land on?



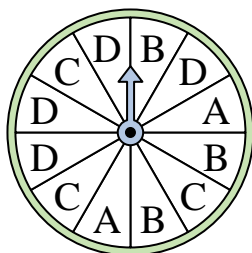
- 5) Which number is the spinner most likely to land on?



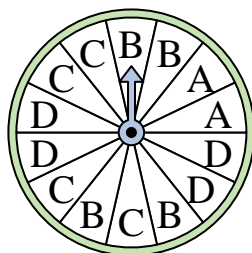
- 6) Which two numbers is the spinner equally likely to land on?



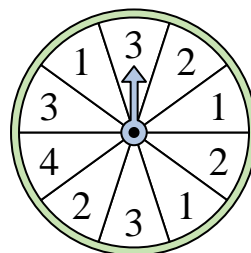
- 7) Which letter is the spinner least likely to land on?




- 8) Which letter is the spinner least likely to land on?



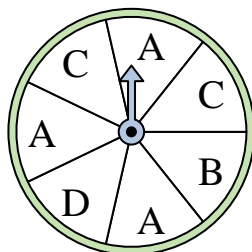
- 9) Which number is the spinner least likely to land on?



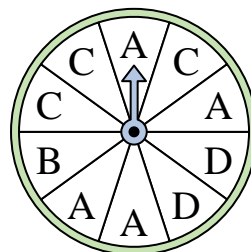
- 10) Which number is the spinner least likely to land on?



- 11) Which two letters is the spinner equally likely to land on?



- 12) Which letter is the spinner most likely to land on?



Answers

1. 1
2. A & B
3. D
4. B
5. 4
6. 2 & 4
7. A
8. A
9. 4
10. 4
11. B & D
12. A