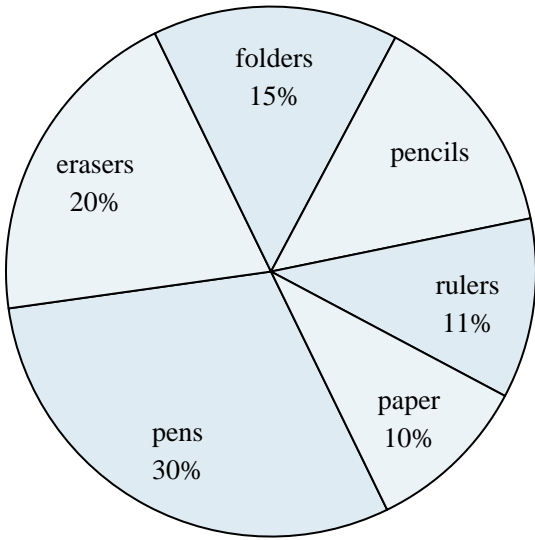




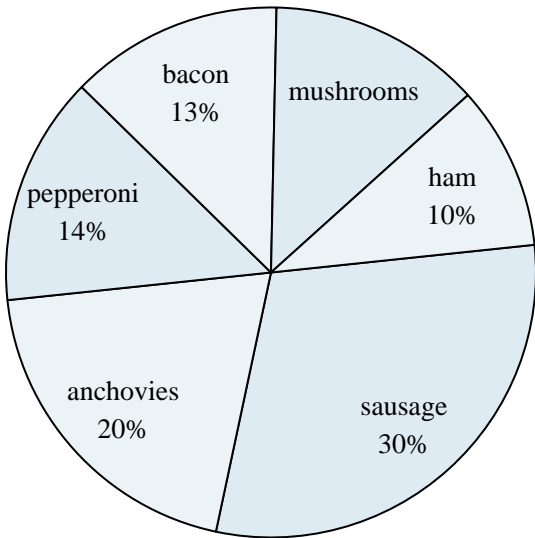
Use the graph to solve.

**School Store Sales**



- 1) Which product sold the best?
- 2) Which two products accounted for about half the sales?
- 3) What percent of the sales were pencils?
- 4) Which product sold the worst?
- 5) What is the combined amount of pens and folders sold?

**Favorite Pizza Topping**



- 6) Which topping was the least popular?
- 7) What percent of people said anchovies was their favorite?
- 8) Which two toppings did about half the people like the best?
- 9) Which topping was the most popular?
- 10) What percent of people said either sausage or ham was their favorite?

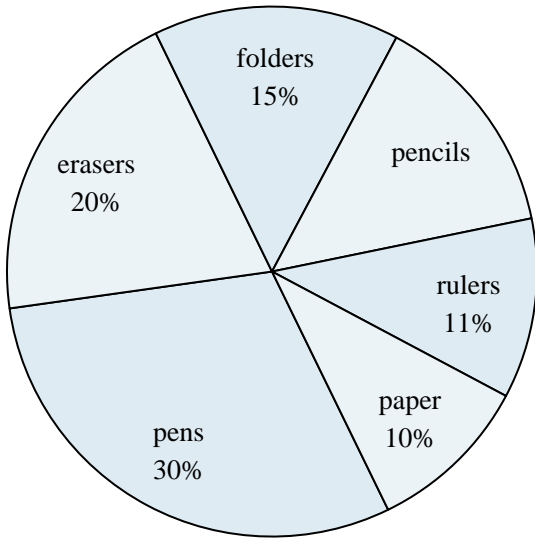
**Answers**

1. \_\_\_\_\_
2. \_\_\_\_\_
3. \_\_\_\_\_
4. \_\_\_\_\_
5. \_\_\_\_\_
6. \_\_\_\_\_
7. \_\_\_\_\_
8. \_\_\_\_\_
9. \_\_\_\_\_
10. \_\_\_\_\_



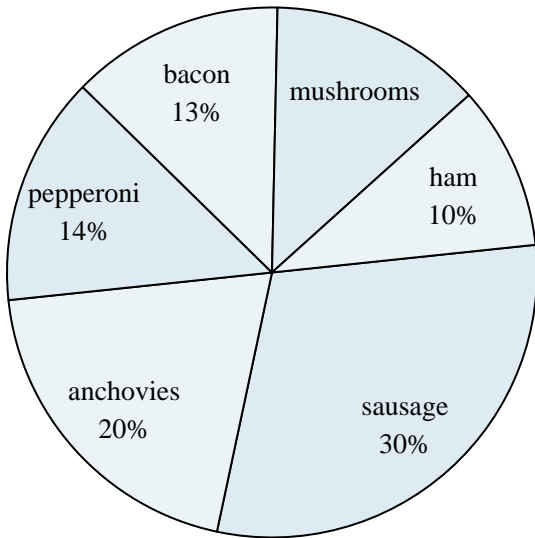
Use the graph to solve.

**School Store Sales**



- 1) Which product sold the best?
- 2) Which two products accounted for about half the sales?
- 3) What percent of the sales were pencils?
- 4) Which product sold the worst?
- 5) What is the combined amount of pens and folders sold?

**Favorite Pizza Topping**



- 6) Which topping was the least popular?
- 7) What percent of people said anchovies was their favorite?
- 8) Which two toppings did about half the people like the best?
- 9) Which topping was the most popular?
- 10) What percent of people said either sausage or ham was their favorite?

Answers

1. pens
2. pens & erasers
3. 14%
4. paper
5. 45%
6. ham
7. 20%
8. sausage & anchovies
9. sausage
10. 40%