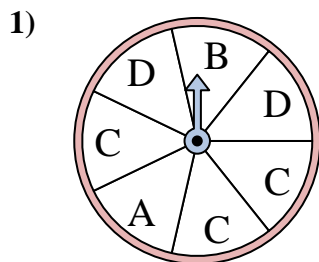


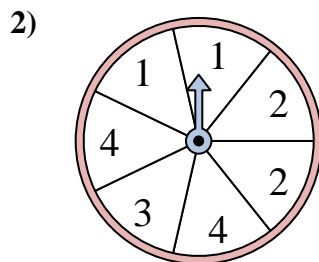


Solve each problem. Round your answer to the nearest tenth.

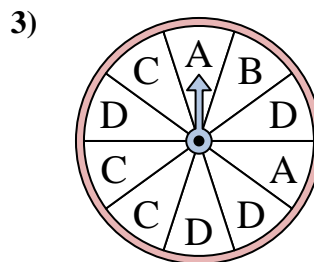
**Answers**



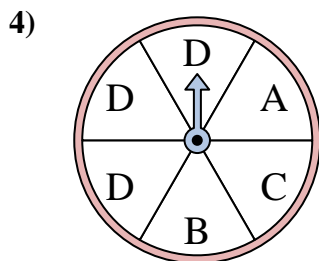
The spinner has a \_\_\_\_\_% chance of landing on a D.



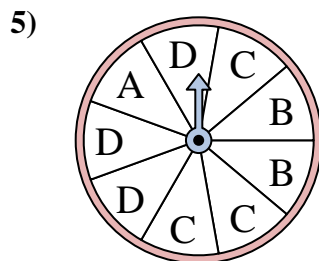
The spinner has a \_\_\_\_\_% chance of landing on a 3.



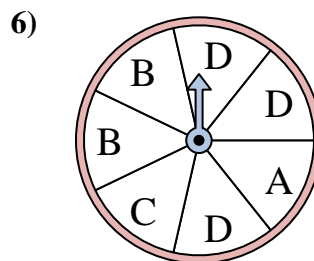
The spinner has a \_\_\_\_\_% chance of landing on a B.



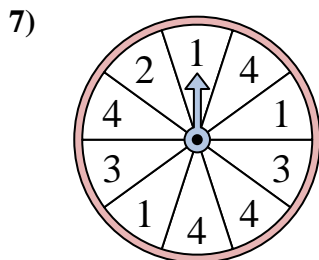
The spinner has a \_\_\_\_\_% chance of landing on a B.



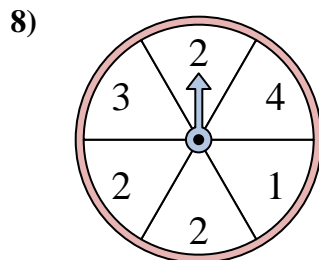
The spinner has a \_\_\_\_\_% chance of landing on a C.



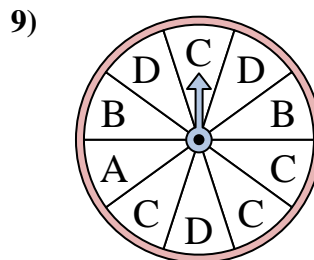
The spinner has a \_\_\_\_\_% chance of landing on a B.



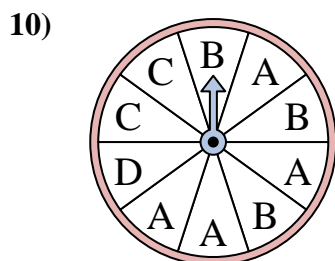
The spinner has a \_\_\_\_\_% chance of landing on a 4.



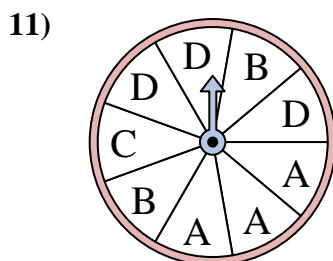
The spinner has a \_\_\_\_\_% chance of landing on a 1.



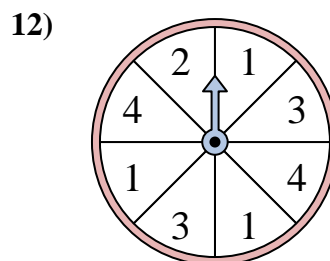
The spinner has a \_\_\_\_\_% chance of landing on a C.



The spinner has a \_\_\_\_\_% chance of landing on a D.



The spinner has a \_\_\_\_\_% chance of landing on a B.

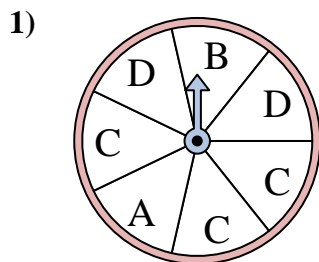


The spinner has a \_\_\_\_\_% chance of landing on a 4.

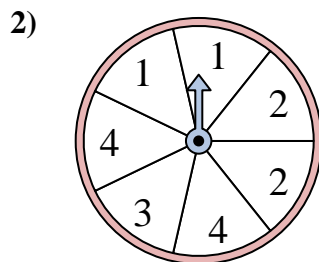
1. \_\_\_\_\_
2. \_\_\_\_\_
3. \_\_\_\_\_
4. \_\_\_\_\_
5. \_\_\_\_\_
6. \_\_\_\_\_
7. \_\_\_\_\_
8. \_\_\_\_\_
9. \_\_\_\_\_
10. \_\_\_\_\_
11. \_\_\_\_\_
12. \_\_\_\_\_



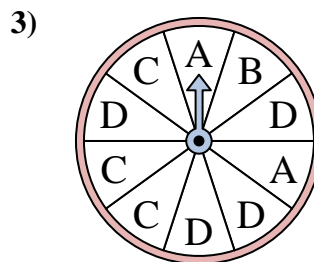
Solve each problem. Round your answer to the nearest tenth.



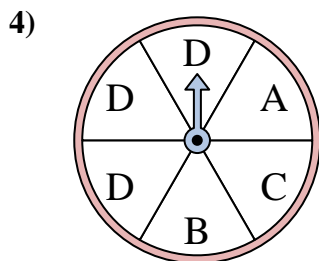
The spinner has a \_\_\_\_\_% chance of landing on a D.



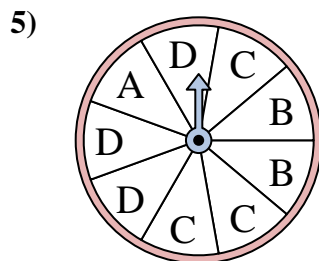
The spinner has a \_\_\_\_\_% chance of landing on a 3.



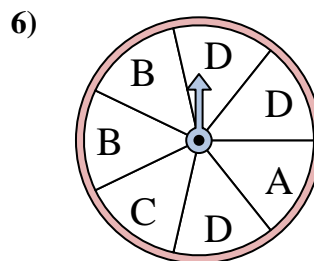
The spinner has a \_\_\_\_\_% chance of landing on a B.



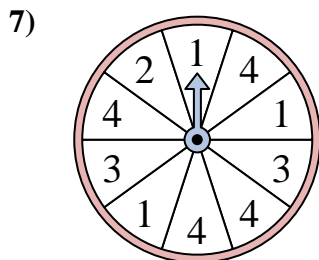
The spinner has a \_\_\_\_\_% chance of landing on a B.



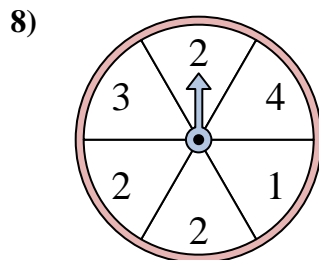
The spinner has a \_\_\_\_\_% chance of landing on a C.



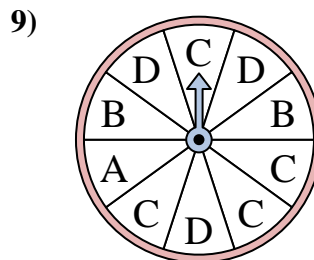
The spinner has a \_\_\_\_\_% chance of landing on a B.



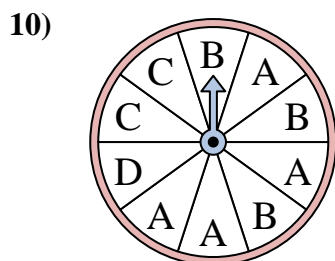
The spinner has a \_\_\_\_\_% chance of landing on a 4.



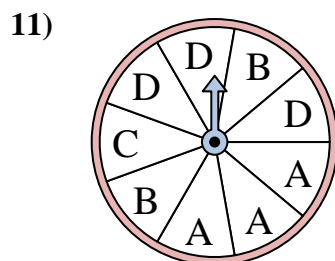
The spinner has a \_\_\_\_\_% chance of landing on a 1.



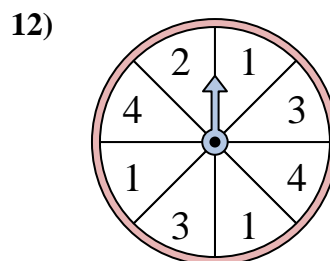
The spinner has a \_\_\_\_\_% chance of landing on a C.



The spinner has a \_\_\_\_\_% chance of landing on a D.



The spinner has a \_\_\_\_\_% chance of landing on a B.



The spinner has a \_\_\_\_\_% chance of landing on a 4.

Answers

1. 28.6
2. 14.3
3. 10
4. 16.7
5. 33.3
6. 28.6
7. 40
8. 16.7
9. 40
10. 10
11. 22.2
12. 25