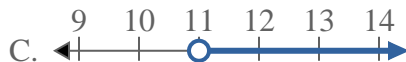
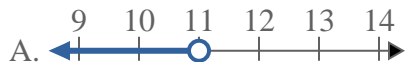


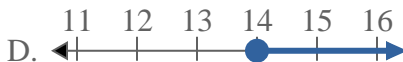
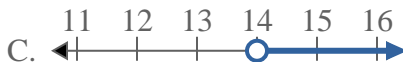


Solve each problem.

1) Which option best shows  $X < 11$



2) Which option best shows  $X < 14$



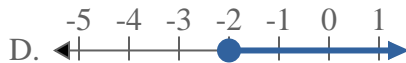
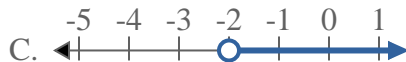
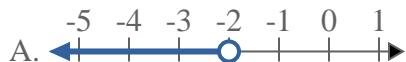
3) Which option best shows  $X < 7$



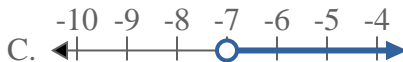
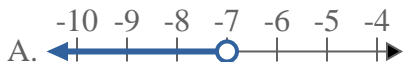
4) Which option best shows  $X \geq 20$



5) Which option best shows  $X > -2$



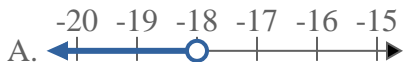
6) Which option best shows  $X > -7$



7) Which option best shows  $X > 20$



8) Which option best shows  $X < -18$



**Answers**

1. \_\_\_\_\_

2. \_\_\_\_\_

3. \_\_\_\_\_

4. \_\_\_\_\_

5. \_\_\_\_\_

6. \_\_\_\_\_

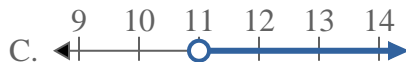
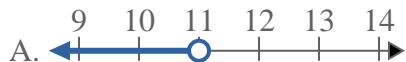
7. \_\_\_\_\_

8. \_\_\_\_\_

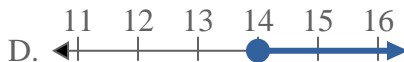
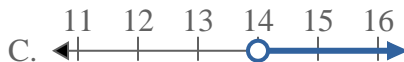


Solve each problem.

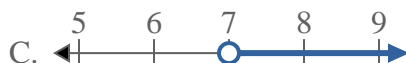
1) Which option best shows  $X < 11$



2) Which option best shows  $X < 14$



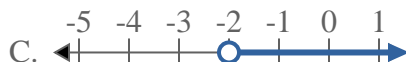
3) Which option best shows  $X < 7$



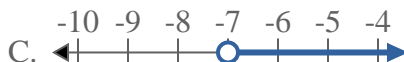
4) Which option best shows  $X \geq 20$



5) Which option best shows  $X > -2$



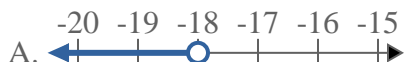
6) Which option best shows  $X > -7$



7) Which option best shows  $X > 20$



8) Which option best shows  $X < -18$



**Answers**

1.   **A**  

2.   **A**  

3.   **A**  

4.   **D**  

5.   **C**  

6.   **C**  

7.   **C**  

8.   **A**