

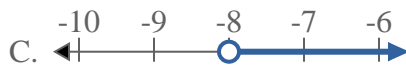


Solve each problem.

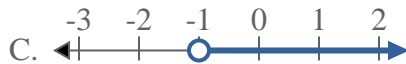
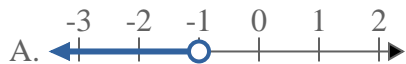
1) Which option best shows $X < 20$



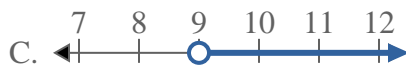
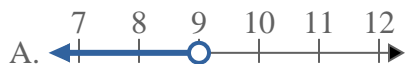
3) Which option best shows $X \leq -8$



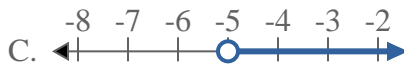
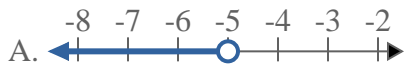
5) Which option best shows $X > -1$



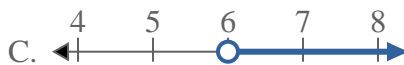
7) Which option best shows $X < 9$



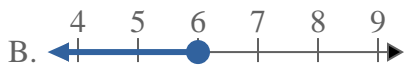
2) Which option best shows $X \geq -5$



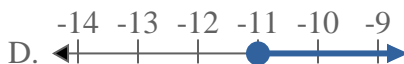
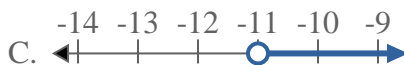
4) Which option best shows $X \geq 6$



6) Which option best shows $X \leq 6$



8) Which option best shows $X \leq -11$



Answers

1. _____

2. _____

3. _____

4. _____

5. _____

6. _____

7. _____

8. _____

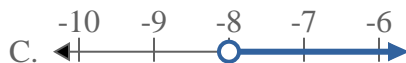


Solve each problem.

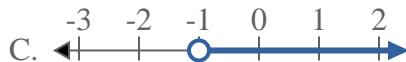
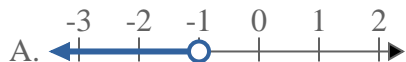
1) Which option best shows $X < 20$



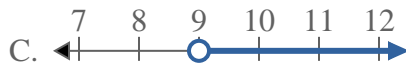
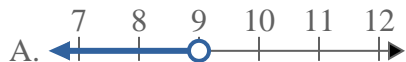
3) Which option best shows $X \leq -8$



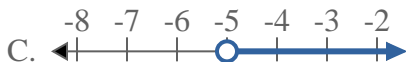
5) Which option best shows $X > -1$



7) Which option best shows $X < 9$



2) Which option best shows $X \geq -5$



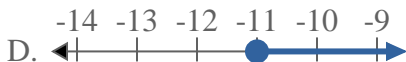
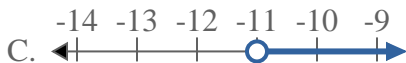
4) Which option best shows $X \geq 6$



6) Which option best shows $X \leq 6$



8) Which option best shows $X \leq -11$



Answers

1. **A**

2. **D**

3. **B**

4. **D**

5. **C**

6. **B**

7. **A**

8. **B**