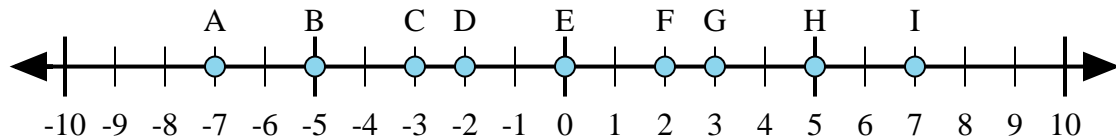




Determine which letter in the numberline best represents the answer to each problem.

Answers



1)  $2 + (-5) =$

2)  $(-5) + (-2) =$

3)  $(-5) + 2 =$

4)  $5 + (-2) =$

5)  $(-2) + 5 =$

1. \_\_\_\_\_

2. \_\_\_\_\_

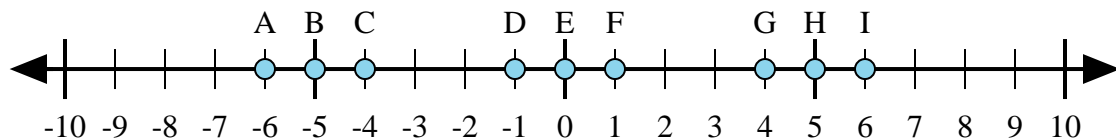
3. \_\_\_\_\_

4. \_\_\_\_\_

5. \_\_\_\_\_

6. \_\_\_\_\_

7. \_\_\_\_\_



6)  $1 + 5 =$

7)  $(-1) + 5 =$

8)  $5 + (-1) =$

9)  $(-1) + (-5) =$

10)  $(-5) + 1 =$

8. \_\_\_\_\_

9. \_\_\_\_\_

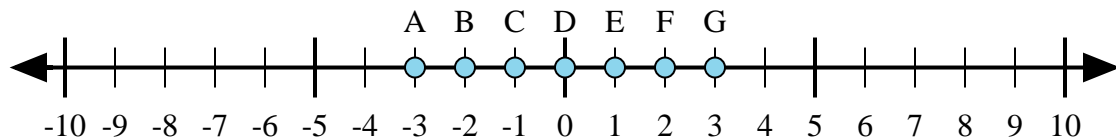
10. \_\_\_\_\_

11. \_\_\_\_\_

12. \_\_\_\_\_

13. \_\_\_\_\_

14. \_\_\_\_\_



11)  $(-1) + 2 =$

12)  $1 + (-2) =$

13)  $2 + 1 =$

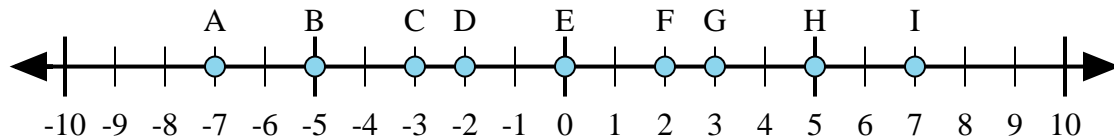
14)  $2 + (-1) =$

15)  $(-2) + 1 =$

15. \_\_\_\_\_



Determine which letter in the numberline best represents the answer to each problem.



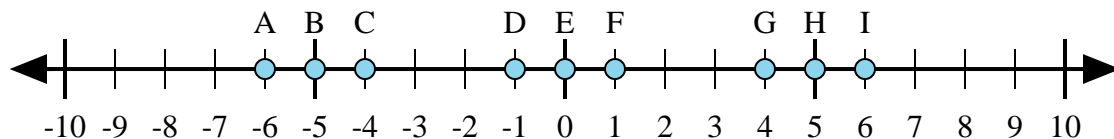
1)  $2 + (-5) =$

2)  $(-5) + (-2) =$

3)  $(-5) + 2 =$

4)  $5 + (-2) =$

5)  $(-2) + 5 =$



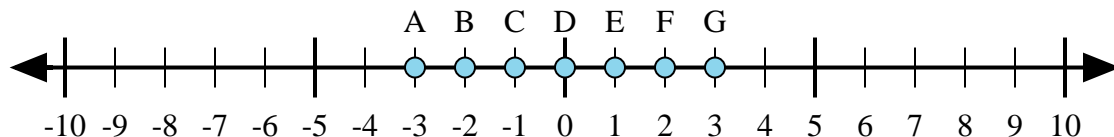
6)  $1 + 5 =$

7)  $(-1) + 5 =$

8)  $5 + (-1) =$

9)  $(-1) + (-5) =$

10)  $(-5) + 1 =$



11)  $(-1) + 2 =$

12)  $1 + (-2) =$

13)  $2 + 1 =$

14)  $2 + (-1) =$

15)  $(-2) + 1 =$

Answers

1. C

2. A

3. C

4. G

5. G

6. I

7. G

8. G

9. A

10. C

11. E

12. C

13. G

14. E

15. C