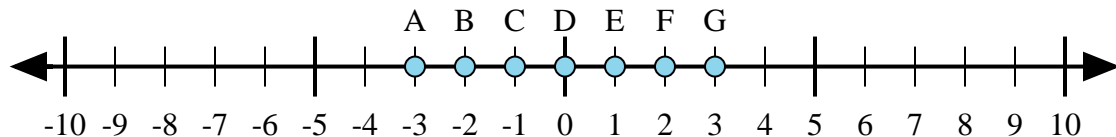




Determine which letter in the numberline best represents the answer to each problem.

Answers



1)  $1 + 2 =$

2)  $(-1) + (-2) =$

3)  $(-2) + 1 =$

4)  $2 + (-1) =$

5)  $1 + (-2) =$

1. \_\_\_\_\_

2. \_\_\_\_\_

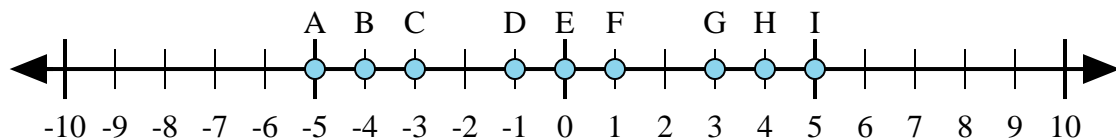
3. \_\_\_\_\_

4. \_\_\_\_\_

5. \_\_\_\_\_

6. \_\_\_\_\_

7. \_\_\_\_\_



6)  $4 + (-1) =$

7)  $(-4) + (-1) =$

8)  $(-4) + 1 =$

9)  $(-1) + 4 =$

10)  $1 + (-4) =$

8. \_\_\_\_\_

9. \_\_\_\_\_

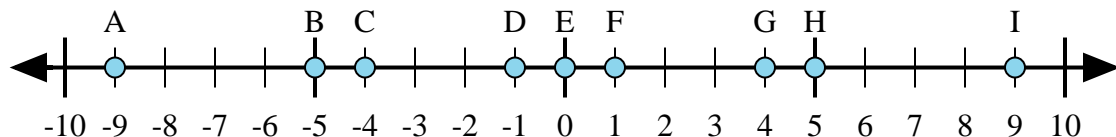
10. \_\_\_\_\_

11. \_\_\_\_\_

12. \_\_\_\_\_

13. \_\_\_\_\_

14. \_\_\_\_\_



11)  $5 + (-4) =$

12)  $4 + (-5) =$

13)  $(-5) + 4 =$

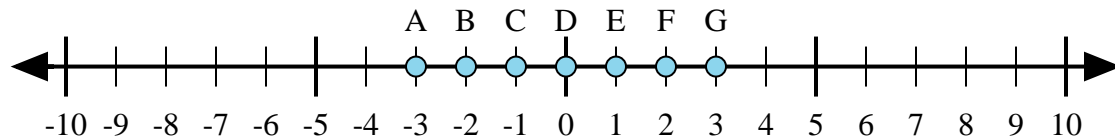
14)  $5 + 4 =$

15)  $(-4) + 5 =$

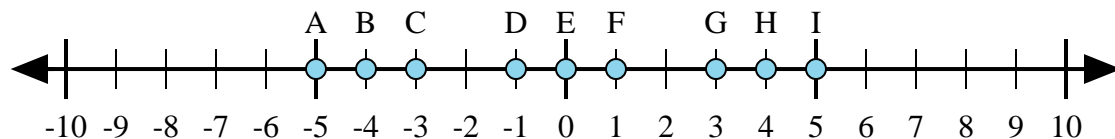
15. \_\_\_\_\_



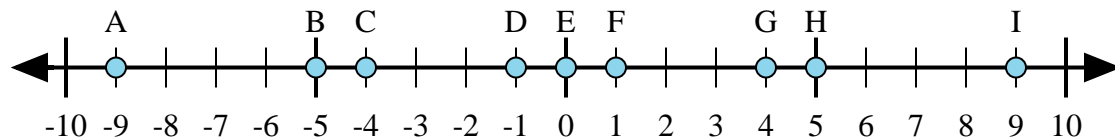
Determine which letter in the numberline best represents the answer to each problem.



- 1)  $1 + 2 =$
- 2)  $(-1) + (-2) =$
- 3)  $(-2) + 1 =$
- 4)  $2 + (-1) =$
- 5)  $1 + (-2) =$



- 6)  $4 + (-1) =$
- 7)  $(-4) + (-1) =$
- 8)  $(-4) + 1 =$
- 9)  $(-1) + 4 =$
- 10)  $1 + (-4) =$



- 11)  $5 + (-4) =$
- 12)  $4 + (-5) =$
- 13)  $(-5) + 4 =$
- 14)  $5 + 4 =$
- 15)  $(-4) + 5 =$

Answers

1.     **G**
2.     **A**
3.     **C**
4.     **E**
5.     **C**
6.     **G**
7.     **A**
8.     **C**
9.     **G**
10.     **C**
11.     **F**
12.     **D**
13.     **D**
14.     **I**
15.     **F**