



Partition the shape as described and then count to find the number of boxes.

Answers

Rows go left to right.

Columns go up and down.

This has 4 rows and 5 columns.
There are 20 boxes total.



1. _____
2. _____
3. _____
4. _____
5. _____
6. _____
7. _____
8. _____
9. _____

1) 2 rows
3 columns



2) 2 rows
5 columns



3) 5 rows
4 columns



4) 4 rows
2 columns



5) 2 rows
4 columns



6) 3 rows
3 columns



7) 5 rows
3 columns



8) 5 rows
5 columns



9) 2 rows
2 columns





Partition the shape as described and then count to find the number of boxes.

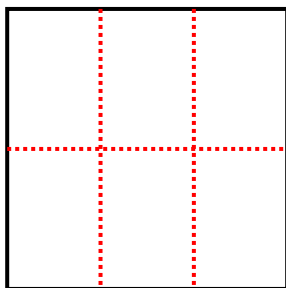
Rows go left to right.

Columns go up and down.

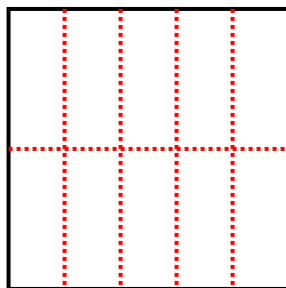
This has 4 rows and 5 columns.
There are 20 boxes total.



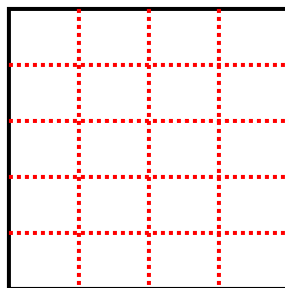
1) 2 rows
3 columns



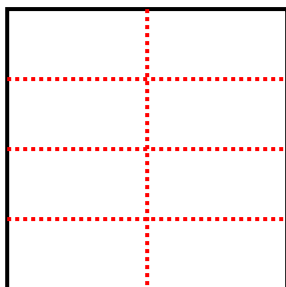
2) 2 rows
5 columns



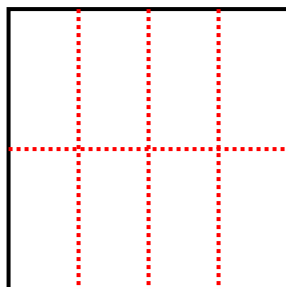
3) 5 rows
4 columns



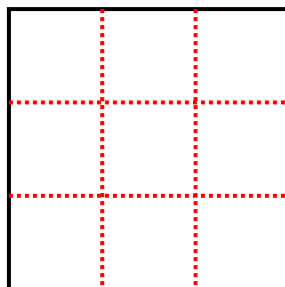
4) 4 rows
2 columns



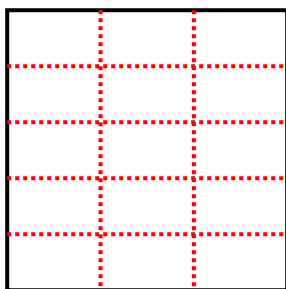
5) 2 rows
4 columns



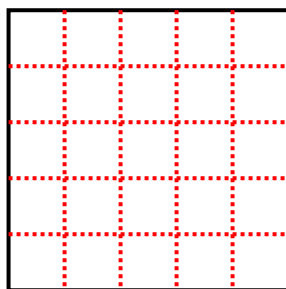
6) 3 rows
3 columns



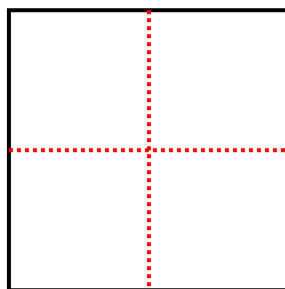
7) 5 rows
3 columns



8) 5 rows
5 columns



9) 2 rows
2 columns



Answers

1. 6

2. 10

3. 20

4. 8

5. 8

6. 9

7. 15

8. 25

9. 4