



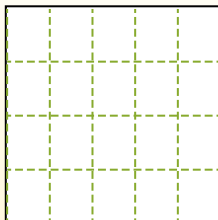
Partition the shape as described and then count to find the number of boxes.

Answers

Rows go left to right.

Columns go up and down.

This has 4 rows and 5 columns.  
There are 20 boxes total.



1. \_\_\_\_\_
2. \_\_\_\_\_
3. \_\_\_\_\_
4. \_\_\_\_\_
5. \_\_\_\_\_
6. \_\_\_\_\_
7. \_\_\_\_\_
8. \_\_\_\_\_
9. \_\_\_\_\_


1) 3 rows  
3 columns



2) 3 rows  
2 columns



3) 2 rows  
2 columns



4) 4 rows  
3 columns



5) 4 rows  
2 columns



6) 4 rows  
4 columns



7) 3 rows  
5 columns



8) 2 rows  
5 columns



9) 2 rows  
4 columns



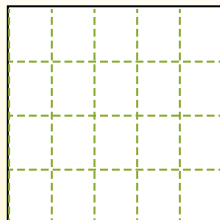
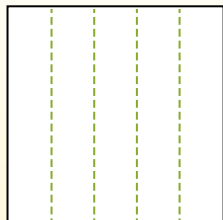
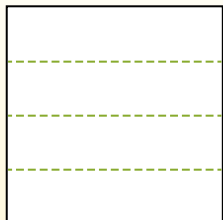


Partition the shape as described and then count to find the number of boxes.

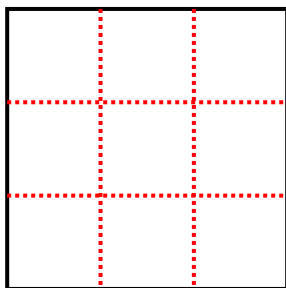
Rows go left to right.

Columns go up and down.

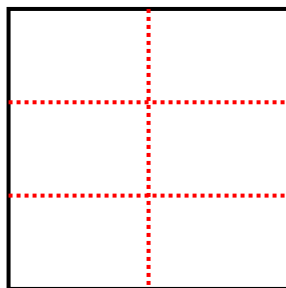
This has 4 rows and 5 columns.  
There are 20 boxes total.



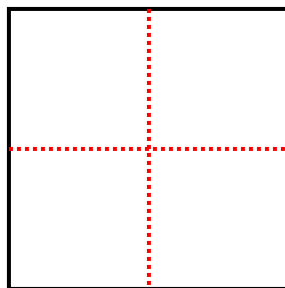
1) 3 rows  
3 columns



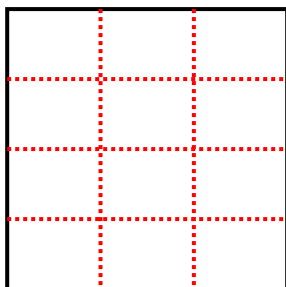
2) 3 rows  
2 columns



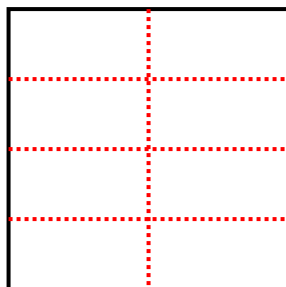
3) 2 rows  
2 columns



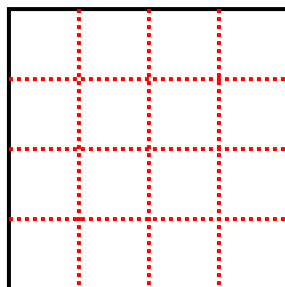
4) 4 rows  
3 columns



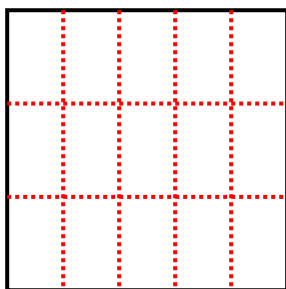
5) 4 rows  
2 columns



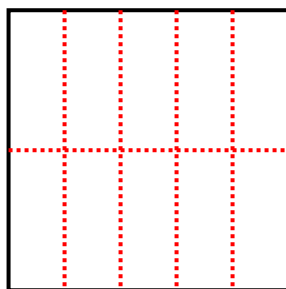
6) 4 rows  
4 columns



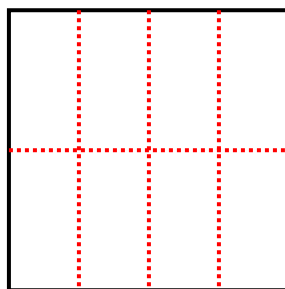
7) 3 rows  
5 columns



8) 2 rows  
5 columns



9) 2 rows  
4 columns



Answers

1. 9

2. 6

3. 4

4. 12

5. 8

6. 16

7. 15

8. 10

9. 8