
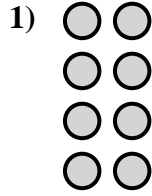
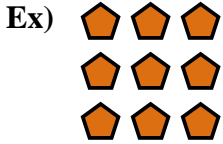




Write an equation to express the array and then find the number of shapes.

Answers

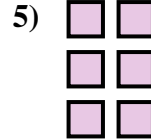



Ex.  $3 \times 3 = 9$

1. \_\_\_\_\_

2. \_\_\_\_\_

3. \_\_\_\_\_




4. \_\_\_\_\_

5. \_\_\_\_\_

6. \_\_\_\_\_

7. \_\_\_\_\_



8. \_\_\_\_\_

9. \_\_\_\_\_

10. \_\_\_\_\_



11. \_\_\_\_\_



12. \_\_\_\_\_


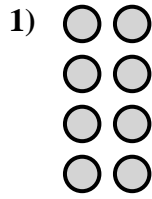
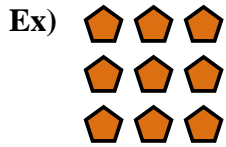
13. \_\_\_\_\_

14. \_\_\_\_\_





Write an equation to express the array and then find the number of shapes.



Answers

Ex.  $3 \times 3 = 9$

1.  $4 \times 2 = 8$

2.  $5 \times 4 = 20$

3.  $2 \times 3 = 6$

4.  $5 \times 5 = 25$

5.  $3 \times 2 = 6$

6.  $3 \times 5 = 15$

7.  $4 \times 3 = 12$

8.  $4 \times 5 = 20$

9.  $5 \times 2 = 10$

10.  $4 \times 4 = 16$

11.  $2 \times 2 = 4$

12.  $2 \times 4 = 8$

13.  $2 \times 5 = 10$

14.  $3 \times 4 = 12$

