



Determine which letter best represents the length / height.

Answers

Millimeter (mm)

Centimeter (cm)

Meter (m)

Kilometer (km)

A millimeter is about the thickness of a credit card.

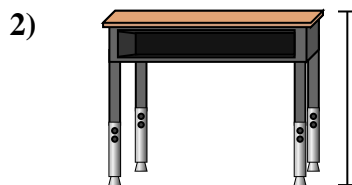
10 mm = 1 cm.
The metal portion of a pencil is about 1 cm. A ruler is about 30 centimeters.

100 cm = 1 m
From the floor to a door knob is about 1 meter.


1,000 m = 1 km
Most major roads are at least a kilometer long.



- Pen
A. 12 centimeters
B. 30 millimeters
C. 30 centimeters
D. 5 meters



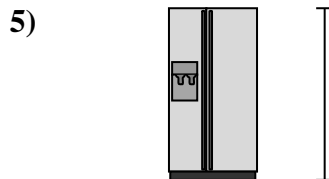
- Desk
A. 15 centimeters
B. 2 meters
C. 70 centimeters
D. 30 centimeters



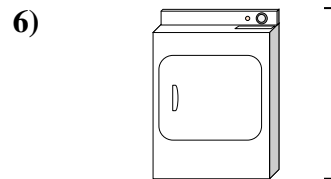
- Frog
A. 20 centimeters
B. 8 centimeters
C. 4 millimeters
D. 60 centimeters



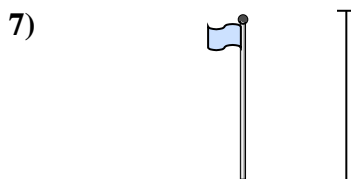
- Bicycle
A. 10 centimeters
B. 1 meter
C. 3 meters
D. 25 centimeters




- Refrigerator
A. 180 centimeters
B. 30 centimeters
C. 5 kilometers
D. 4 meters



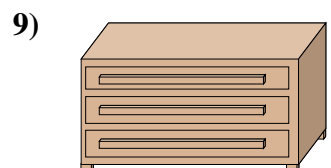
- Clothes Dryer
A. 60 centimeters
B. 1 meter
C. 25 centimeters
D. 15 centimeters



- Flag Pole
A. 2 kilometers
B. 9 meters
C. 300 centimeters
D. 2 meters



- Tennis Ball
A. 3 millimeters
B. 25 centimeters
C. 8 centimeters
D. 60 centimeters



- Dresser
A. 45 centimeters
B. 90 centimeters
C. 3 meters
D. 30 centimeters

- 1. _____
- 2. _____
- 3. _____
- 4. _____
- 5. _____
- 6. _____
- 7. _____
- 8. _____
- 9. _____



Determine which letter best represents the length / height.

Answers

Millimeter (mm)

Centimeter (cm)

Meter (m)

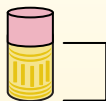
Kilometer (km)

A millimeter is about the thickness of a credit card.

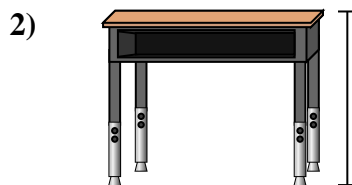
10 mm = 1 cm.
The metal portion of a pencil is about 1 cm. A ruler is about 30 centimeters.

100 cm = 1 m
From the floor to a door knob is about 1 meter.


1,000 m = 1 km
Most major roads are at least a kilometer long.



- Pen
A. 12 centimeters
B. 30 millimeters
C. 30 centimeters
D. 5 meters



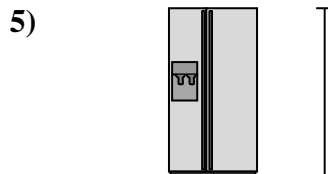
- Desk
A. 15 centimeters
B. 2 meters
C. 70 centimeters
D. 30 centimeters



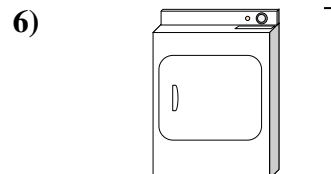
- Frog
A. 20 centimeters
B. 8 centimeters
C. 4 millimeters
D. 60 centimeters



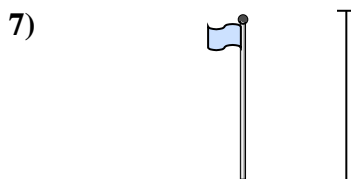
- Bicycle
A. 10 centimeters
B. 1 meter
C. 3 meters
D. 25 centimeters




- Refrigerator
A. 180 centimeters
B. 30 centimeters
C. 5 kilometers
D. 4 meters



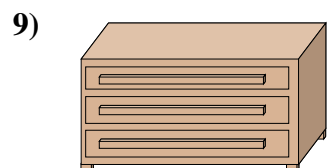
- Clothes Dryer
A. 60 centimeters
B. 1 meter
C. 25 centimeters
D. 15 centimeters



- Flag Pole
A. 2 kilometers
B. 9 meters
C. 300 centimeters
D. 2 meters



- Tennis Ball
A. 3 millimeters
B. 25 centimeters
C. 8 centimeters
D. 60 centimeters



- Dresser
A. 45 centimeters
B. 90 centimeters
C. 3 meters
D. 30 centimeters

1. **A**
2. **C**
3. **B**
4. **B**
5. **A**
6. **B**
7. **B**
8. **C**
9. **B**