





Measure the width of each block in inches and in centimeters.



Answers

Ex. 5 1/2 13 - 14

1. _____

2. _____

3. _____

4. _____

5. _____

6. _____


7. _____


8. _____


9. _____





Measure the width of each block in inches and in centimeters.


Ex) 


1) 


2) 


3) 


4) 

5) 

6) 

7) 

8) 

9) 

Answers

- Ex. 5 1/2 13 - 14
1. 3 1/2 8 - 9
2. 4 10 - 11
3. 5 12 - 13
4. 1 2 - 3
5. 3 7 - 8
6. 0 1/2 1 - 2
7. 1 1/2 3 - 4
8. 2 5 - 6
9. 4 1/2 11 - 12