





Measure the width and height of each block in inches and in centimeters.




**Answers**  
Ex. 5 1 1/2 12.7 3.8  
1. \_\_\_\_\_  
2. \_\_\_\_\_  
3. \_\_\_\_\_  
4. \_\_\_\_\_





Measure the width and height of each block in inches and in centimeters.



**Answers**

Ex. 5 1 1/2 12.7 3.8

1. 5 1/2 0 1/2 **14** **1.3**

2. 1 1/2 0 1/2 **3.8** **1.3**

3. 4 1/2 1 1/2 **11.4** **3.8**

4. **4** 1 1/2 **10.2** **3.8**