



Measure the width and height of each block in inches and in centimeters.

Ex)



Answers

Ex. 3 0 1/2 7.6 1.3


1. _____

2. _____


3. _____

4. _____

1)




2)



3)



4)





Measure the width and height of each block in inches and in centimeters.



Answers

Ex. 3 0 1/2 7.6 1.3

1. 1 1/2 1 3.8 2.5

2. 0 1/2 1 1.3 2.5

3. 5 1/2 1 14 2.5

4. 1 1 1/2 2.5 3.8

