



Measure the width of each block in inches and in centimeters.

Ex)




Ex. 5 1/2 13 - 14

1)



1. _____

2)



2. _____

3. _____

3)



4. _____

5. _____

4)



6. _____

7. _____


5)



8. _____

9. _____

6)



7)



8)



9)



Answers

Ex. 5 1/2 13 - 14

1. _____

2. _____

3. _____

4. _____

5. _____

6. _____

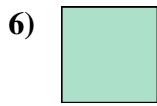
7. _____

8. _____

9. _____



Measure the width of each block in inches and in centimeters.



Answers

- Ex. 5 1/2 13 - 14
1. 3 1/2 8 - 9
2. 4 10 - 11
3. 5 12 - 13
4. 1 2 - 3
5. 3 7 - 8
6. 0 1/2 1 - 2
7. 1 1/2 3 - 4
8. 2 5 - 6
9. 4 1/2 11 - 12