



Match the description on the top with the visual image on the bottom.

**Answers**

- 1)  $\overleftrightarrow{BC}$  intersecting  $\angle ACD$
- 2) Right  $\angle ADE$
- 3)  $\overleftrightarrow{AC}$  parallel to  $\overleftrightarrow{EB}$
- 4)  $\overleftrightarrow{AB}$  parallel to  $\overleftrightarrow{CD}$
- 5)  $\overleftrightarrow{AE}$  intersecting  $\overleftrightarrow{DB}$
- 6)  $\overleftrightarrow{AD}$  intersecting  $\overleftrightarrow{BC}$  at point E
- 7)  $\overleftrightarrow{AC}$  intersected by  $\overleftrightarrow{BD}$
- 8) Acute  $\angle ABC$  intersecting  $\overleftrightarrow{AD}$
- 9)  $\overleftrightarrow{BD}$  intersecting  $\angle ACE$
- 10) D as the midpoint of  $\overleftrightarrow{CE}$
- 11)  $\overleftrightarrow{AC}$  perpendicular to  $\overleftrightarrow{AD}$
- 12)  $\overleftrightarrow{BE}$  intersecting  $\overleftrightarrow{CD}$

1. \_\_\_\_\_
2. \_\_\_\_\_
3. \_\_\_\_\_
4. \_\_\_\_\_
5. \_\_\_\_\_
6. \_\_\_\_\_
7. \_\_\_\_\_
8. \_\_\_\_\_
9. \_\_\_\_\_
10. \_\_\_\_\_
11. \_\_\_\_\_
12. \_\_\_\_\_

**A.**

**B.**

**C.**

**D.**

**E.**

**F.**

**G.**

**H.**

**I.**

**J.**

**K.**

**L.**



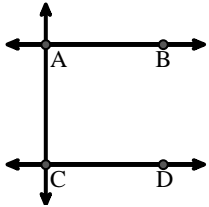
Match the description on the top with the visual image on the bottom.

**Answers**

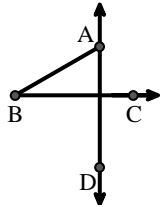
- 1)  $\overleftrightarrow{BC}$  intersecting  $\angle ACD$
- 2) Right  $\angle ADE$
- 3)  $\overleftrightarrow{AC}$  parallel to  $\overleftrightarrow{EB}$
- 4)  $\overleftrightarrow{AB}$  parallel to  $\overleftrightarrow{CD}$
- 5)  $\overleftrightarrow{AE}$  intersecting  $\overleftrightarrow{DB}$
- 6)  $\overleftrightarrow{AD}$  intersecting  $\overleftrightarrow{BC}$  at point E
- 7)  $\overleftrightarrow{AC}$  intersected by  $\overleftrightarrow{BD}$
- 8) Acute  $\angle ABC$  intersecting  $\overleftrightarrow{AD}$
- 9)  $\overleftrightarrow{BD}$  intersecting  $\angle ACE$
- 10) D as the midpoint of  $\overleftrightarrow{CE}$
- 11)  $\overleftrightarrow{AC}$  perpendicular to  $\overleftrightarrow{AD}$
- 12)  $\overleftrightarrow{BE}$  intersecting  $\overleftrightarrow{CD}$

1. **H**
2. **G**
3. **K**
4. **A**
5. **L**
6. **I**
7. **E**
8. **B**
9. **D**
10. **J**
11. **F**
12. **C**

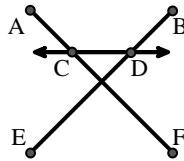
A.



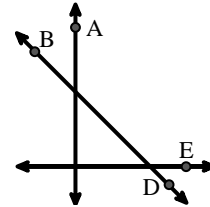
B.



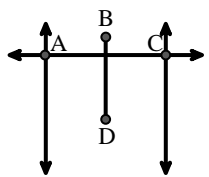
C.



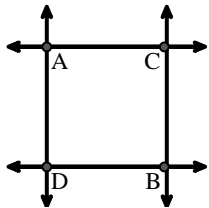
D.



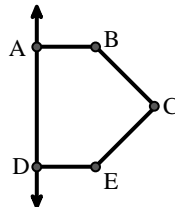
E.



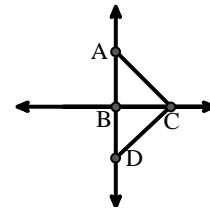
F.



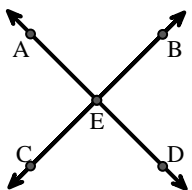
G.



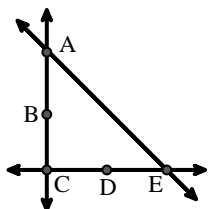
H.



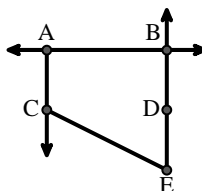
I.



J.



K.



L.

