

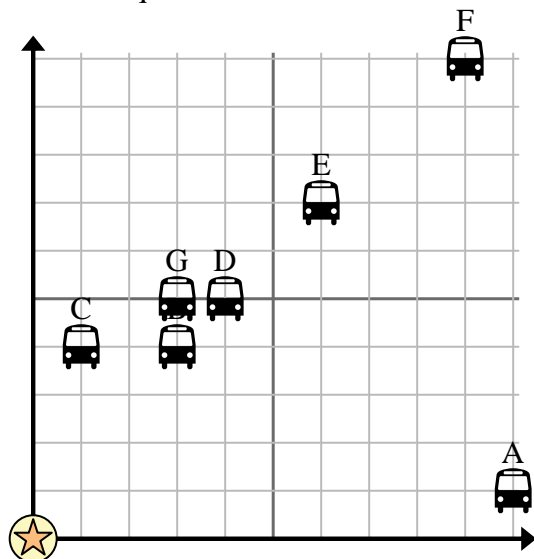


Use the grid to solve each problem.

= Bus Stop

= School

= 1 Square Block



- 1) The school wanted to add a new bus stop, but wanted to make sure it was at least 2 blocks east and 9 blocks north would that spot fit their requirement?
- 2) Which bus stop is closest to the school?
- 3) Which bus stop is furthest from the school?
- 4) Which bus stop is further north? Stop B or stop F?
- 5) Which bus stop is 9 blocks east and 10 blocks north from the school?

**Answers**

1. \_\_\_\_\_
2. \_\_\_\_\_
3. \_\_\_\_\_
4. \_\_\_\_\_
5. \_\_\_\_\_
6. \_\_\_\_\_
7. \_\_\_\_\_
8. \_\_\_\_\_
9. \_\_\_\_\_
10. \_\_\_\_\_

6) Adam wanted to plant a new tree, but wanted to make sure it was at least 2 yards from a pre-existing tree. Should he plant a tree 4 yards east and 2 yards north of his house?

= Tree

= House

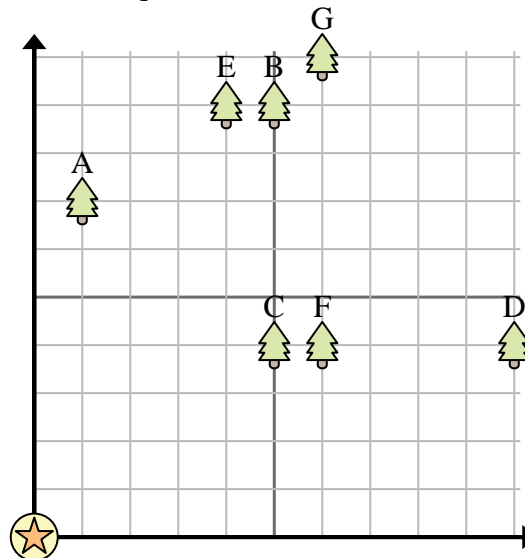
= 1 Square Yard

7) Which tree is closest to the house?

8) Which tree is furthest from the house?

9) Which tree is further west? Tree B or tree G?

10) If you were to go 6 yards east and 10 yards north from the house which tree would you end up at?



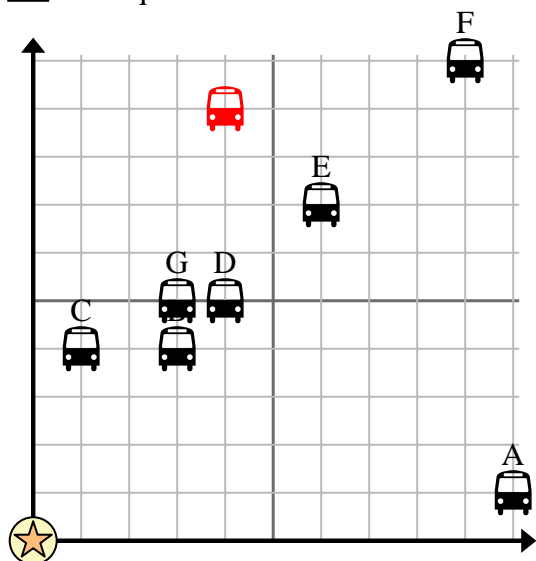


Use the grid to solve each problem.

= Bus Stop

= School

= 1 Square Block



- 1) The school wanted to add a new bus stop, but wanted to make sure it was at least 2 blocks east and 9 blocks north would that spot fit their requirement?
- 2) Which bus stop is closest to the school?
- 3) Which bus stop is furthest from the school?
- 4) Which bus stop is further north? Stop B or stop F?
- 5) Which bus stop is 9 blocks east and 10 blocks north from the school?

Answers

1. yes
2. C
3. F
4. F
5. F
6. yes
7. C
8. G
9. B
10. G

- 6) Adam wanted to plant a new tree, but wanted to make sure it was at least 2 yards from a pre-existing tree. Should he plant a tree 4 yards east and 2 yards north of his house?

= Tree

= House

= 1 Square Yard

- 7) Which tree is closest to the house?
- 8) Which tree is furthest from the house?
- 9) Which tree is further west? Tree B or tree G?
- 10) If you were to go 6 yards east and 10 yards north from the house which tree would you end up at?

