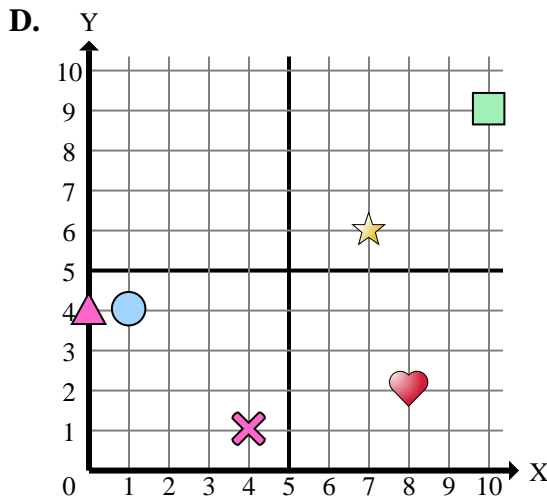
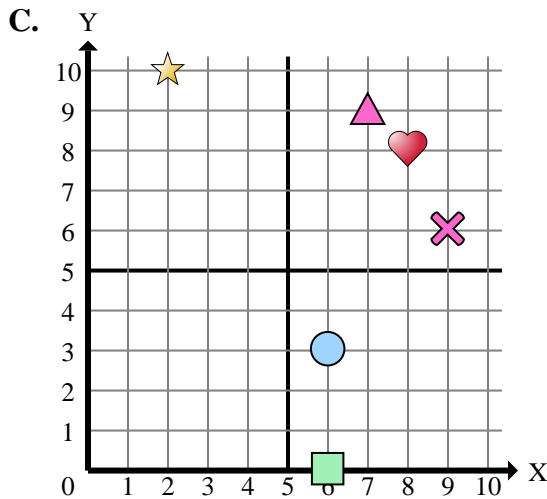
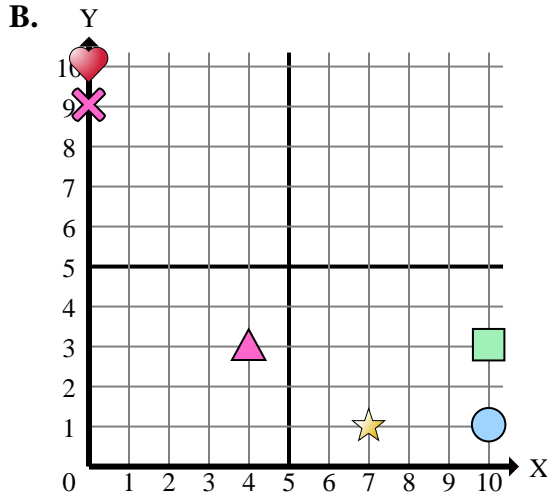
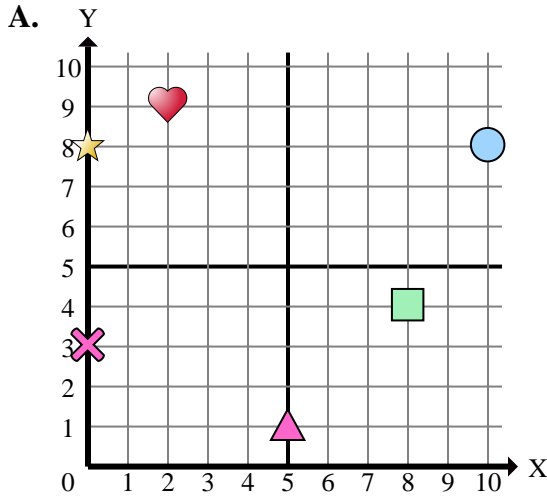




Determine which coordinate plane answers each question.



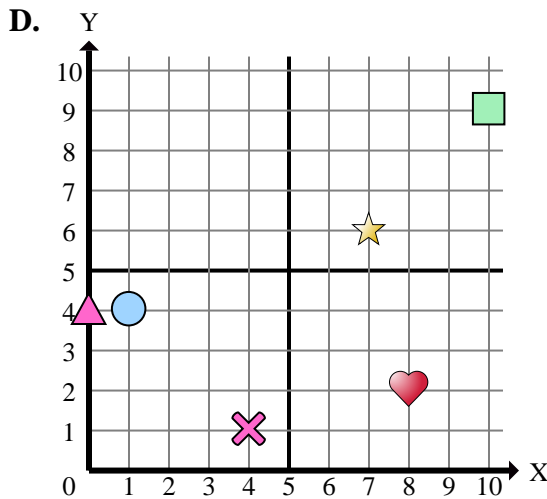
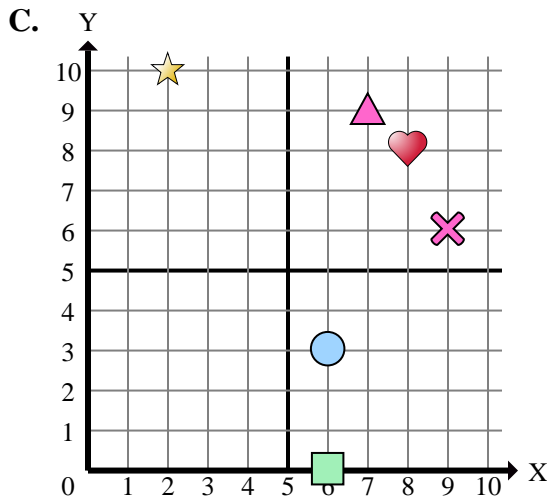
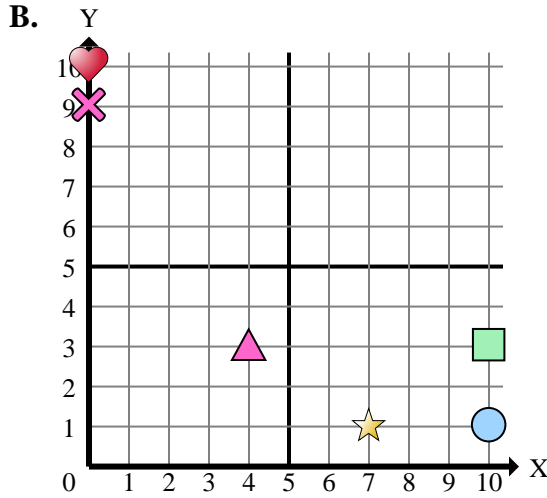
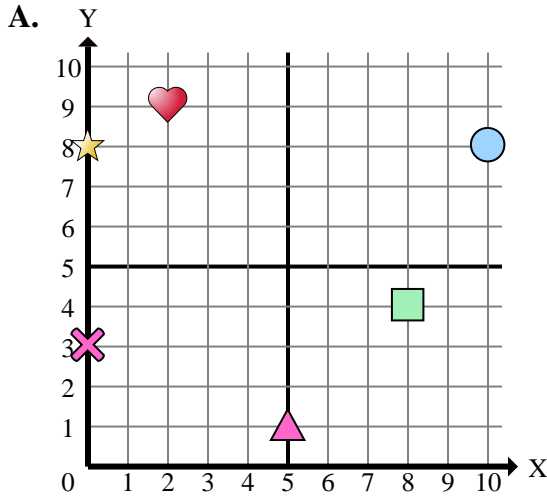
Answers

1. \_\_\_\_\_
2. \_\_\_\_\_
3. \_\_\_\_\_
4. \_\_\_\_\_
5. \_\_\_\_\_
6. \_\_\_\_\_
7. \_\_\_\_\_
8. \_\_\_\_\_
9. \_\_\_\_\_
10. \_\_\_\_\_
11. \_\_\_\_\_
12. \_\_\_\_\_
13. \_\_\_\_\_
14. \_\_\_\_\_
15. \_\_\_\_\_

- 1) Which coordinate plane has a shape at (7 , 6)?
- 2) Which coordinate plane has a shape at (8 , 4)?
- 3) Which coordinate plane has a shape at (0 , 10)?
- 4) Which coordinate plane has a shape at (6 , 3)?
- 5) Which coordinate plane has a shape at (2 , 9)?
- 6) Which coordinate plane has a shape at (8 , 2)?
- 7) Which coordinate plane has a shape at (0 , 4)?
- 8) Which coordinate plane has a shape at (1 , 4)?
- 9) Which coordinate plane has a shape at (0 , 8)?
- 10) Which coordinate plane has a shape at (4 , 3)?
- 11) Which coordinate plane has a shape at (0 , 3)?
- 12) Which coordinate plane has a shape at (6 , 0)?
- 13) Which coordinate plane has a shape at (7 , 1)?
- 14) Which coordinate plane has a shape at (2 , 10)?
- 15) Which coordinate plane has a shape at (10 , 9)?



Determine which coordinate plane answers each question.



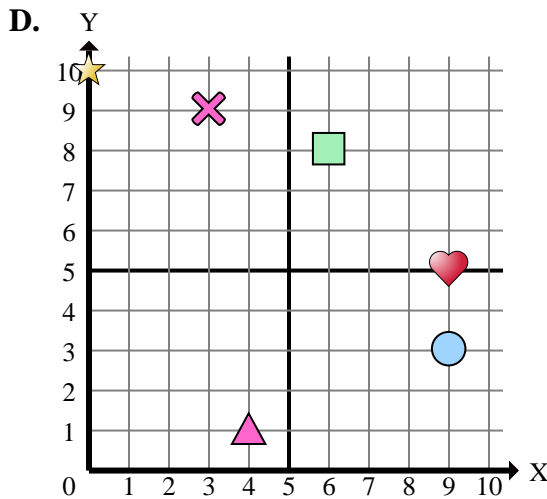
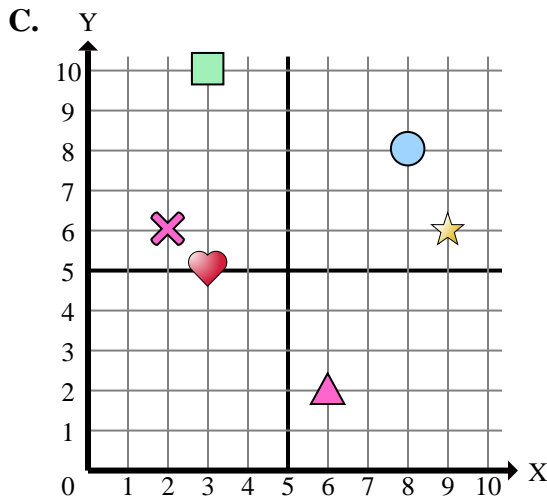
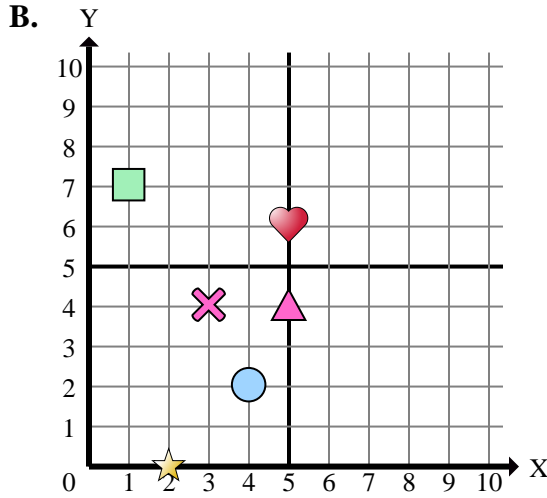
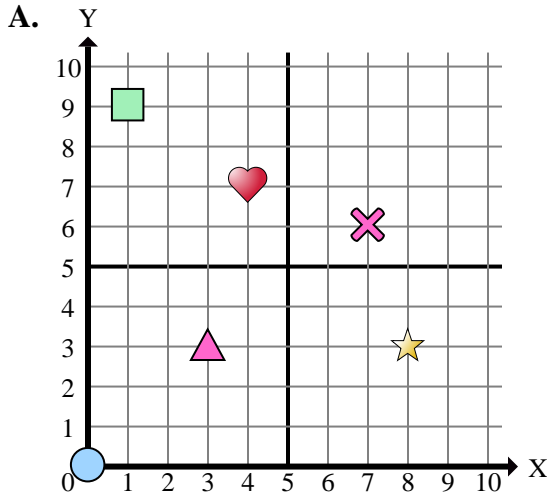
- 1) Which coordinate plane has a shape at (7 , 6)?
- 2) Which coordinate plane has a shape at (8 , 4)?
- 3) Which coordinate plane has a shape at (0 , 10)?
- 4) Which coordinate plane has a shape at (6 , 3)?
- 5) Which coordinate plane has a shape at (2 , 9)?
- 6) Which coordinate plane has a shape at (8 , 2)?
- 7) Which coordinate plane has a shape at (0 , 4)?
- 8) Which coordinate plane has a shape at (1 , 4)?
- 9) Which coordinate plane has a shape at (0 , 8)?
- 10) Which coordinate plane has a shape at (4 , 3)?
- 11) Which coordinate plane has a shape at (0 , 3)?
- 12) Which coordinate plane has a shape at (6 , 0)?
- 13) Which coordinate plane has a shape at (7 , 1)?
- 14) Which coordinate plane has a shape at (2 , 10)?
- 15) Which coordinate plane has a shape at (10 , 9)?

Answers

1.     **D**
2.     **A**
3.     **B**
4.     **C**
5.     **A**
6.     **D**
7.     **D**
8.     **D**
9.     **A**
10.     **B**
11.     **A**
12.     **C**
13.     **B**
14.     **C**
15.     **D**



Determine which coordinate plane answers each question.



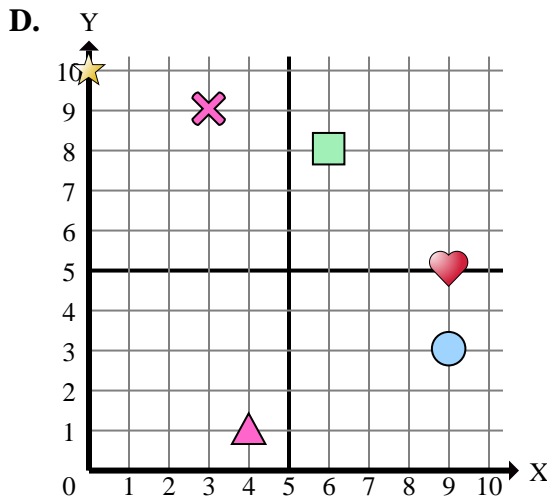
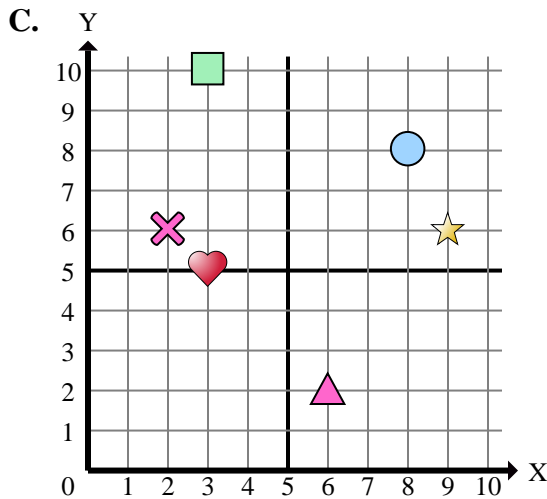
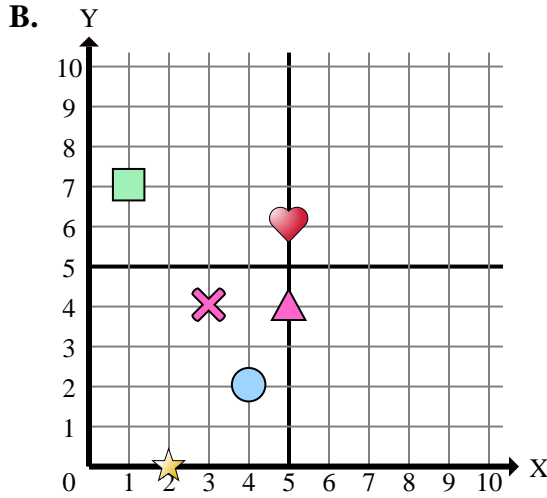
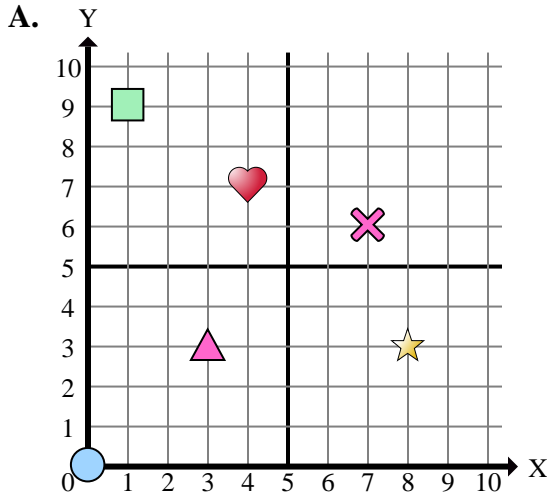
Answers

1. \_\_\_\_\_
2. \_\_\_\_\_
3. \_\_\_\_\_
4. \_\_\_\_\_
5. \_\_\_\_\_
6. \_\_\_\_\_
7. \_\_\_\_\_
8. \_\_\_\_\_
9. \_\_\_\_\_
10. \_\_\_\_\_
11. \_\_\_\_\_
12. \_\_\_\_\_
13. \_\_\_\_\_
14. \_\_\_\_\_
15. \_\_\_\_\_

- 1) Which coordinate plane has a shape at (5 , 4)?
- 2) Which coordinate plane has a shape at (3 , 10)?
- 3) Which coordinate plane has a shape at (2 , 0)?
- 4) Which coordinate plane has a shape at (8 , 8)?
- 5) Which coordinate plane has a shape at (9 , 6)?
- 6) Which coordinate plane has a shape at (0 , 10)?
- 7) Which coordinate plane has a shape at (3 , 4)?
- 8) Which coordinate plane has a shape at (3 , 5)?
- 9) Which coordinate plane has a shape at (7 , 6)?
- 10) Which coordinate plane has a shape at (4 , 7)?
- 11) Which coordinate plane has a shape at (6 , 8)?
- 12) Which coordinate plane has a shape at (3 , 3)?
- 13) Which coordinate plane has a shape at (4 , 1)?
- 14) Which coordinate plane has a shape at (6 , 2)?
- 15) Which coordinate plane has a shape at (0 , 0)?



Determine which coordinate plane answers each question.



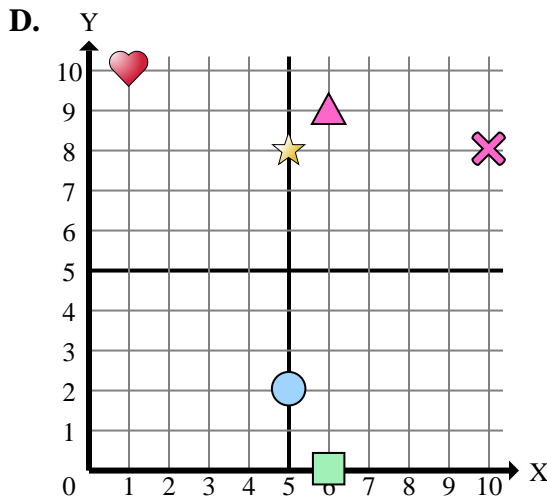
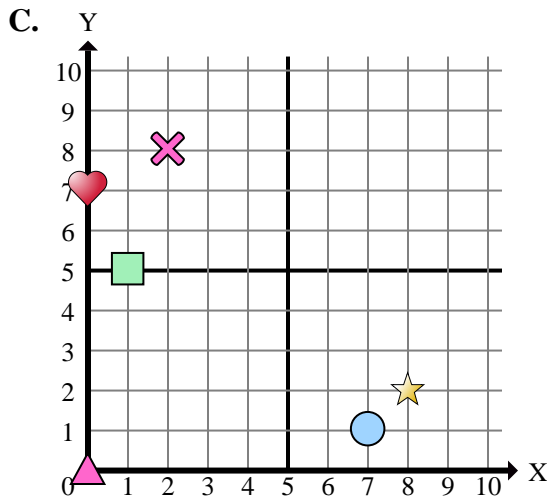
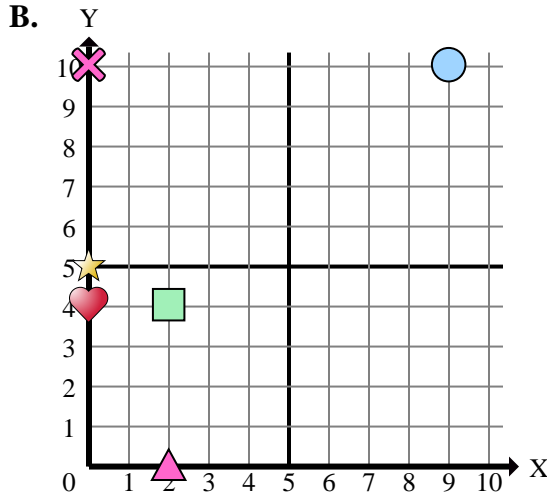
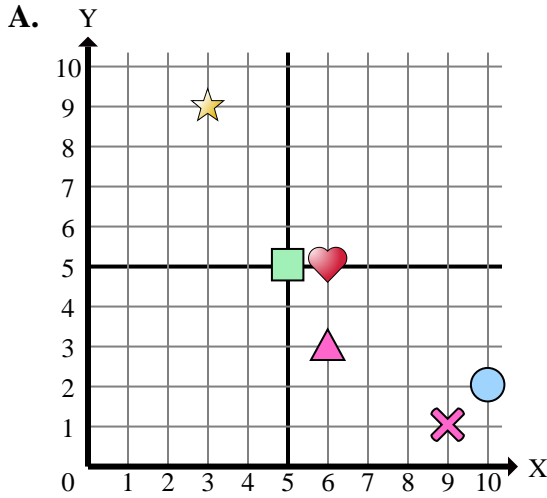
- 1) Which coordinate plane has a shape at (5 , 4)?
- 2) Which coordinate plane has a shape at (3 , 10)?
- 3) Which coordinate plane has a shape at (2 , 0)?
- 4) Which coordinate plane has a shape at (8 , 8)?
- 5) Which coordinate plane has a shape at (9 , 6)?
- 6) Which coordinate plane has a shape at (0 , 10)?
- 7) Which coordinate plane has a shape at (3 , 4)?
- 8) Which coordinate plane has a shape at (3 , 5)?
- 9) Which coordinate plane has a shape at (7 , 6)?
- 10) Which coordinate plane has a shape at (4 , 7)?
- 11) Which coordinate plane has a shape at (6 , 8)?
- 12) Which coordinate plane has a shape at (3 , 3)?
- 13) Which coordinate plane has a shape at (4 , 1)?
- 14) Which coordinate plane has a shape at (6 , 2)?
- 15) Which coordinate plane has a shape at (0 , 0)?

Answers

1.     **B**
2.     **C**
3.     **B**
4.     **C**
5.     **C**
6.     **D**
7.     **B**
8.     **C**
9.     **A**
10.     **A**
11.     **D**
12.     **A**
13.     **D**
14.     **C**
15.     **A**



Determine which coordinate plane answers each question.



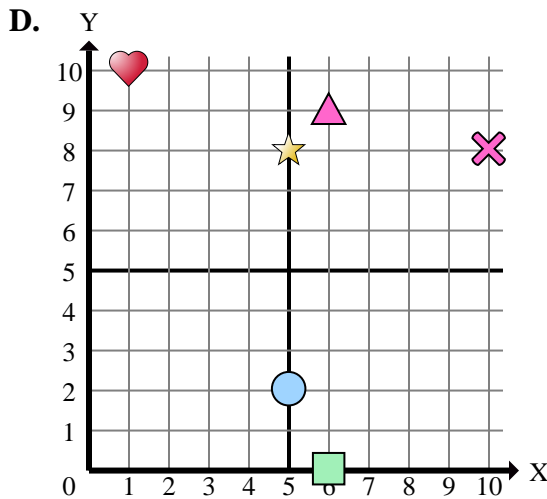
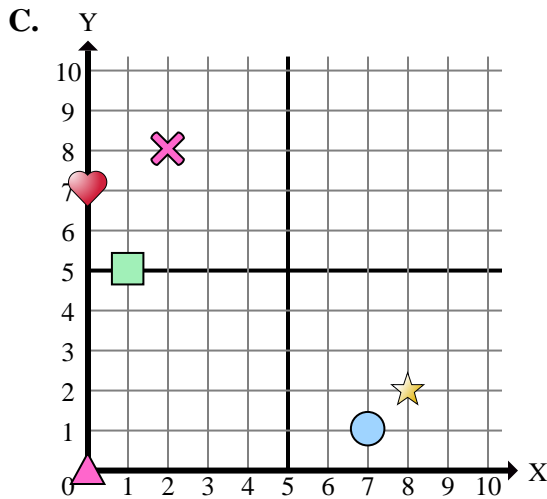
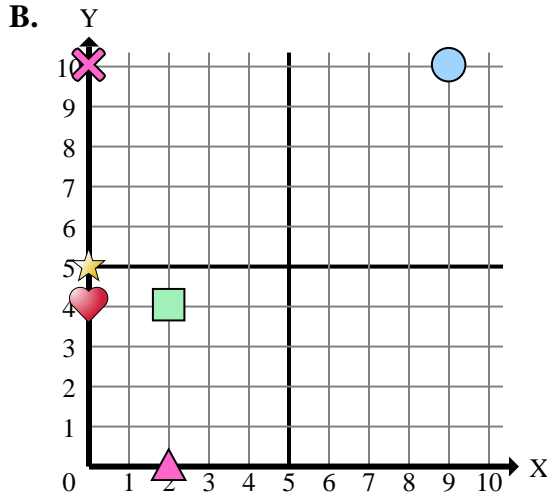
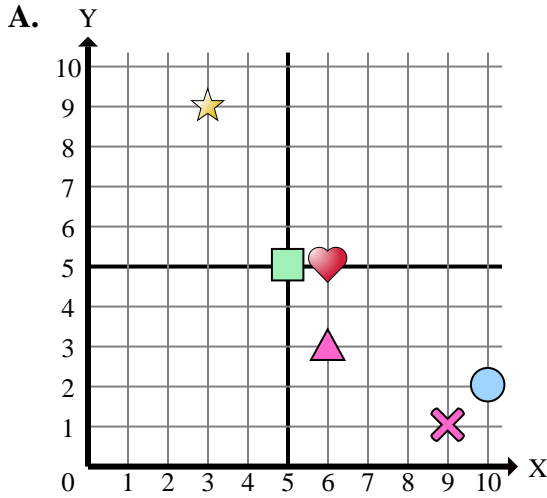
Answers

1. \_\_\_\_\_
2. \_\_\_\_\_
3. \_\_\_\_\_
4. \_\_\_\_\_
5. \_\_\_\_\_
6. \_\_\_\_\_
7. \_\_\_\_\_
8. \_\_\_\_\_
9. \_\_\_\_\_
10. \_\_\_\_\_
11. \_\_\_\_\_
12. \_\_\_\_\_
13. \_\_\_\_\_
14. \_\_\_\_\_
15. \_\_\_\_\_

- 1) Which coordinate plane has a shape at (0 , 5)?
- 2) Which coordinate plane has a shape at (2 , 0)?
- 3) Which coordinate plane has a shape at (5 , 5)?
- 4) Which coordinate plane has a shape at (3 , 9)?
- 5) Which coordinate plane has a shape at (0 , 7)?
- 6) Which coordinate plane has a shape at (6 , 9)?
- 7) Which coordinate plane has a shape at (6 , 5)?
- 8) Which coordinate plane has a shape at (8 , 2)?
- 9) Which coordinate plane has a shape at (5 , 8)?
- 10) Which coordinate plane has a shape at (9 , 10)?
- 11) Which coordinate plane has a shape at (0 , 0)?
- 12) Which coordinate plane has a shape at (2 , 4)?
- 13) Which coordinate plane has a shape at (0 , 10)?
- 14) Which coordinate plane has a shape at (6 , 0)?
- 15) Which coordinate plane has a shape at (10 , 8)?



Determine which coordinate plane answers each question.



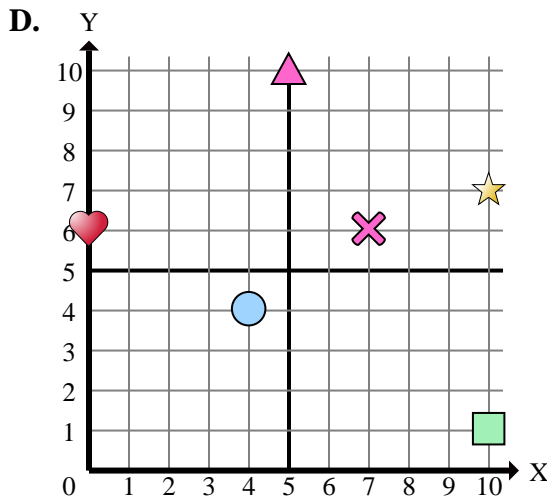
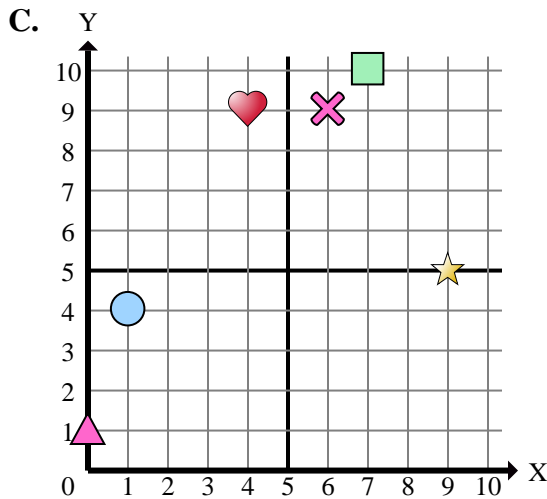
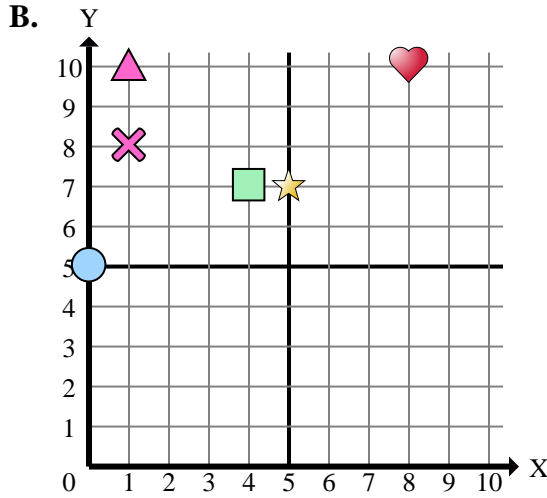
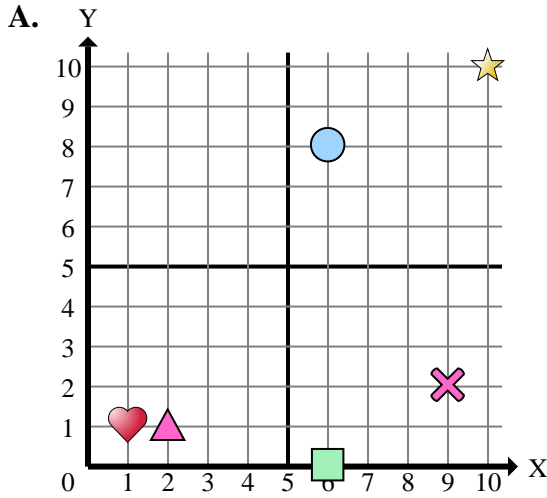
- 1) Which coordinate plane has a shape at (0 , 5)?
- 2) Which coordinate plane has a shape at (2 , 0)?
- 3) Which coordinate plane has a shape at (5 , 5)?
- 4) Which coordinate plane has a shape at (3 , 9)?
- 5) Which coordinate plane has a shape at (0 , 7)?
- 6) Which coordinate plane has a shape at (6 , 9)?
- 7) Which coordinate plane has a shape at (6 , 5)?
- 8) Which coordinate plane has a shape at (8 , 2)?
- 9) Which coordinate plane has a shape at (5 , 8)?
- 10) Which coordinate plane has a shape at (9 , 10)?
- 11) Which coordinate plane has a shape at (0 , 0)?
- 12) Which coordinate plane has a shape at (2 , 4)?
- 13) Which coordinate plane has a shape at (0 , 10)?
- 14) Which coordinate plane has a shape at (6 , 0)?
- 15) Which coordinate plane has a shape at (10 , 8)?

Answers

1.     **B**
2.     **B**
3.     **A**
4.     **A**
5.     **C**
6.     **D**
7.     **A**
8.     **C**
9.     **D**
10.     **B**
11.     **C**
12.     **B**
13.     **B**
14.     **D**
15.     **D**



Determine which coordinate plane answers each question.



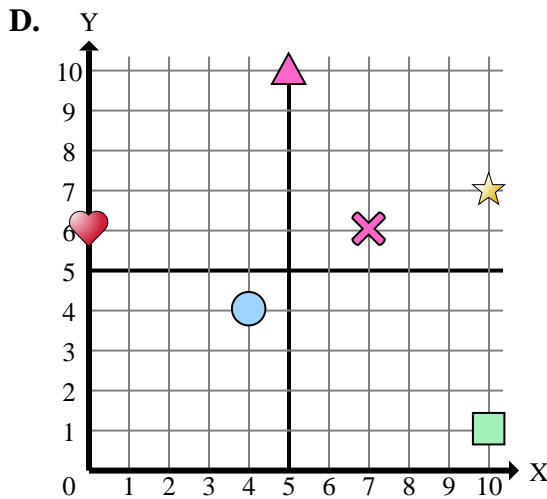
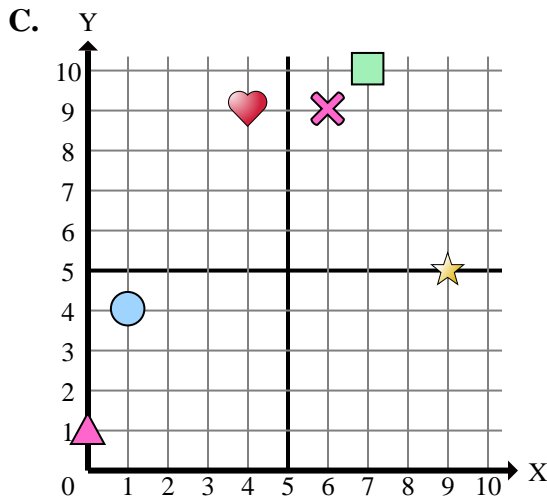
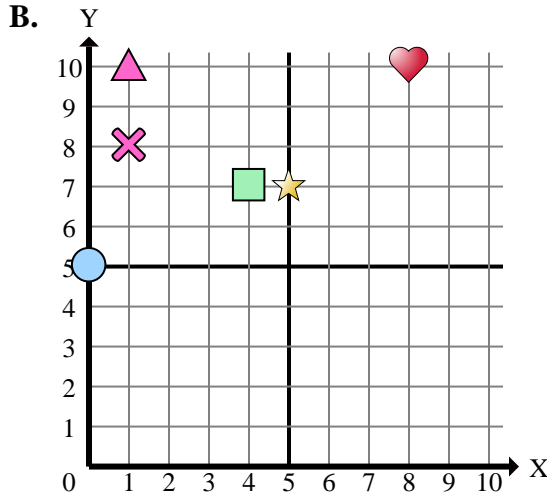
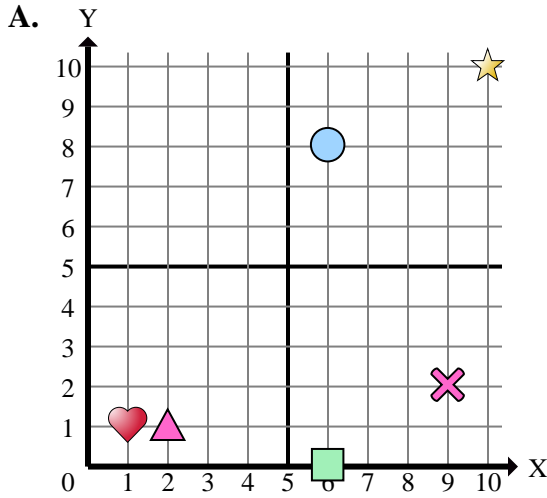
- 1) Which coordinate plane has a shape at (6 , 8)?
- 2) Which coordinate plane has a shape at (9 , 5)?
- 3) Which coordinate plane has a shape at (4 , 4)?
- 4) Which coordinate plane has a shape at (1 , 8)?
- 5) Which coordinate plane has a shape at (10 , 7)?
- 6) Which coordinate plane has a shape at (0 , 5)?
- 7) Which coordinate plane has a shape at (0 , 1)?
- 8) Which coordinate plane has a shape at (5 , 10)?
- 9) Which coordinate plane has a shape at (8 , 10)?
- 10) Which coordinate plane has a shape at (2 , 1)?
- 11) Which coordinate plane has a shape at (10 , 10)?
- 12) Which coordinate plane has a shape at (4 , 7)?
- 13) Which coordinate plane has a shape at (1 , 4)?
- 14) Which coordinate plane has a shape at (9 , 2)?
- 15) Which coordinate plane has a shape at (1 , 10)?

Answers

1. \_\_\_\_\_
2. \_\_\_\_\_
3. \_\_\_\_\_
4. \_\_\_\_\_
5. \_\_\_\_\_
6. \_\_\_\_\_
7. \_\_\_\_\_
8. \_\_\_\_\_
9. \_\_\_\_\_
10. \_\_\_\_\_
11. \_\_\_\_\_
12. \_\_\_\_\_
13. \_\_\_\_\_
14. \_\_\_\_\_
15. \_\_\_\_\_



Determine which coordinate plane answers each question.



- 1) Which coordinate plane has a shape at (6 , 8)?
- 2) Which coordinate plane has a shape at (9 , 5)?
- 3) Which coordinate plane has a shape at (4 , 4)?
- 4) Which coordinate plane has a shape at (1 , 8)?
- 5) Which coordinate plane has a shape at (10 , 7)?
- 6) Which coordinate plane has a shape at (0 , 5)?
- 7) Which coordinate plane has a shape at (0 , 1)?
- 8) Which coordinate plane has a shape at (5 , 10)?
- 9) Which coordinate plane has a shape at (8 , 10)?
- 10) Which coordinate plane has a shape at (2 , 1)?
- 11) Which coordinate plane has a shape at (10 , 10)?
- 12) Which coordinate plane has a shape at (4 , 7)?
- 13) Which coordinate plane has a shape at (1 , 4)?
- 14) Which coordinate plane has a shape at (9 , 2)?
- 15) Which coordinate plane has a shape at (1 , 10)?

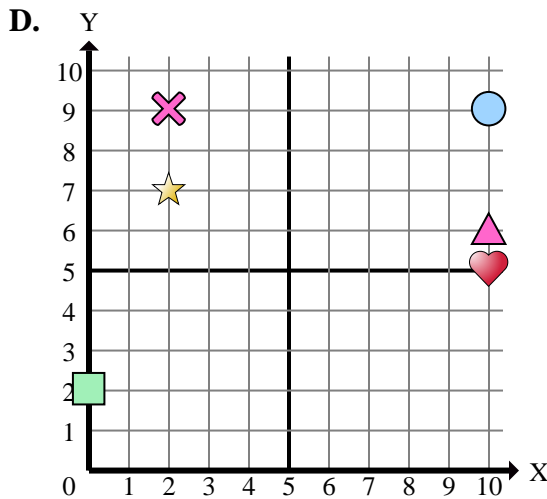
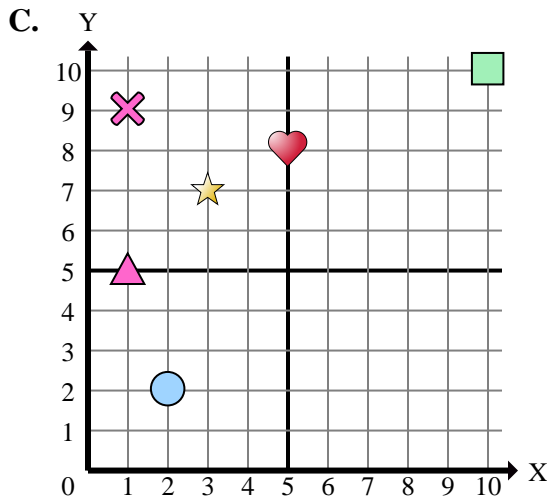
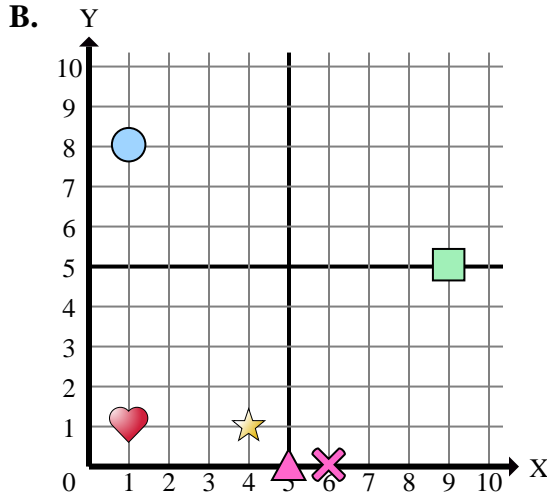
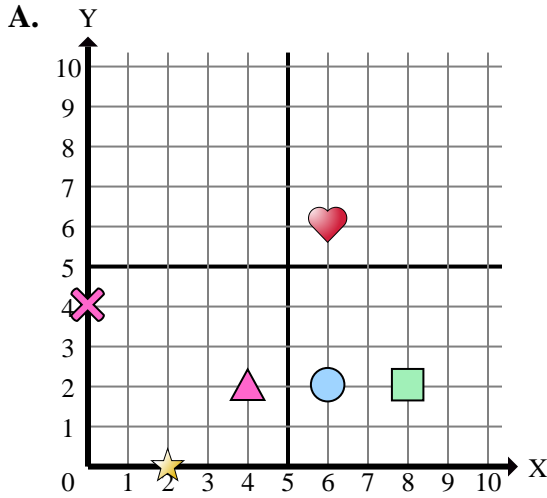
Answers

1.     **A**
2.     **C**
3.     **D**
4.     **B**
5.     **D**
6.     **B**
7.     **C**
8.     **D**
9.     **B**
10.     **A**
11.     **A**
12.     **B**
13.     **C**
14.     **A**
15.     **B**





Determine which coordinate plane answers each question.



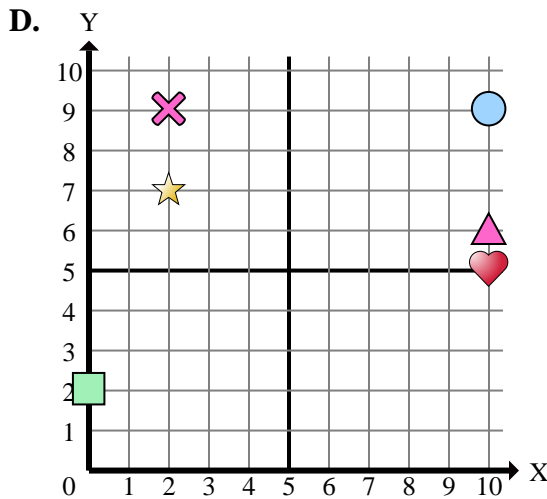
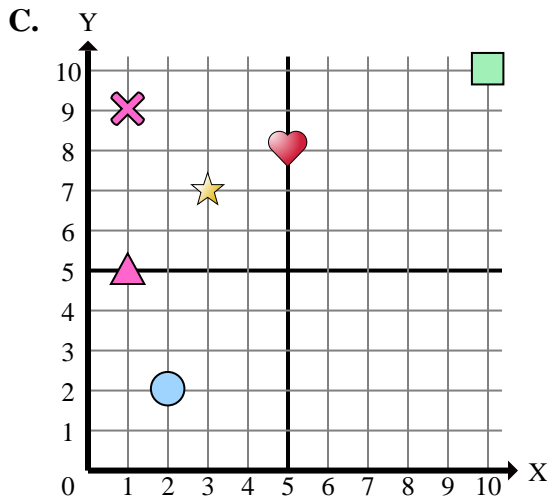
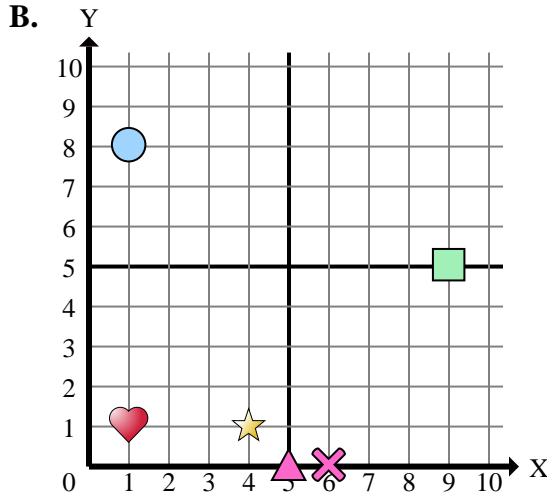
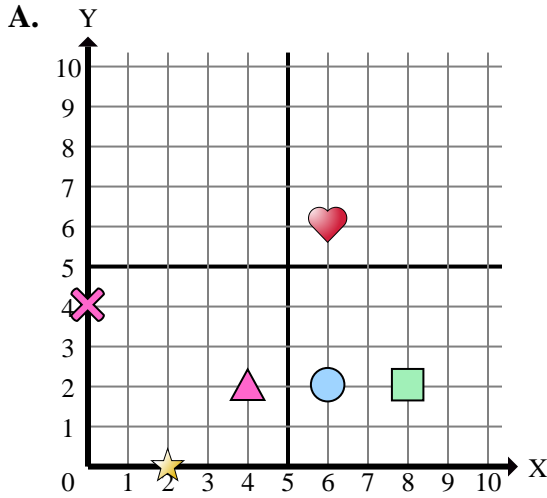
- Which coordinate plane has a shape at (1 , 8)?
- Which coordinate plane has a shape at (0 , 4)?
- Which coordinate plane has a shape at (1 , 1)?
- Which coordinate plane has a shape at (6 , 0)?
- Which coordinate plane has a shape at (10 , 5)?
- Which coordinate plane has a shape at (9 , 5)?
- Which coordinate plane has a shape at (2 , 0)?
- Which coordinate plane has a shape at (6 , 2)?
- Which coordinate plane has a shape at (4 , 2)?
- Which coordinate plane has a shape at (10 , 10)?
- Which coordinate plane has a shape at (8 , 2)?
- Which coordinate plane has a shape at (2 , 7)?
- Which coordinate plane has a shape at (1 , 5)?
- Which coordinate plane has a shape at (6 , 6)?
- Which coordinate plane has a shape at (3 , 7)?

Answers

- \_\_\_\_\_
- \_\_\_\_\_
- \_\_\_\_\_
- \_\_\_\_\_
- \_\_\_\_\_
- \_\_\_\_\_
- \_\_\_\_\_
- \_\_\_\_\_
- \_\_\_\_\_
- \_\_\_\_\_
- \_\_\_\_\_
- \_\_\_\_\_
- \_\_\_\_\_
- \_\_\_\_\_
- \_\_\_\_\_



Determine which coordinate plane answers each question.



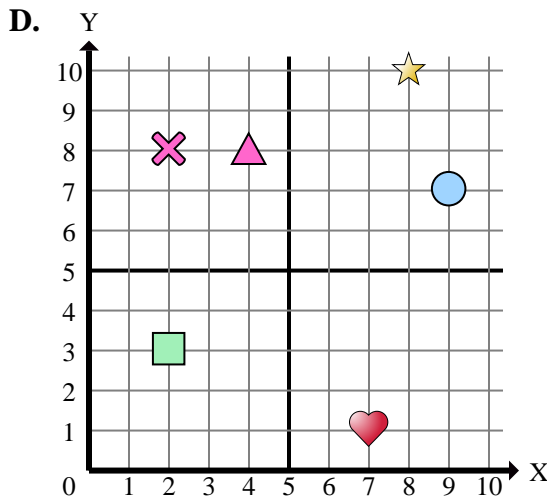
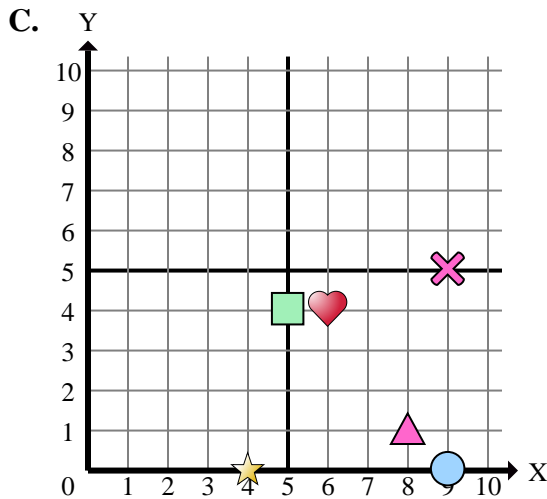
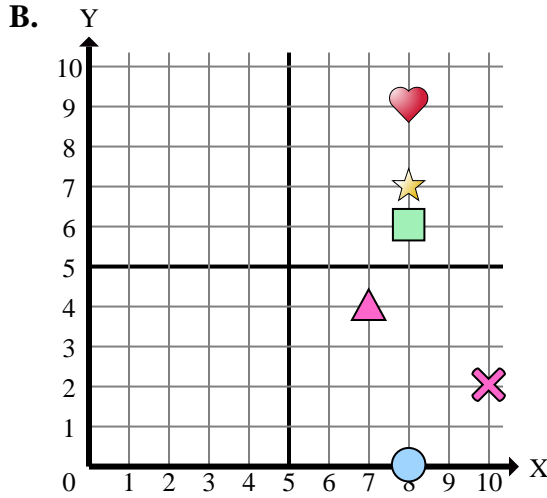
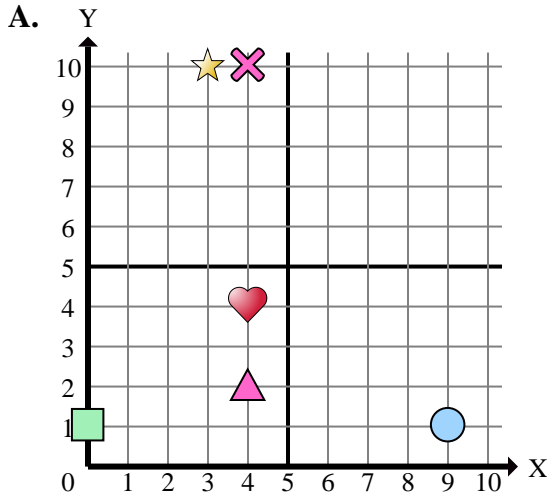
- 1) Which coordinate plane has a shape at (1 , 8)?
- 2) Which coordinate plane has a shape at (0 , 4)?
- 3) Which coordinate plane has a shape at (1 , 1)?
- 4) Which coordinate plane has a shape at (6 , 0)?
- 5) Which coordinate plane has a shape at (10 , 5)?
- 6) Which coordinate plane has a shape at (9 , 5)?
- 7) Which coordinate plane has a shape at (2 , 0)?
- 8) Which coordinate plane has a shape at (6 , 2)?
- 9) Which coordinate plane has a shape at (4 , 2)?
- 10) Which coordinate plane has a shape at (10 , 10)?
- 11) Which coordinate plane has a shape at (8 , 2)?
- 12) Which coordinate plane has a shape at (2 , 7)?
- 13) Which coordinate plane has a shape at (1 , 5)?
- 14) Which coordinate plane has a shape at (6 , 6)?
- 15) Which coordinate plane has a shape at (3 , 7)?

Answers

1.     **B**
2.     **A**
3.     **B**
4.     **B**
5.     **D**
6.     **B**
7.     **A**
8.     **A**
9.     **A**
10.     **C**
11.     **A**
12.     **D**
13.     **C**
14.     **A**
15.     **C**



Determine which coordinate plane answers each question.



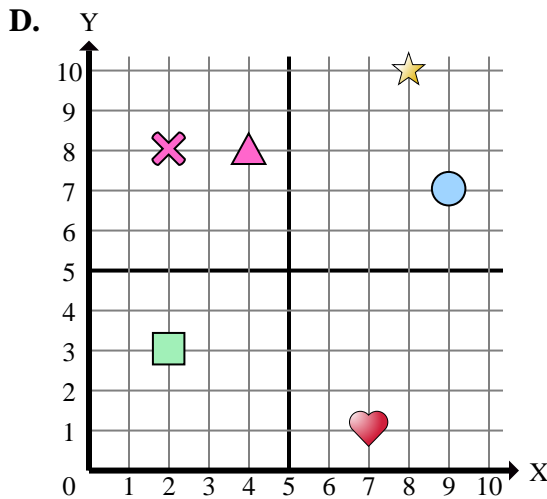
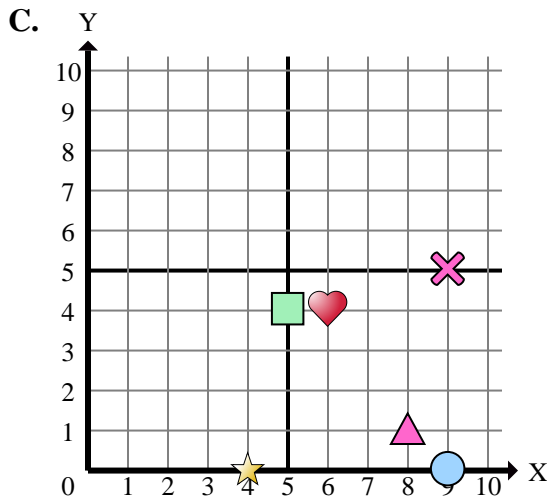
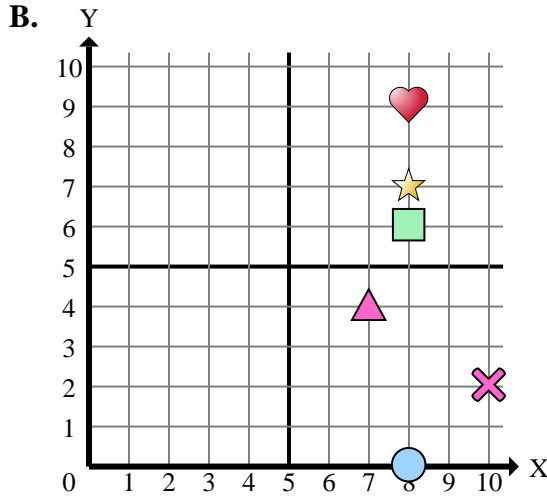
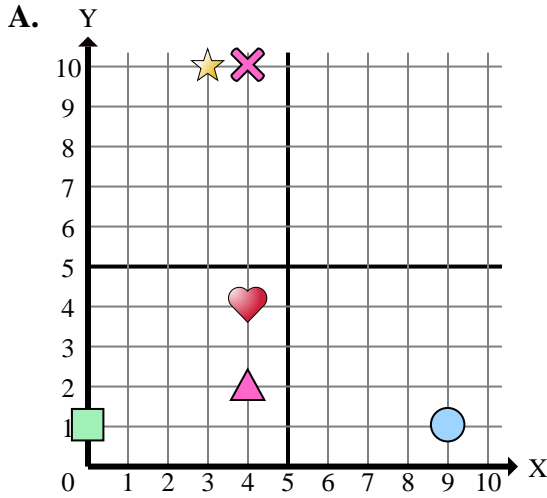
Answers

1. \_\_\_\_\_
2. \_\_\_\_\_
3. \_\_\_\_\_
4. \_\_\_\_\_
5. \_\_\_\_\_
6. \_\_\_\_\_
7. \_\_\_\_\_
8. \_\_\_\_\_
9. \_\_\_\_\_
10. \_\_\_\_\_
11. \_\_\_\_\_
12. \_\_\_\_\_
13. \_\_\_\_\_
14. \_\_\_\_\_
15. \_\_\_\_\_

- 1) Which coordinate plane has a shape at (4 , 0)?
- 2) Which coordinate plane has a shape at (3 , 10)?
- 3) Which coordinate plane has a shape at (4 , 8)?
- 4) Which coordinate plane has a shape at (4 , 4)?
- 5) Which coordinate plane has a shape at (10 , 2)?
- 6) Which coordinate plane has a shape at (8 , 6)?
- 7) Which coordinate plane has a shape at (4 , 2)?
- 8) Which coordinate plane has a shape at (4 , 10)?
- 9) Which coordinate plane has a shape at (8 , 0)?
- 10) Which coordinate plane has a shape at (8 , 1)?
- 11) Which coordinate plane has a shape at (2 , 3)?
- 12) Which coordinate plane has a shape at (8 , 10)?
- 13) Which coordinate plane has a shape at (6 , 4)?
- 14) Which coordinate plane has a shape at (9 , 0)?
- 15) Which coordinate plane has a shape at (9 , 7)?



Determine which coordinate plane answers each question.



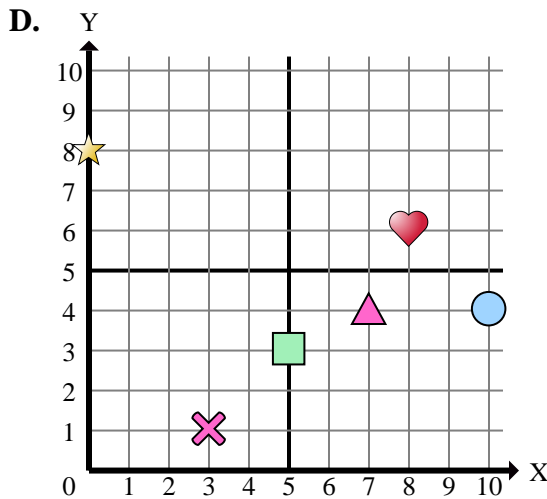
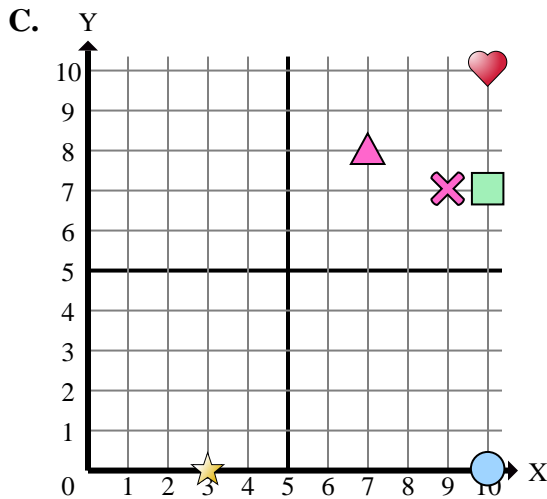
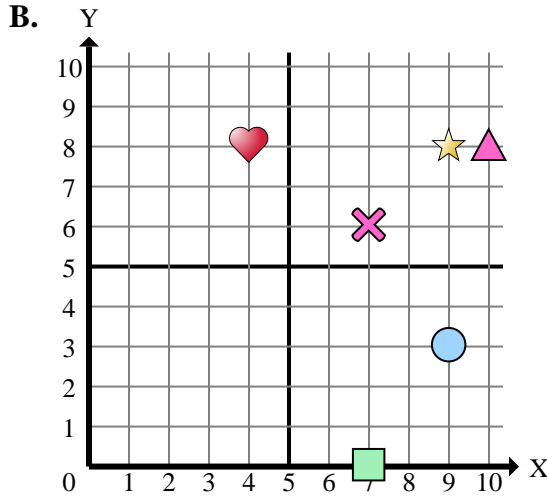
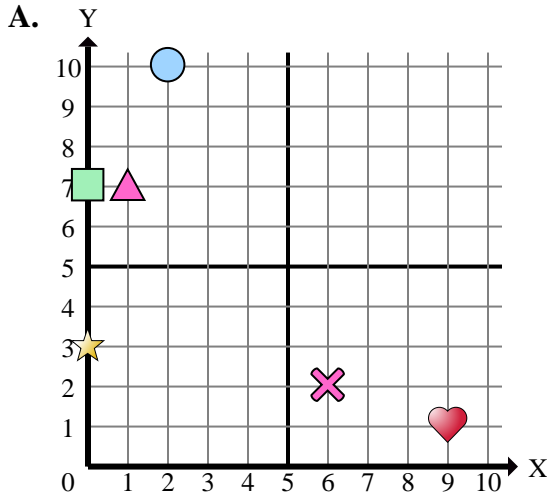
- 1) Which coordinate plane has a shape at (4 , 0)?
- 2) Which coordinate plane has a shape at (3 , 10)?
- 3) Which coordinate plane has a shape at (4 , 8)?
- 4) Which coordinate plane has a shape at (4 , 4)?
- 5) Which coordinate plane has a shape at (10 , 2)?
- 6) Which coordinate plane has a shape at (8 , 6)?
- 7) Which coordinate plane has a shape at (4 , 2)?
- 8) Which coordinate plane has a shape at (4 , 10)?
- 9) Which coordinate plane has a shape at (8 , 0)?
- 10) Which coordinate plane has a shape at (8 , 1)?
- 11) Which coordinate plane has a shape at (2 , 3)?
- 12) Which coordinate plane has a shape at (8 , 10)?
- 13) Which coordinate plane has a shape at (6 , 4)?
- 14) Which coordinate plane has a shape at (9 , 0)?
- 15) Which coordinate plane has a shape at (9 , 7)?

Answers

1.     **C**
2.     **A**
3.     **D**
4.     **A**
5.     **B**
6.     **B**
7.     **A**
8.     **A**
9.     **B**
10.     **C**
11.     **D**
12.     **D**
13.     **C**
14.     **C**
15.     **D**



Determine which coordinate plane answers each question.



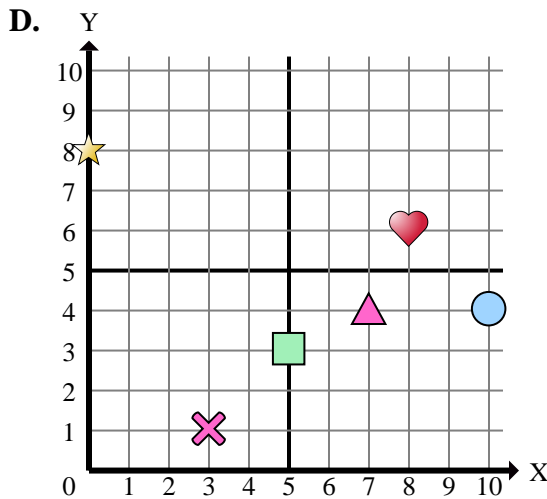
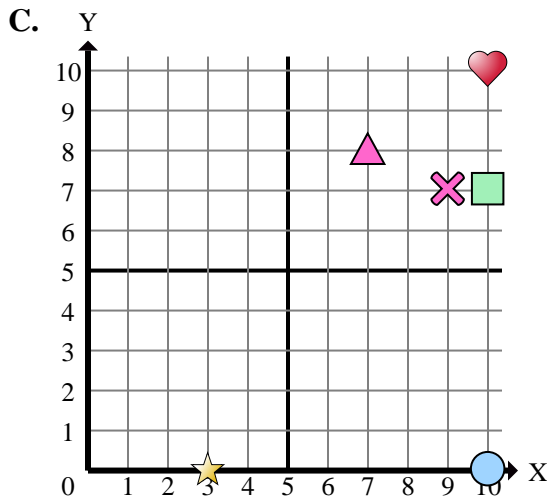
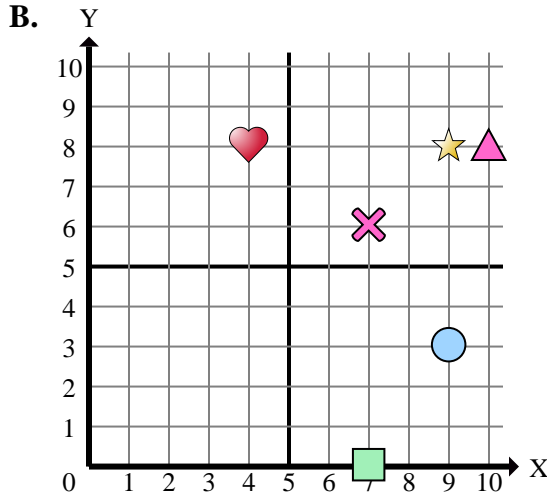
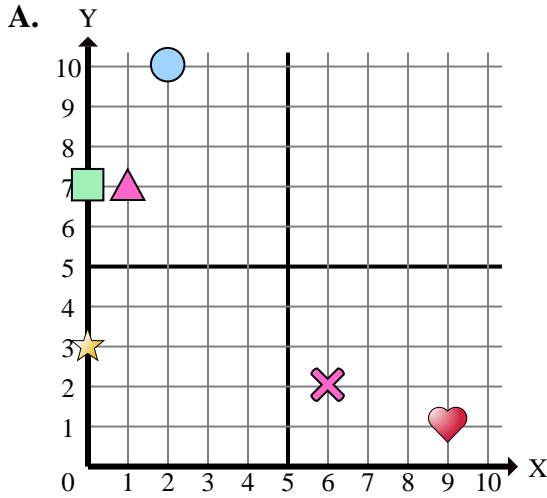
- 1) Which coordinate plane has a shape at (9 , 8)?
- 2) Which coordinate plane has a shape at (0 , 7)?
- 3) Which coordinate plane has a shape at (3 , 0)?
- 4) Which coordinate plane has a shape at (2 , 10)?
- 5) Which coordinate plane has a shape at (9 , 3)?
- 6) Which coordinate plane has a shape at (6 , 2)?
- 7) Which coordinate plane has a shape at (10 , 0)?
- 8) Which coordinate plane has a shape at (0 , 8)?
- 9) Which coordinate plane has a shape at (10 , 10)?
- 10) Which coordinate plane has a shape at (1 , 7)?
- 11) Which coordinate plane has a shape at (10 , 8)?
- 12) Which coordinate plane has a shape at (10 , 7)?
- 13) Which coordinate plane has a shape at (0 , 3)?
- 14) Which coordinate plane has a shape at (7 , 0)?
- 15) Which coordinate plane has a shape at (4 , 8)?

Answers

1. \_\_\_\_\_
2. \_\_\_\_\_
3. \_\_\_\_\_
4. \_\_\_\_\_
5. \_\_\_\_\_
6. \_\_\_\_\_
7. \_\_\_\_\_
8. \_\_\_\_\_
9. \_\_\_\_\_
10. \_\_\_\_\_
11. \_\_\_\_\_
12. \_\_\_\_\_
13. \_\_\_\_\_
14. \_\_\_\_\_
15. \_\_\_\_\_



Determine which coordinate plane answers each question.



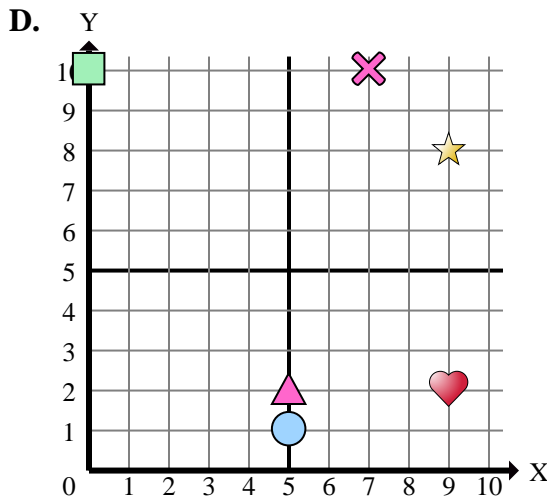
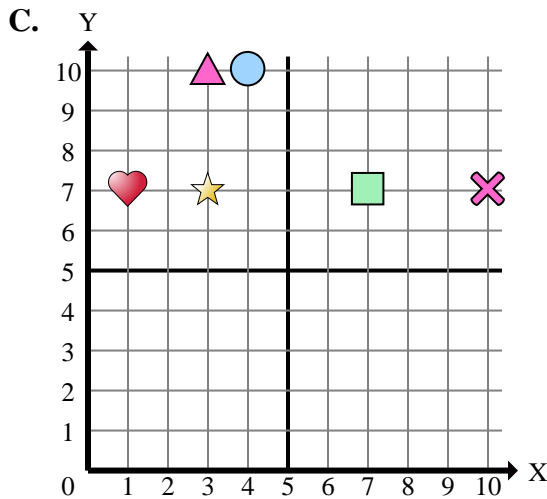
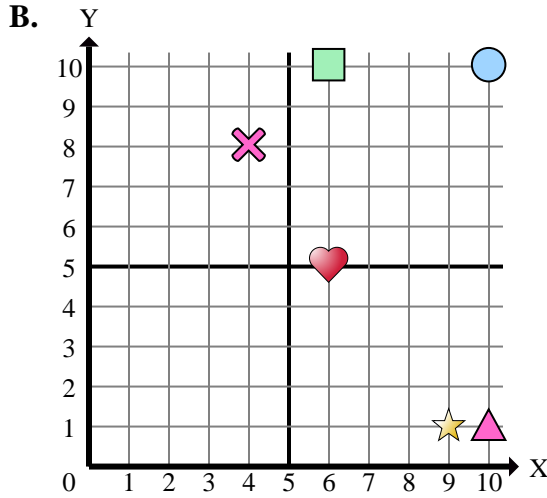
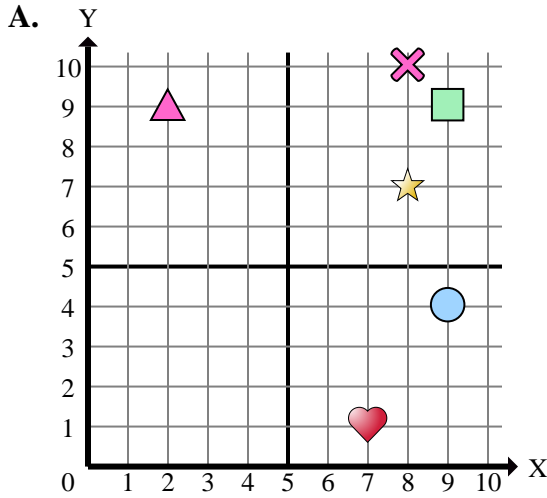
- 1) Which coordinate plane has a shape at (9 , 8)?
- 2) Which coordinate plane has a shape at (0 , 7)?
- 3) Which coordinate plane has a shape at (3 , 0)?
- 4) Which coordinate plane has a shape at (2 , 10)?
- 5) Which coordinate plane has a shape at (9 , 3)?
- 6) Which coordinate plane has a shape at (6 , 2)?
- 7) Which coordinate plane has a shape at (10 , 0)?
- 8) Which coordinate plane has a shape at (0 , 8)?
- 9) Which coordinate plane has a shape at (10 , 10)?
- 10) Which coordinate plane has a shape at (1 , 7)?
- 11) Which coordinate plane has a shape at (10 , 8)?
- 12) Which coordinate plane has a shape at (10 , 7)?
- 13) Which coordinate plane has a shape at (0 , 3)?
- 14) Which coordinate plane has a shape at (7 , 0)?
- 15) Which coordinate plane has a shape at (4 , 8)?

Answers

1.     **B**
2.     **A**
3.     **C**
4.     **A**
5.     **B**
6.     **A**
7.     **C**
8.     **D**
9.     **C**
10.     **A**
11.     **B**
12.     **C**
13.     **A**
14.     **B**
15.     **B**



Determine which coordinate plane answers each question.



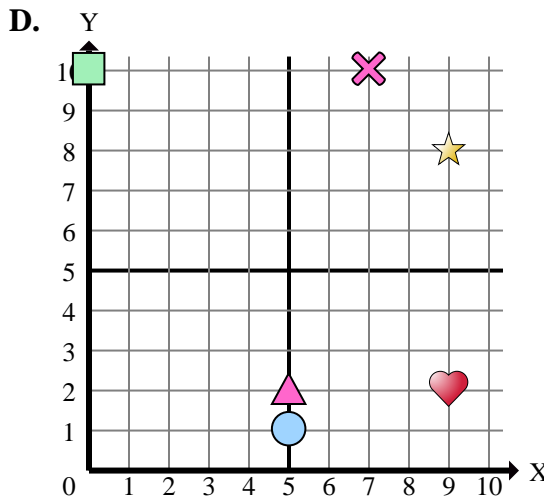
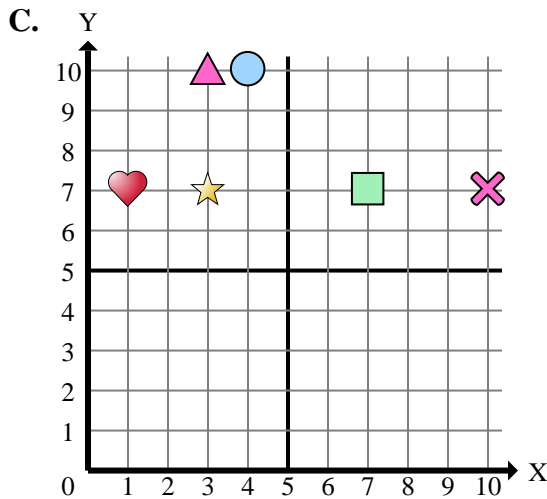
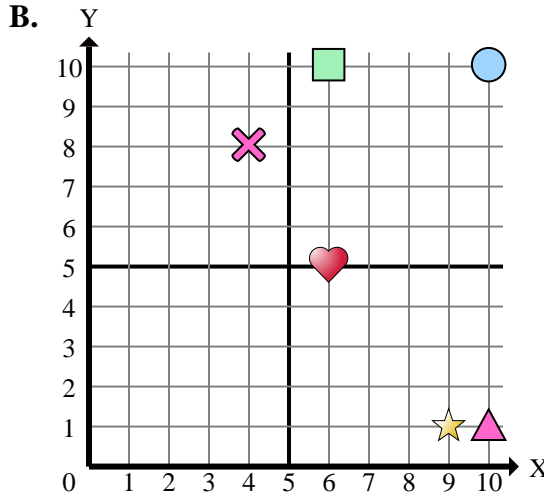
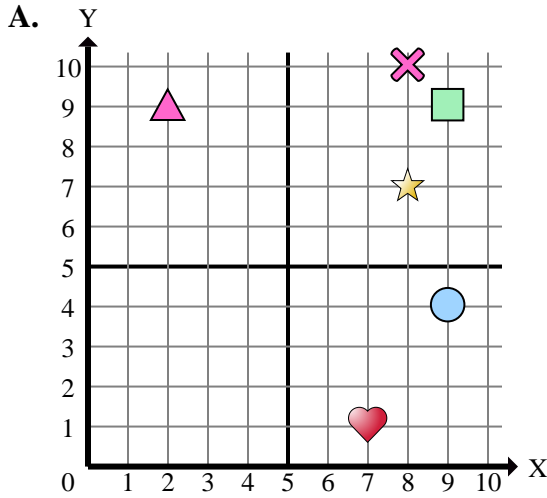
Answers

1. \_\_\_\_\_
2. \_\_\_\_\_
3. \_\_\_\_\_
4. \_\_\_\_\_
5. \_\_\_\_\_
6. \_\_\_\_\_
7. \_\_\_\_\_
8. \_\_\_\_\_
9. \_\_\_\_\_
10. \_\_\_\_\_
11. \_\_\_\_\_
12. \_\_\_\_\_
13. \_\_\_\_\_
14. \_\_\_\_\_
15. \_\_\_\_\_

- 1) Which coordinate plane has a shape at (9 , 2)?
- 2) Which coordinate plane has a shape at (10 , 7)?
- 3) Which coordinate plane has a shape at (7 , 7)?
- 4) Which coordinate plane has a shape at (9 , 4)?
- 5) Which coordinate plane has a shape at (6 , 10)?
- 6) Which coordinate plane has a shape at (2 , 9)?
- 7) Which coordinate plane has a shape at (3 , 7)?
- 8) Which coordinate plane has a shape at (7 , 10)?
- 9) Which coordinate plane has a shape at (9 , 9)?
- 10) Which coordinate plane has a shape at (6 , 5)?
- 11) Which coordinate plane has a shape at (5 , 2)?
- 12) Which coordinate plane has a shape at (8 , 10)?
- 13) Which coordinate plane has a shape at (10 , 1)?
- 14) Which coordinate plane has a shape at (5 , 1)?
- 15) Which coordinate plane has a shape at (0 , 10)?



Determine which coordinate plane answers each question.



- 1) Which coordinate plane has a shape at (9 , 2)?
- 2) Which coordinate plane has a shape at (10 , 7)?
- 3) Which coordinate plane has a shape at (7 , 7)?
- 4) Which coordinate plane has a shape at (9 , 4)?
- 5) Which coordinate plane has a shape at (6 , 10)?
- 6) Which coordinate plane has a shape at (2 , 9)?
- 7) Which coordinate plane has a shape at (3 , 7)?
- 8) Which coordinate plane has a shape at (7 , 10)?
- 9) Which coordinate plane has a shape at (9 , 9)?
- 10) Which coordinate plane has a shape at (6 , 5)?
- 11) Which coordinate plane has a shape at (5 , 2)?
- 12) Which coordinate plane has a shape at (8 , 10)?
- 13) Which coordinate plane has a shape at (10 , 1)?
- 14) Which coordinate plane has a shape at (5 , 1)?
- 15) Which coordinate plane has a shape at (0 , 10)?

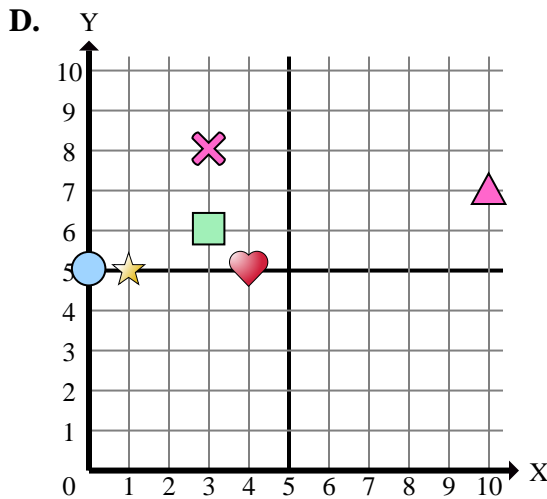
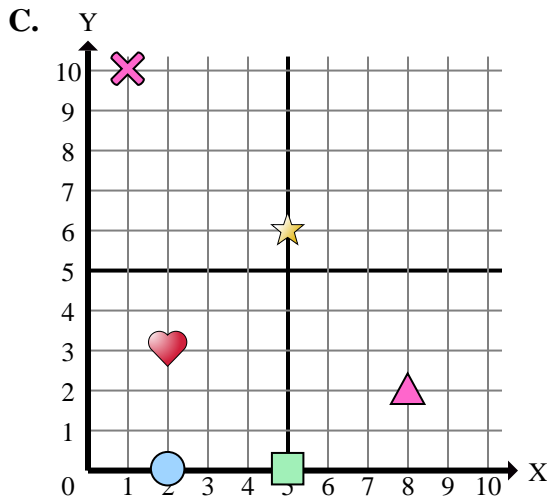
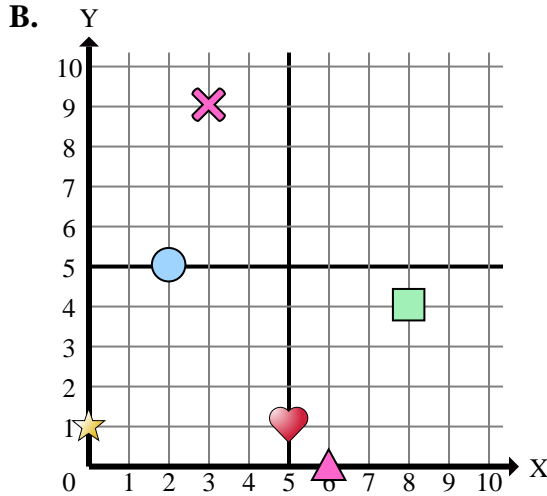
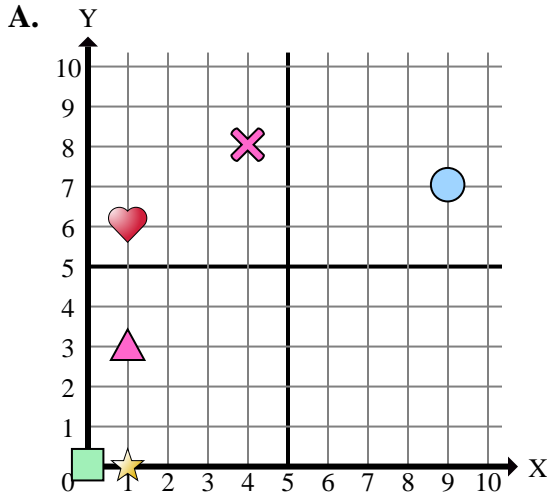
Answers

1.     **D**
2.     **C**
3.     **C**
4.     **A**
5.     **B**
6.     **A**
7.     **C**
8.     **D**
9.     **A**
10.     **B**
11.     **D**
12.     **A**
13.     **B**
14.     **D**
15.     **D**





Determine which coordinate plane answers each question.



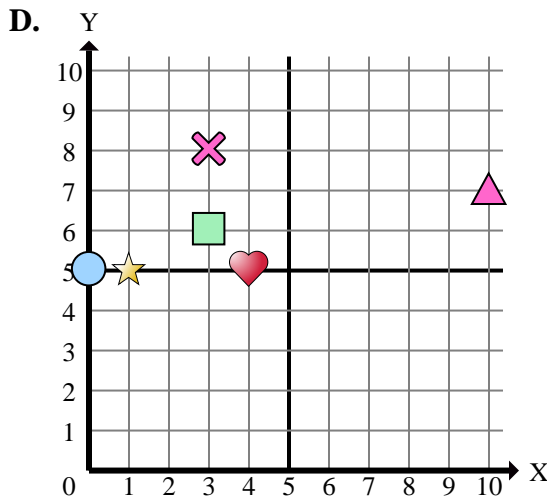
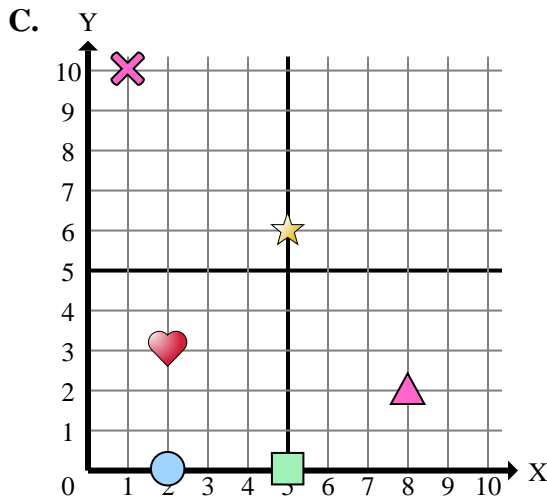
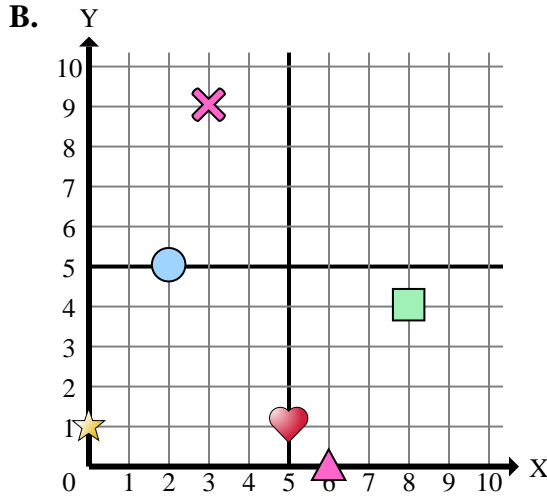
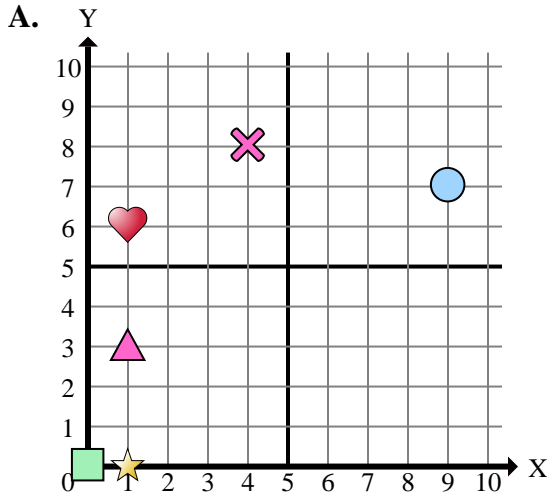
Answers

1. \_\_\_\_\_
2. \_\_\_\_\_
3. \_\_\_\_\_
4. \_\_\_\_\_
5. \_\_\_\_\_
6. \_\_\_\_\_
7. \_\_\_\_\_
8. \_\_\_\_\_
9. \_\_\_\_\_
10. \_\_\_\_\_
11. \_\_\_\_\_
12. \_\_\_\_\_
13. \_\_\_\_\_
14. \_\_\_\_\_
15. \_\_\_\_\_

- 1) Which coordinate plane has a shape at (0 , 1)?
- 2) Which coordinate plane has a shape at (3 , 9)?
- 3) Which coordinate plane has a shape at (8 , 4)?
- 4) Which coordinate plane has a shape at (8 , 2)?
- 5) Which coordinate plane has a shape at (10 , 7)?
- 6) Which coordinate plane has a shape at (4 , 5)?
- 7) Which coordinate plane has a shape at (1 , 0)?
- 8) Which coordinate plane has a shape at (5 , 1)?
- 9) Which coordinate plane has a shape at (4 , 8)?
- 10) Which coordinate plane has a shape at (3 , 6)?
- 11) Which coordinate plane has a shape at (9 , 7)?
- 12) Which coordinate plane has a shape at (2 , 3)?
- 13) Which coordinate plane has a shape at (1 , 6)?
- 14) Which coordinate plane has a shape at (2 , 0)?
- 15) Which coordinate plane has a shape at (0 , 0)?



Determine which coordinate plane answers each question.



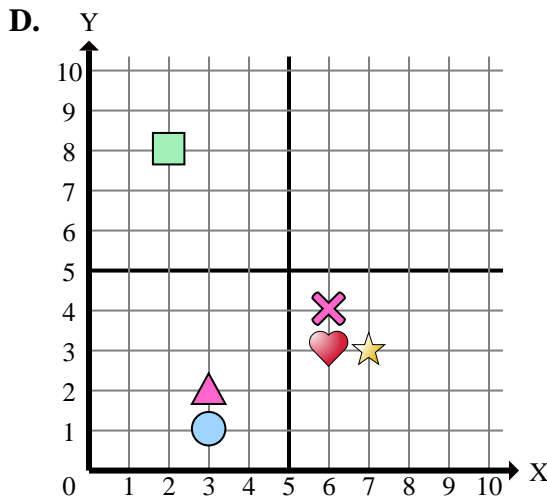
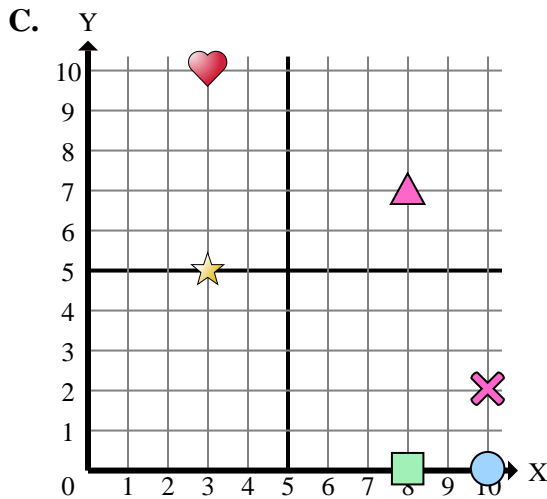
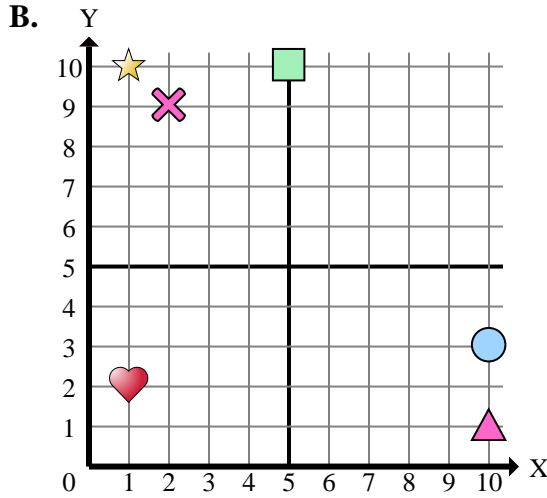
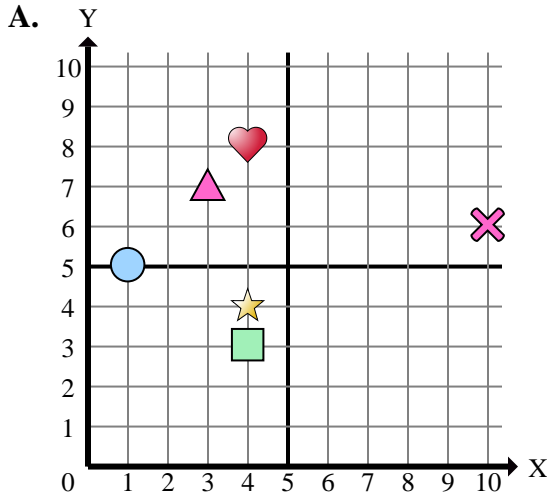
- 1) Which coordinate plane has a shape at (0 , 1)?
- 2) Which coordinate plane has a shape at (3 , 9)?
- 3) Which coordinate plane has a shape at (8 , 4)?
- 4) Which coordinate plane has a shape at (8 , 2)?
- 5) Which coordinate plane has a shape at (10 , 7)?
- 6) Which coordinate plane has a shape at (4 , 5)?
- 7) Which coordinate plane has a shape at (1 , 0)?
- 8) Which coordinate plane has a shape at (5 , 1)?
- 9) Which coordinate plane has a shape at (4 , 8)?
- 10) Which coordinate plane has a shape at (3 , 6)?
- 11) Which coordinate plane has a shape at (9 , 7)?
- 12) Which coordinate plane has a shape at (2 , 3)?
- 13) Which coordinate plane has a shape at (1 , 6)?
- 14) Which coordinate plane has a shape at (2 , 0)?
- 15) Which coordinate plane has a shape at (0 , 0)?

Answers

1.     **B**
2.     **B**
3.     **B**
4.     **C**
5.     **D**
6.     **D**
7.     **A**
8.     **B**
9.     **A**
10.     **D**
11.     **A**
12.     **C**
13.     **A**
14.     **C**
15.     **A**



Determine which coordinate plane answers each question.



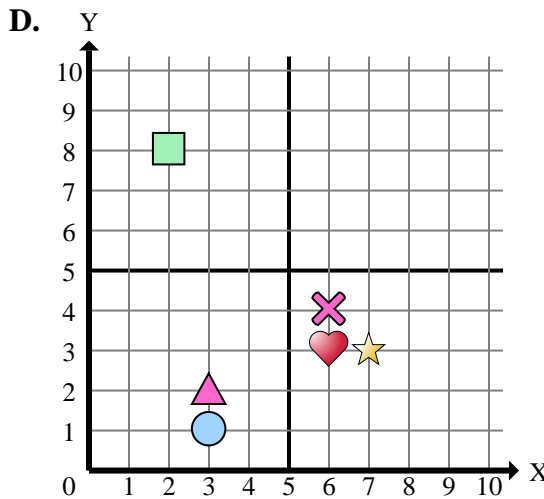
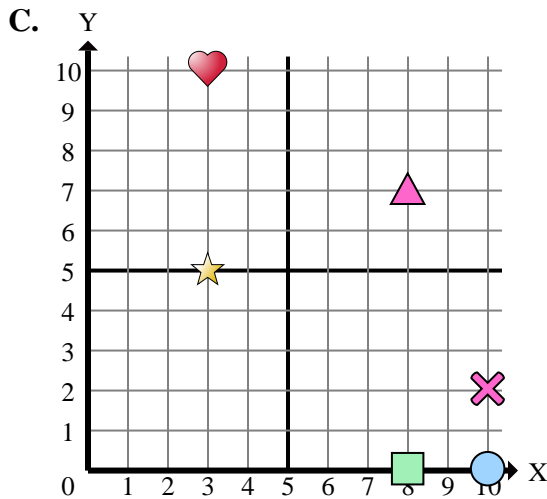
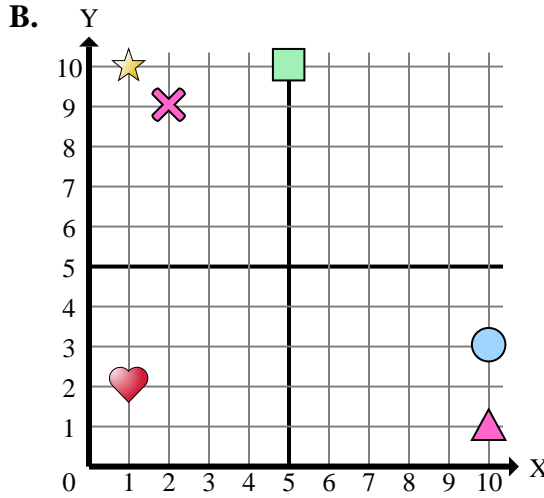
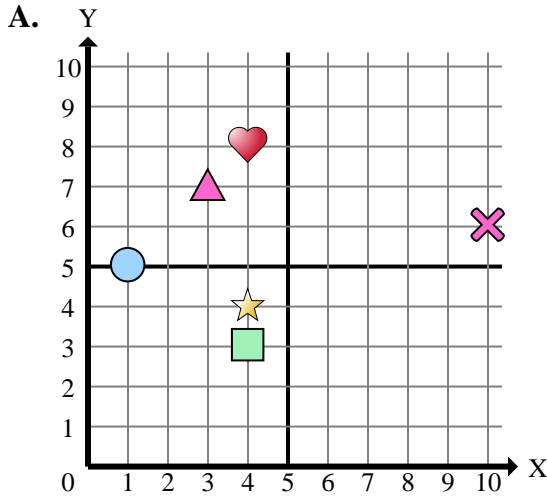
- 1) Which coordinate plane has a shape at (2 , 8)?
- 2) Which coordinate plane has a shape at (7 , 3)?
- 3) Which coordinate plane has a shape at (8 , 7)?
- 4) Which coordinate plane has a shape at (3 , 7)?
- 5) Which coordinate plane has a shape at (6 , 4)?
- 6) Which coordinate plane has a shape at (3 , 2)?
- 7) Which coordinate plane has a shape at (4 , 3)?
- 8) Which coordinate plane has a shape at (3 , 10)?
- 9) Which coordinate plane has a shape at (4 , 8)?
- 10) Which coordinate plane has a shape at (10 , 3)?
- 11) Which coordinate plane has a shape at (1 , 5)?
- 12) Which coordinate plane has a shape at (5 , 10)?
- 13) Which coordinate plane has a shape at (2 , 9)?
- 14) Which coordinate plane has a shape at (10 , 1)?
- 15) Which coordinate plane has a shape at (6 , 3)?

Answers

1. \_\_\_\_\_
2. \_\_\_\_\_
3. \_\_\_\_\_
4. \_\_\_\_\_
5. \_\_\_\_\_
6. \_\_\_\_\_
7. \_\_\_\_\_
8. \_\_\_\_\_
9. \_\_\_\_\_
10. \_\_\_\_\_
11. \_\_\_\_\_
12. \_\_\_\_\_
13. \_\_\_\_\_
14. \_\_\_\_\_
15. \_\_\_\_\_



Determine which coordinate plane answers each question.



- 1) Which coordinate plane has a shape at (2 , 8)?
- 2) Which coordinate plane has a shape at (7 , 3)?
- 3) Which coordinate plane has a shape at (8 , 7)?
- 4) Which coordinate plane has a shape at (3 , 7)?
- 5) Which coordinate plane has a shape at (6 , 4)?
- 6) Which coordinate plane has a shape at (3 , 2)?
- 7) Which coordinate plane has a shape at (4 , 3)?
- 8) Which coordinate plane has a shape at (3 , 10)?
- 9) Which coordinate plane has a shape at (4 , 8)?
- 10) Which coordinate plane has a shape at (10 , 3)?
- 11) Which coordinate plane has a shape at (1 , 5)?
- 12) Which coordinate plane has a shape at (5 , 10)?
- 13) Which coordinate plane has a shape at (2 , 9)?
- 14) Which coordinate plane has a shape at (10 , 1)?
- 15) Which coordinate plane has a shape at (6 , 3)?

Answers

1. **D**
2. **D**
3. **C**
4. **A**
5. **D**
6. **D**
7. **A**
8. **C**
9. **A**
10. **B**
11. **A**
12. **B**
13. **B**
14. **B**
15. **D**