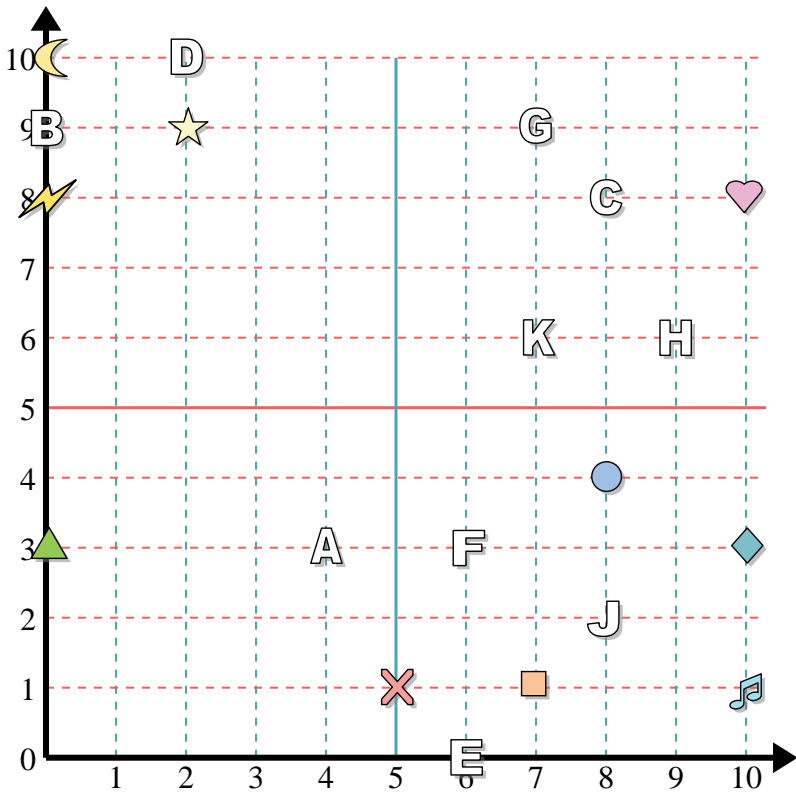




Answers



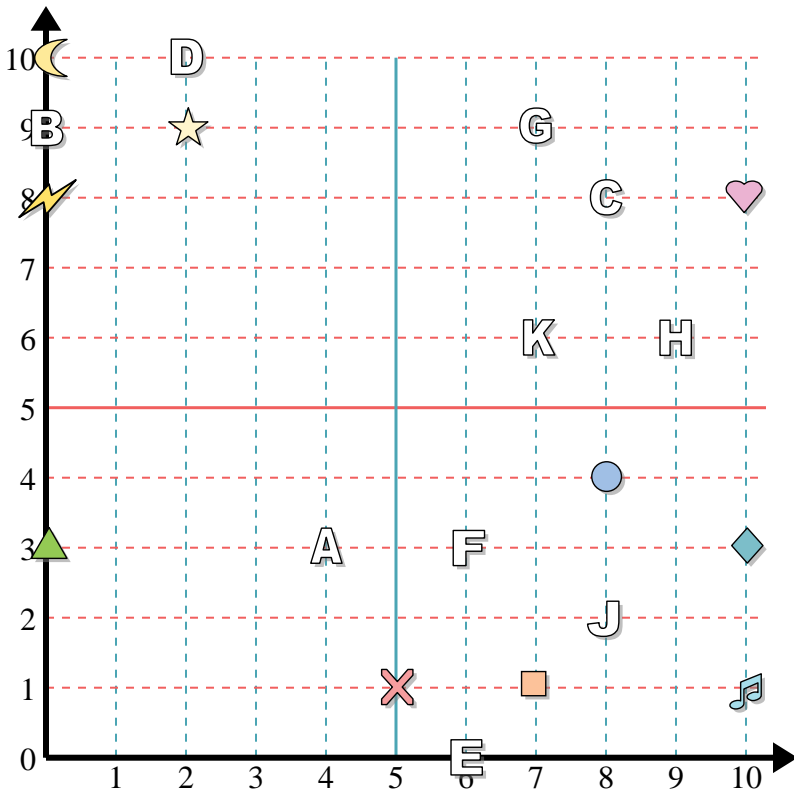
Determine the coordinates of each figure.

- | | |
|---------------|--------------|
| 1) music note | 2) circle |
| 3) lightning | 4) cross |
| 5) moon | 6) diamond |
| 7) star | 8) heart |
| 9) square | 10) triangle |

Determine which letter is at each coordinate.

- | | |
|-------------|------------|
| 11) (6, 0) | 12) (7, 9) |
| 13) (2, 10) | 14) (9, 6) |
| 15) (8, 2) | 16) (4, 3) |
| 17) (8, 8) | 18) (0, 9) |
| 19) (7, 6) | 20) (6, 3) |

1. _____
2. _____
3. _____
4. _____
5. _____
6. _____
7. _____
8. _____
9. _____
10. _____
11. _____
12. _____
13. _____
14. _____
15. _____
16. _____
17. _____
18. _____
19. _____
20. _____



Determine the coordinates of each figure.

- | | |
|---------------|--------------|
| 1) music note | 2) circle |
| 3) lightning | 4) cross |
| 5) moon | 6) diamond |
| 7) star | 8) heart |
| 9) square | 10) triangle |

Determine which letter is at each coordinate.

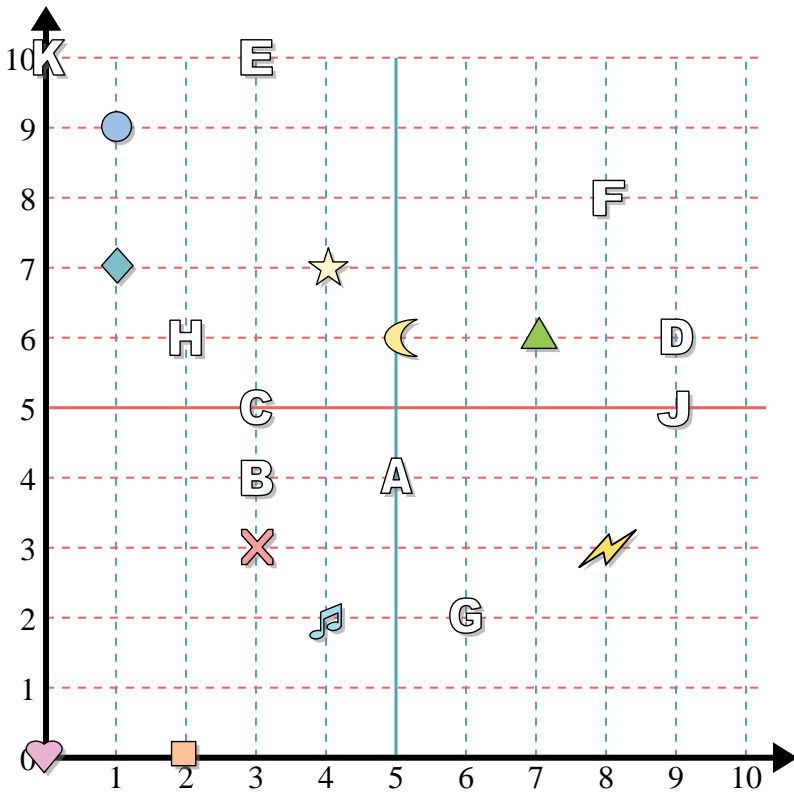
- | | |
|-------------|------------|
| 11) (6, 0) | 12) (7, 9) |
| 13) (2, 10) | 14) (9, 6) |
| 15) (8, 2) | 16) (4, 3) |
| 17) (8, 8) | 18) (0, 9) |
| 19) (7, 6) | 20) (6, 3) |

Answers

1. (10, 1)
2. (8, 4)
3. (0, 8)
4. (5, 1)
5. (0, 10)
6. (10, 3)
7. (2, 9)
8. (10, 8)
9. (7, 1)
10. (0, 3)
11. E
12. G
13. D
14. H
15. J
16. A
17. C
18. B
19. K
20. F



Answers



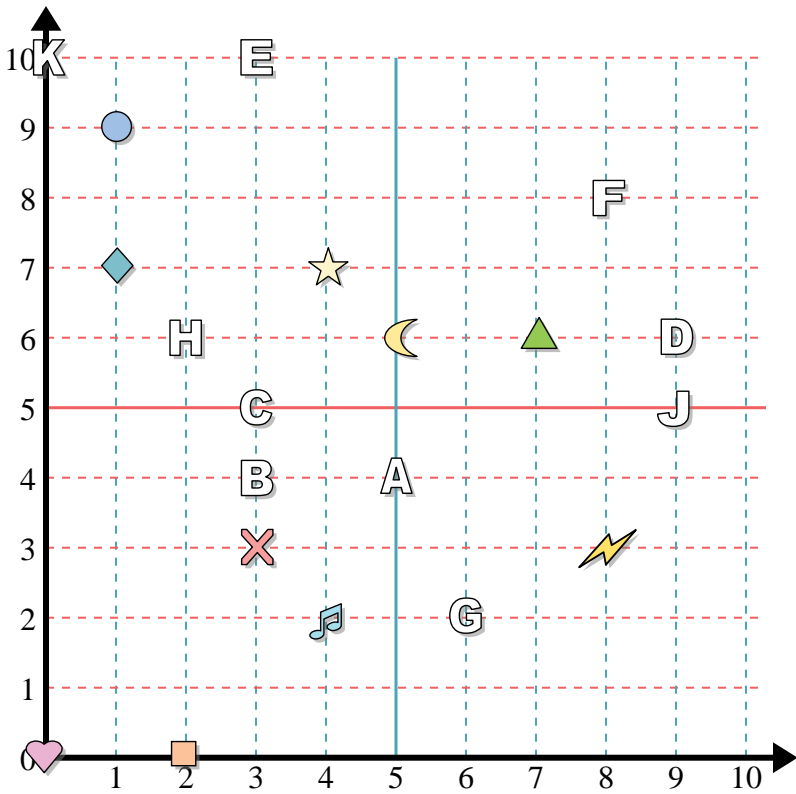
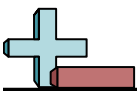
Determine the coordinates of each figure.

- | | |
|---------------|------------|
| 1) circle | 2) diamond |
| 3) square | 4) heart |
| 5) music note | 6) cross |
| 7) lightning | 8) moon |
| 9) triangle | 10) star |

Determine which letter is at each coordinate.

- | | |
|--------------|--------------|
| 11) (9 , 6) | 12) (2 , 6) |
| 13) (3 , 10) | 14) (3 , 5) |
| 15) (3 , 4) | 16) (0 , 10) |
| 17) (5 , 4) | 18) (6 , 2) |
| 19) (9 , 5) | 20) (8 , 8) |

1. _____
2. _____
3. _____
4. _____
5. _____
6. _____
7. _____
8. _____
9. _____
10. _____
11. _____
12. _____
13. _____
14. _____
15. _____
16. _____
17. _____
18. _____
19. _____
20. _____



Determine the coordinates of each figure.

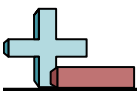
- 1) circle
- 2) diamond
- 3) square
- 4) heart
- 5) music note
- 6) cross
- 7) lightning
- 8) moon
- 9) triangle
- 10) star

Determine which letter is at each coordinate.

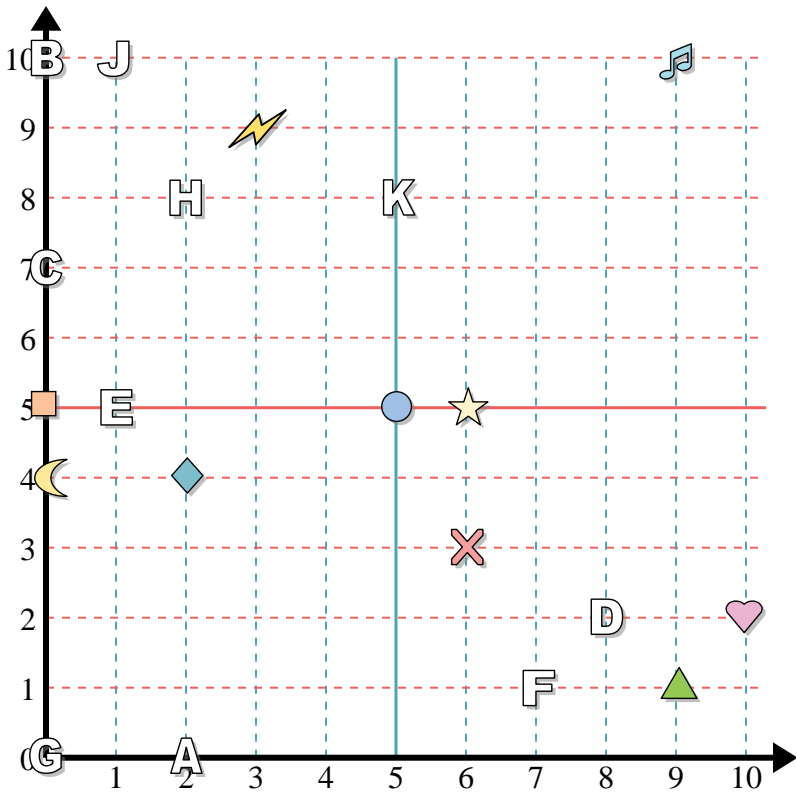
- 11) (9, 6)
- 12) (2, 6)
- 13) (3, 10)
- 14) (3, 5)
- 15) (3, 4)
- 16) (0, 10)
- 17) (5, 4)
- 18) (6, 2)
- 19) (9, 5)
- 20) (8, 8)

Answers

- 1. (1, 9)
- 2. (1, 7)
- 3. (2, 0)
- 4. (0, 0)
- 5. (4, 2)
- 6. (3, 3)
- 7. (8, 3)
- 8. (5, 6)
- 9. (7, 6)
- 10. (4, 7)
- 11. D
- 12. H
- 13. E
- 14. C
- 15. B
- 16. K
- 17. A
- 18. G
- 19. J
- 20. F



Answers



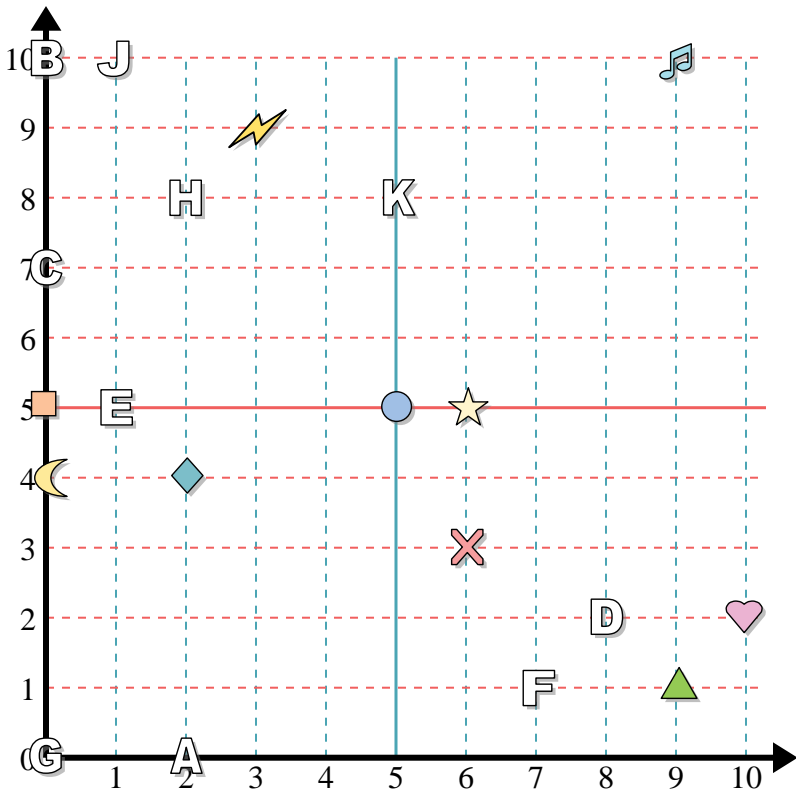
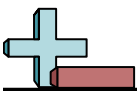
Determine the coordinates of each figure.

- | | |
|---------------|--------------|
| 1) triangle | 2) moon |
| 3) square | 4) heart |
| 5) star | 6) circle |
| 7) music note | 8) lightning |
| 9) cross | 10) diamond |

Determine which letter is at each coordinate.

- | | |
|-------------|------------|
| 11) (1, 10) | 12) (2, 8) |
| 13) (0, 7) | 14) (5, 8) |
| 15) (2, 0) | 16) (7, 1) |
| 17) (0, 0) | 18) (8, 2) |
| 19) (0, 10) | 20) (1, 5) |

1. _____
2. _____
3. _____
4. _____
5. _____
6. _____
7. _____
8. _____
9. _____
10. _____
11. _____
12. _____
13. _____
14. _____
15. _____
16. _____
17. _____
18. _____
19. _____
20. _____



Determine the coordinates of each figure.

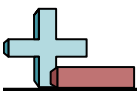
- 1) triangle
- 2) moon
- 3) square
- 4) heart
- 5) star
- 6) circle
- 7) music note
- 8) lightning
- 9) cross
- 10) diamond

Determine which letter is at each coordinate.

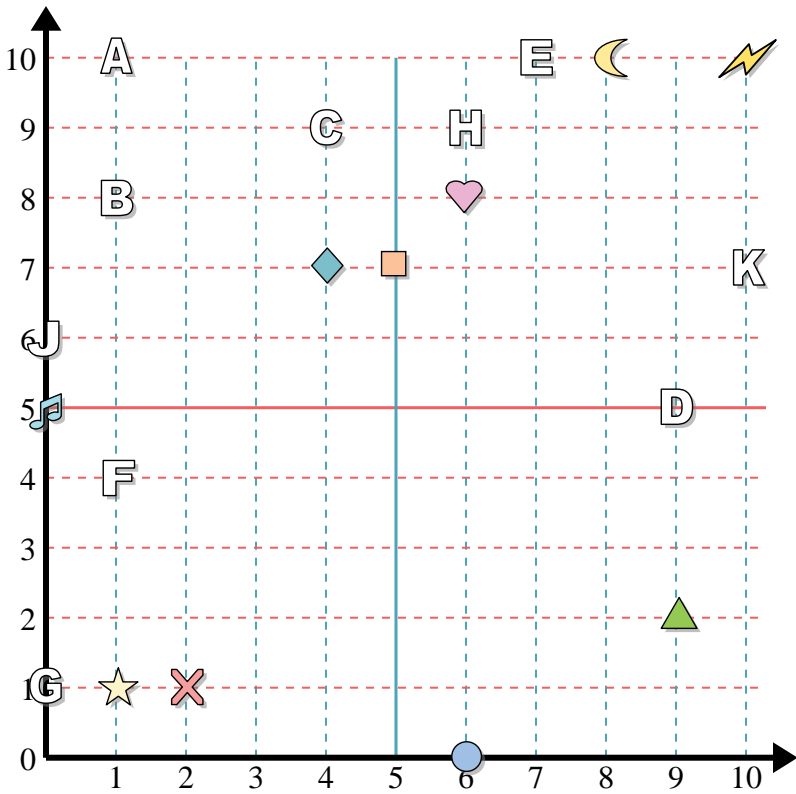
- 11) (1, 10)
- 12) (2, 8)
- 13) (0, 7)
- 14) (5, 8)
- 15) (2, 0)
- 16) (7, 1)
- 17) (0, 0)
- 18) (8, 2)
- 19) (0, 10)
- 20) (1, 5)

Answers

- 1. (9, 1)
- 2. (0, 4)
- 3. (0, 5)
- 4. (10, 2)
- 5. (6, 5)
- 6. (5, 5)
- 7. (9, 10)
- 8. (3, 9)
- 9. (6, 3)
- 10. (2, 4)
- 11. J
- 12. H
- 13. C
- 14. K
- 15. A
- 16. F
- 17. G
- 18. D
- 19. B
- 20. E



Answers



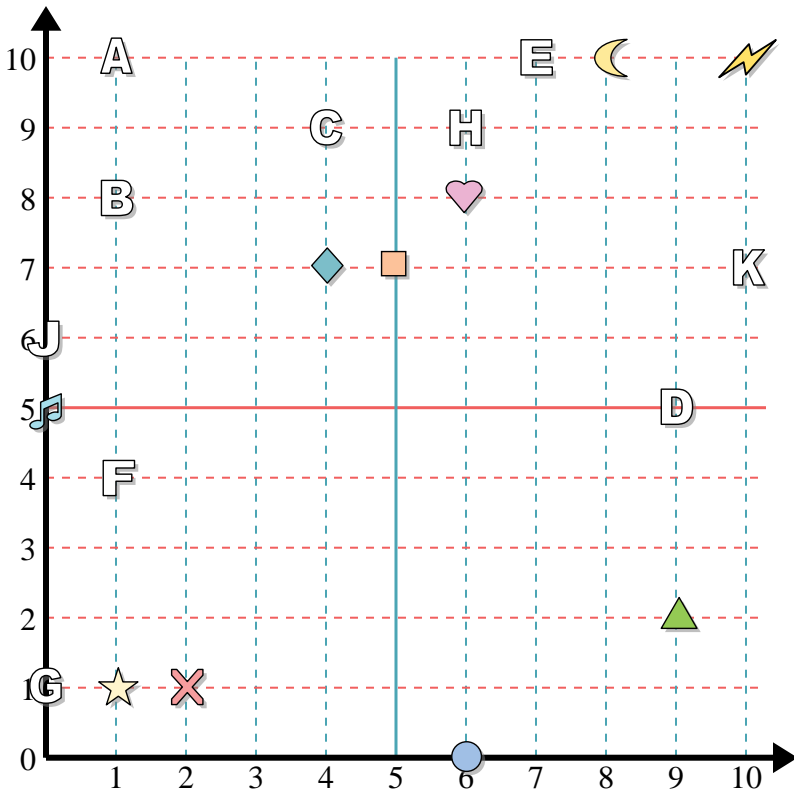
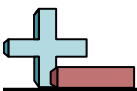
Determine the coordinates of each figure.

- 1) cross
- 2) music note
- 3) star
- 4) circle
- 5) square
- 6) heart
- 7) diamond
- 8) lightning
- 9) moon
- 10) triangle

Determine which letter is at each coordinate.

- 11) (1, 10)
- 12) (0, 6)
- 13) (6, 9)
- 14) (7, 10)
- 15) (10, 7)
- 16) (4, 9)
- 17) (1, 8)
- 18) (0, 1)
- 19) (1, 4)
- 20) (9, 5)

1. _____
2. _____
3. _____
4. _____
5. _____
6. _____
7. _____
8. _____
9. _____
10. _____
11. _____
12. _____
13. _____
14. _____
15. _____
16. _____
17. _____
18. _____
19. _____
20. _____



Determine the coordinates of each figure.

- 1) cross
- 2) music note
- 3) star
- 4) circle
- 5) square
- 6) heart
- 7) diamond
- 8) lightning
- 9) moon
- 10) triangle

Determine which letter is at each coordinate.

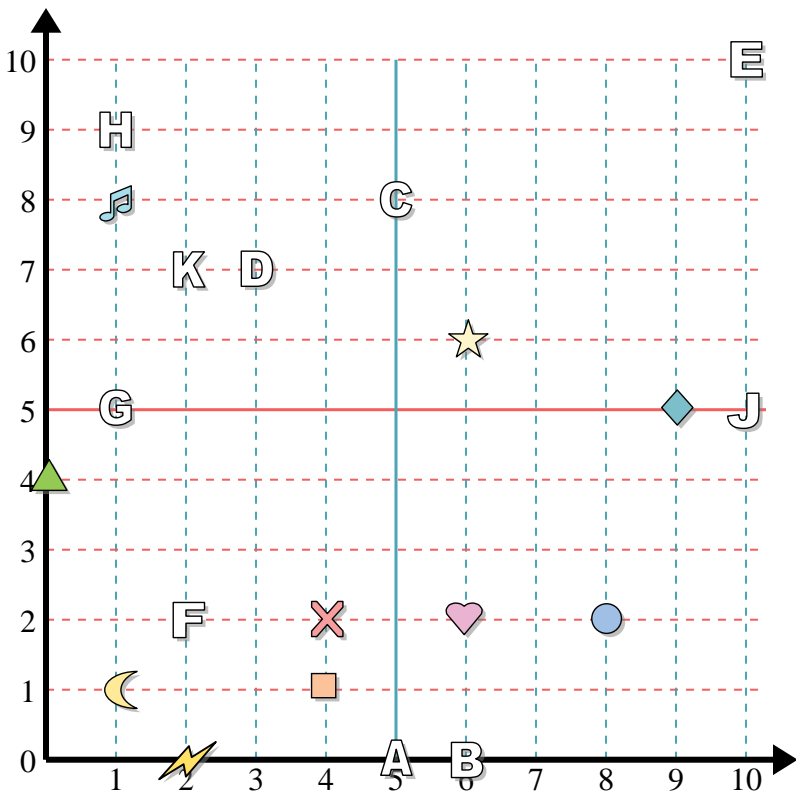
- 11) (1, 10)
- 12) (0, 6)
- 13) (6, 9)
- 14) (7, 10)
- 15) (10, 7)
- 16) (4, 9)
- 17) (1, 8)
- 18) (0, 1)
- 19) (1, 4)
- 20) (9, 5)

Answers

- 1. (2, 1)
- 2. (0, 5)
- 3. (1, 1)
- 4. (6, 0)
- 5. (5, 7)
- 6. (6, 8)
- 7. (4, 7)
- 8. (10, 10)
- 9. (8, 10)
- 10. (9, 2)
- 11. A
- 12. J
- 13. H
- 14. E
- 15. K
- 16. C
- 17. B
- 18. G
- 19. F
- 20. D



Answers



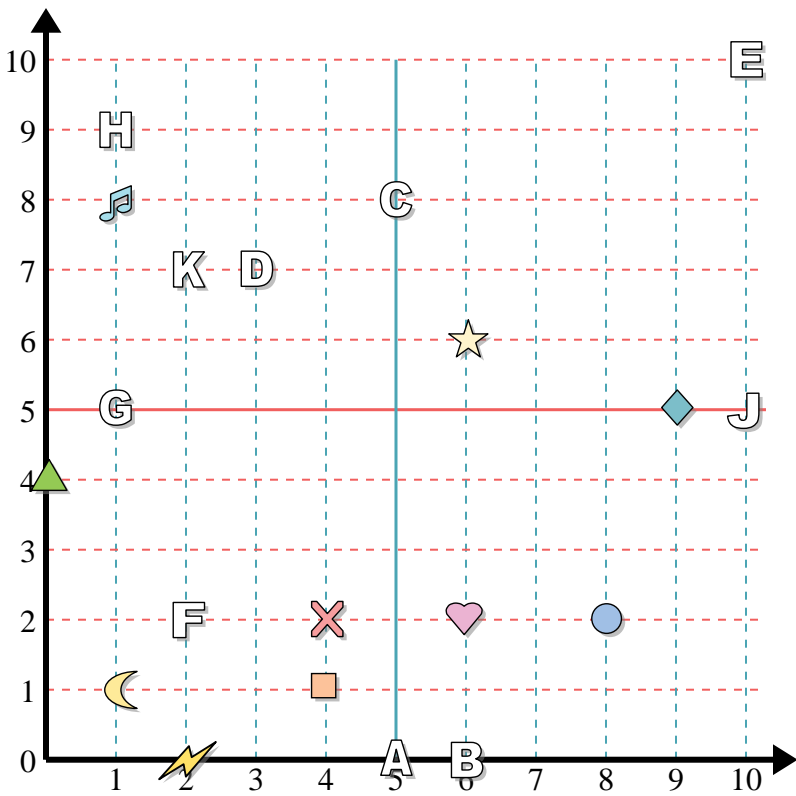
Determine the coordinates of each figure.

- | | |
|---------------|--------------|
| 1) cross | 2) square |
| 3) music note | 4) moon |
| 5) circle | 6) heart |
| 7) triangle | 8) lightning |
| 9) diamond | 10) star |

Determine which letter is at each coordinate.

- | | |
|------------|--------------|
| 11) (6, 0) | 12) (10, 5) |
| 13) (5, 8) | 14) (1, 5) |
| 15) (1, 9) | 16) (10, 10) |
| 17) (5, 0) | 18) (3, 7) |
| 19) (2, 2) | 20) (2, 7) |

1. _____
2. _____
3. _____
4. _____
5. _____
6. _____
7. _____
8. _____
9. _____
10. _____
11. _____
12. _____
13. _____
14. _____
15. _____
16. _____
17. _____
18. _____
19. _____
20. _____



Determine the coordinates of each figure.

- | | |
|---------------|--------------|
| 1) cross | 2) square |
| 3) music note | 4) moon |
| 5) circle | 6) heart |
| 7) triangle | 8) lightning |
| 9) diamond | 10) star |

Determine which letter is at each coordinate.

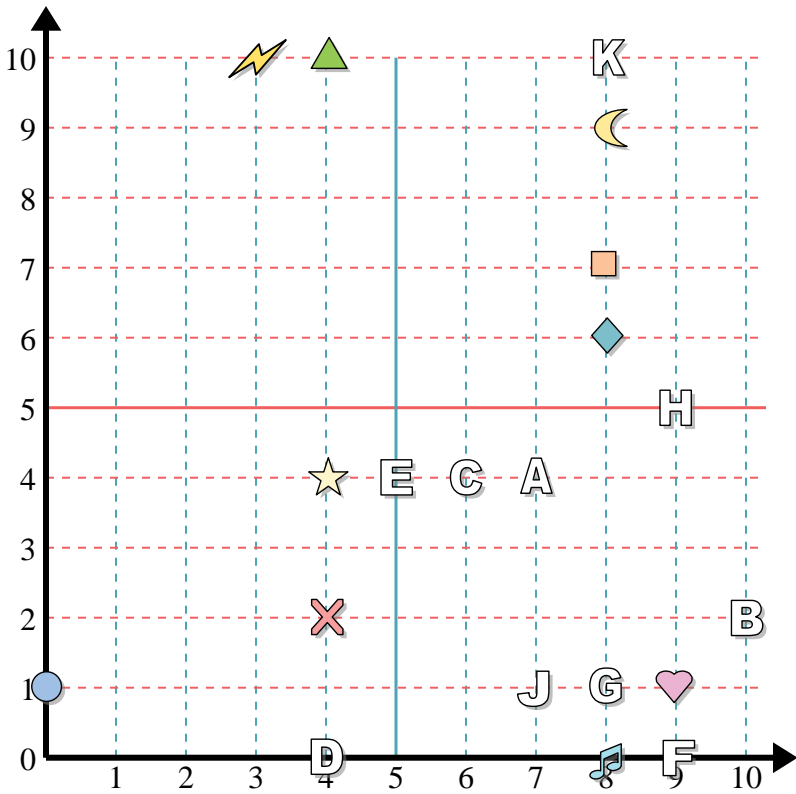
- | | |
|------------|--------------|
| 11) (6, 0) | 12) (10, 5) |
| 13) (5, 8) | 14) (1, 5) |
| 15) (1, 9) | 16) (10, 10) |
| 17) (5, 0) | 18) (3, 7) |
| 19) (2, 2) | 20) (2, 7) |

Answers

1. (4, 2)
2. (4, 1)
3. (1, 8)
4. (1, 1)
5. (8, 2)
6. (6, 2)
7. (0, 4)
8. (2, 0)
9. (9, 5)
10. (6, 6)
11. B
12. J
13. C
14. G
15. H
16. E
17. A
18. D
19. F
20. K



Answers



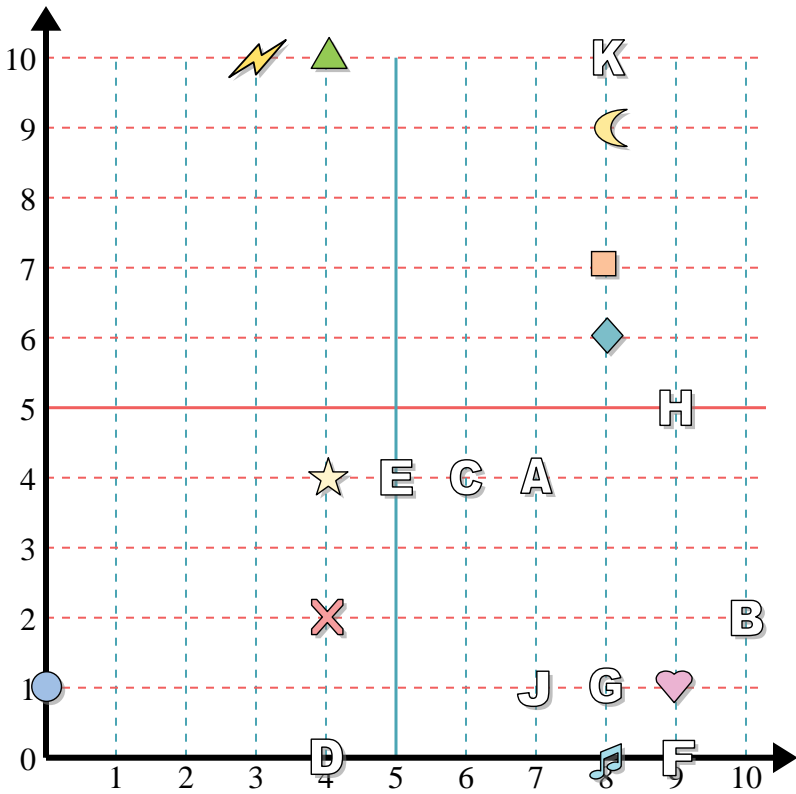
Determine the coordinates of each figure.

- 1) star
- 2) moon
- 3) heart
- 4) diamond
- 5) lightning
- 6) triangle
- 7) circle
- 8) music note
- 9) square
- 10) cross

Determine which letter is at each coordinate.

- 11) (9, 5)
- 12) (8, 10)
- 13) (8, 1)
- 14) (9, 0)
- 15) (7, 4)
- 16) (6, 4)
- 17) (4, 0)
- 18) (7, 1)
- 19) (10, 2)
- 20) (5, 4)

1. _____
2. _____
3. _____
4. _____
5. _____
6. _____
7. _____
8. _____
9. _____
10. _____
11. _____
12. _____
13. _____
14. _____
15. _____
16. _____
17. _____
18. _____
19. _____
20. _____



Determine the coordinates of each figure.

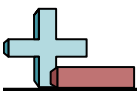
- 1) star
- 2) moon
- 3) heart
- 4) diamond
- 5) lightning
- 6) triangle
- 7) circle
- 8) music note
- 9) square
- 10) cross

Determine which letter is at each coordinate.

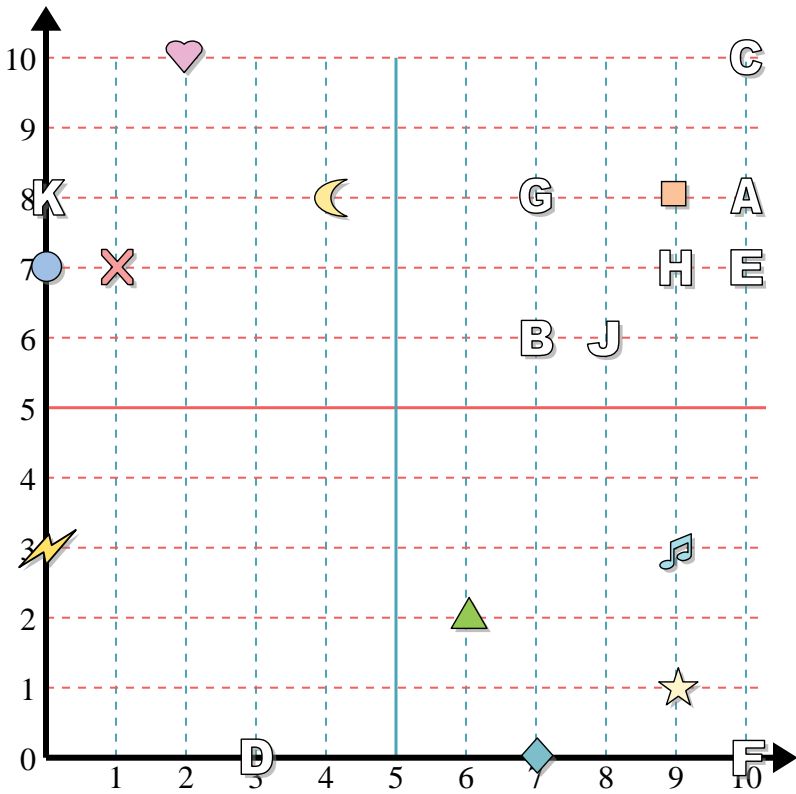
- 11) (9, 5)
- 12) (8, 10)
- 13) (8, 1)
- 14) (9, 0)
- 15) (7, 4)
- 16) (6, 4)
- 17) (4, 0)
- 18) (7, 1)
- 19) (10, 2)
- 20) (5, 4)

Answers

- 1. (4, 4)
- 2. (8, 9)
- 3. (9, 1)
- 4. (8, 6)
- 5. (3, 10)
- 6. (4, 10)
- 7. (0, 1)
- 8. (8, 0)
- 9. (8, 7)
- 10. (4, 2)
- 11. H
- 12. K
- 13. G
- 14. F
- 15. A
- 16. C
- 17. D
- 18. J
- 19. B
- 20. E



Answers



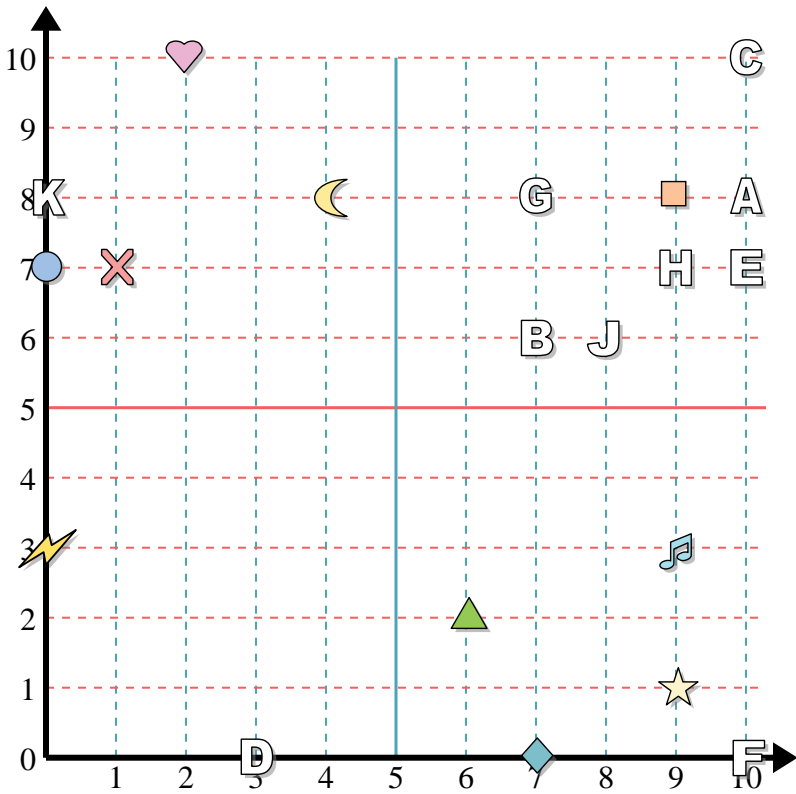
Determine the coordinates of each figure.

- | | |
|---------------|--------------|
| 1) diamond | 2) star |
| 3) triangle | 4) moon |
| 5) music note | 6) lightning |
| 7) square | 8) heart |
| 9) circle | 10) cross |

Determine which letter is at each coordinate.

- | | |
|--------------|-------------|
| 11) (10, 8) | 12) (10, 0) |
| 13) (9, 7) | 14) (10, 7) |
| 15) (8, 6) | 16) (7, 8) |
| 17) (0, 8) | 18) (7, 6) |
| 19) (10, 10) | 20) (3, 0) |

1. _____
2. _____
3. _____
4. _____
5. _____
6. _____
7. _____
8. _____
9. _____
10. _____
11. _____
12. _____
13. _____
14. _____
15. _____
16. _____
17. _____
18. _____
19. _____
20. _____



Determine the coordinates of each figure.

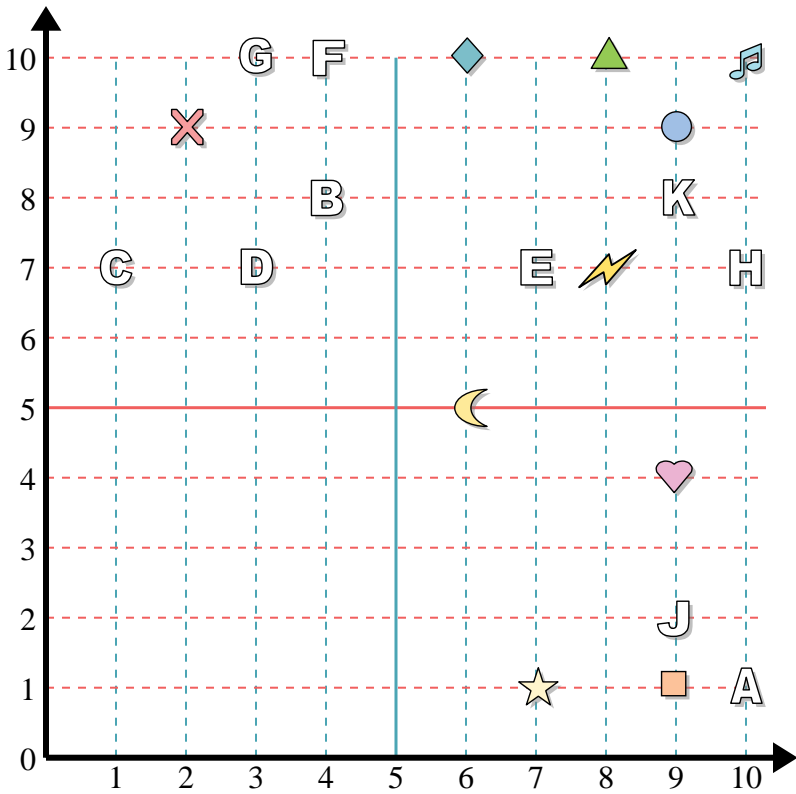
- 1) diamond
- 2) star
- 3) triangle
- 4) moon
- 5) music note
- 6) lightning
- 7) square
- 8) heart
- 9) circle
- 10) cross

Determine which letter is at each coordinate.

- 11) (10, 8)
- 12) (10, 0)
- 13) (9, 7)
- 14) (10, 7)
- 15) (8, 6)
- 16) (7, 8)
- 17) (0, 8)
- 18) (7, 6)
- 19) (10, 10)
- 20) (3, 0)

Answers

- 1. (7, 0)
- 2. (9, 1)
- 3. (6, 2)
- 4. (4, 8)
- 5. (9, 3)
- 6. (0, 3)
- 7. (9, 8)
- 8. (2, 10)
- 9. (0, 7)
- 10. (1, 7)
- 11. A
- 12. F
- 13. H
- 14. E
- 15. J
- 16. G
- 17. K
- 18. B
- 19. C
- 20. D



Answers

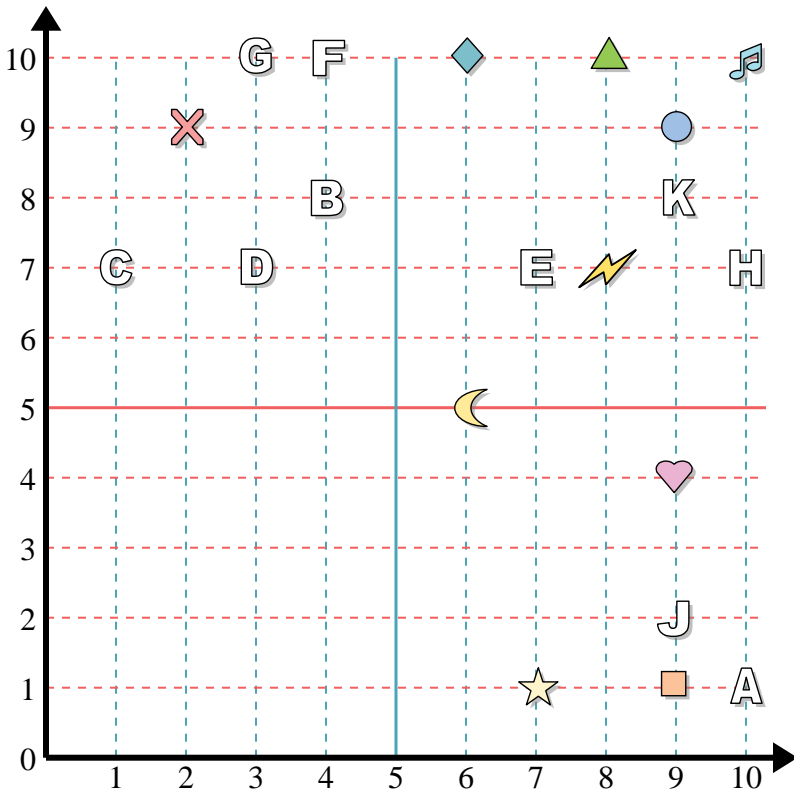
1. _____
2. _____
3. _____
4. _____
5. _____
6. _____
7. _____
8. _____
9. _____
10. _____
11. _____
12. _____
13. _____
14. _____
15. _____
16. _____
17. _____
18. _____
19. _____
20. _____

Determine the coordinates of each figure.

- | | |
|---------------|-------------|
| 1) star | 2) cross |
| 3) music note | 4) square |
| 5) lightning | 6) moon |
| 7) circle | 8) heart |
| 9) triangle | 10) diamond |

Determine which letter is at each coordinate.

- | | |
|-------------|-------------|
| 11) (10, 1) | 12) (4, 10) |
| 13) (9, 8) | 14) (10, 7) |
| 15) (9, 2) | 16) (3, 7) |
| 17) (1, 7) | 18) (4, 8) |
| 19) (7, 7) | 20) (3, 10) |



Determine the coordinates of each figure.

- | | |
|---------------|-------------|
| 1) star | 2) cross |
| 3) music note | 4) square |
| 5) lightning | 6) moon |
| 7) circle | 8) heart |
| 9) triangle | 10) diamond |

Determine which letter is at each coordinate.

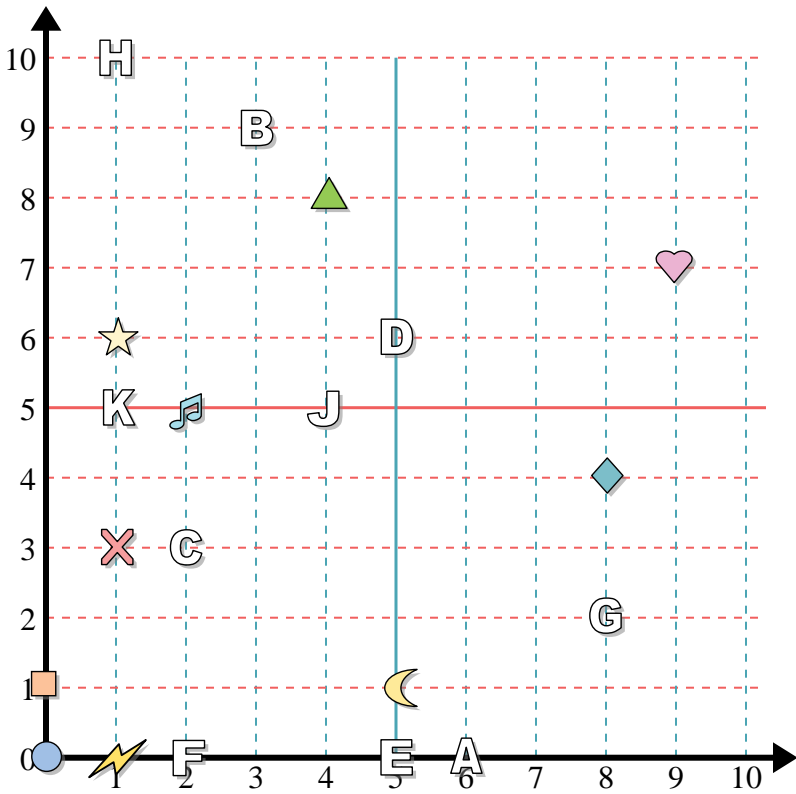
- | | |
|-------------|-------------|
| 11) (10, 1) | 12) (4, 10) |
| 13) (9, 8) | 14) (10, 7) |
| 15) (9, 2) | 16) (3, 7) |
| 17) (1, 7) | 18) (4, 8) |
| 19) (7, 7) | 20) (3, 10) |

Answers

1. (7, 1)
2. (2, 9)
3. (10, 10)
4. (9, 1)
5. (8, 7)
6. (6, 5)
7. (9, 9)
8. (9, 4)
9. (8, 10)
10. (6, 10)
11. A
12. F
13. K
14. H
15. J
16. D
17. C
18. B
19. E
20. G



Answers



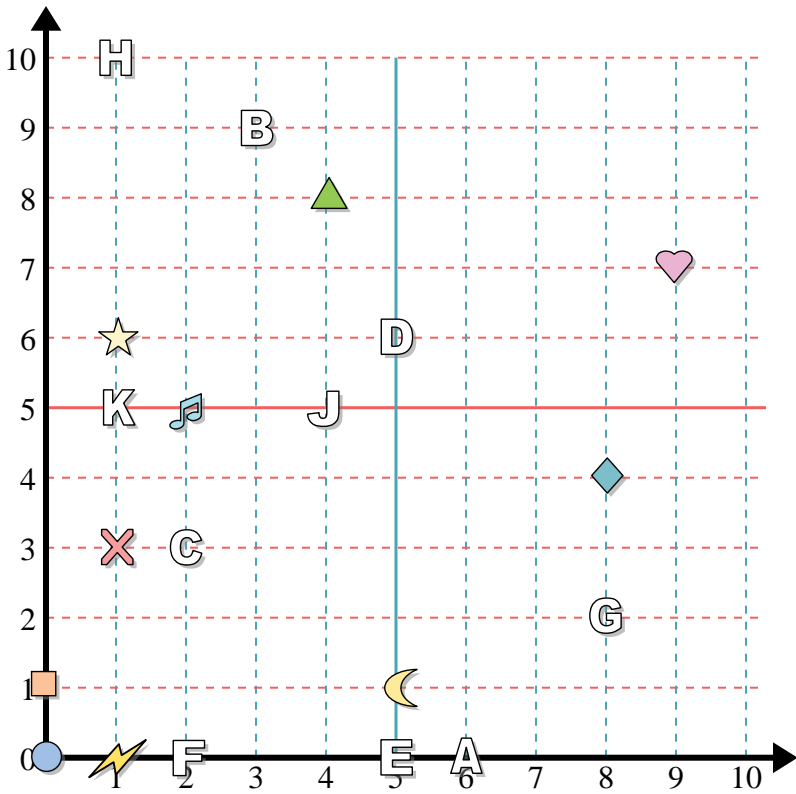
Determine the coordinates of each figure.

- | | |
|---------------|-------------|
| 1) music note | 2) triangle |
| 3) cross | 4) heart |
| 5) lightning | 6) square |
| 7) circle | 8) diamond |
| 9) moon | 10) star |

Determine which letter is at each coordinate.

- | | |
|------------|-------------|
| 11) (8, 2) | 12) (1, 5) |
| 13) (4, 5) | 14) (5, 0) |
| 15) (5, 6) | 16) (6, 0) |
| 17) (3, 9) | 18) (2, 3) |
| 19) (2, 0) | 20) (1, 10) |

1. _____
2. _____
3. _____
4. _____
5. _____
6. _____
7. _____
8. _____
9. _____
10. _____
11. _____
12. _____
13. _____
14. _____
15. _____
16. _____
17. _____
18. _____
19. _____
20. _____



Answers

1. (2, 5)
2. (4, 8)
3. (1, 3)
4. (9, 7)
5. (1, 0)
6. (0, 1)
7. (0, 0)
8. (8, 4)
9. (5, 1)
10. (1, 6)
11. G
12. K
13. J
14. E
15. D
16. A
17. B
18. C
19. F
20. H

Determine the coordinates of each figure.

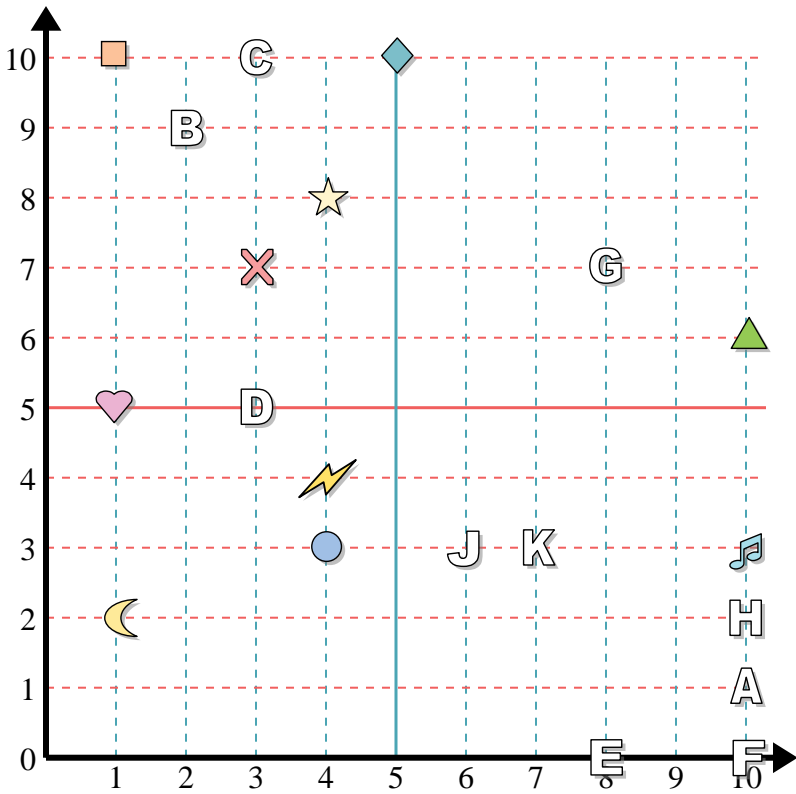
- | | |
|---------------|-------------|
| 1) music note | 2) triangle |
| 3) cross | 4) heart |
| 5) lightning | 6) square |
| 7) circle | 8) diamond |
| 9) moon | 10) star |

Determine which letter is at each coordinate.

- | | |
|------------|-------------|
| 11) (8, 2) | 12) (1, 5) |
| 13) (4, 5) | 14) (5, 0) |
| 15) (5, 6) | 16) (6, 0) |
| 17) (3, 9) | 18) (2, 3) |
| 19) (2, 0) | 20) (1, 10) |



Answers



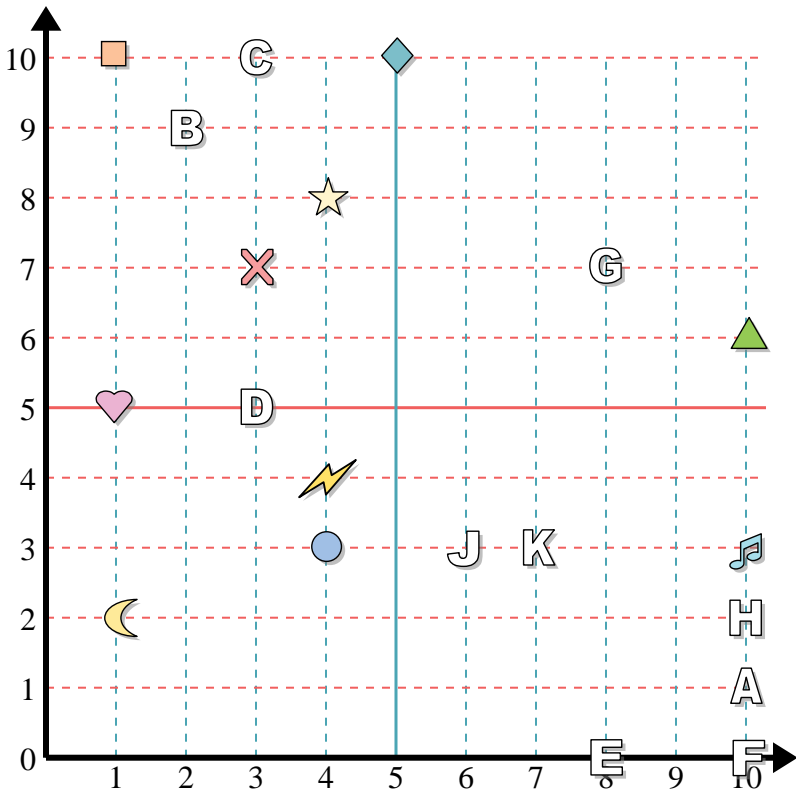
Determine the coordinates of each figure.

- | | |
|-------------|---------------|
| 1) moon | 2) music note |
| 3) triangle | 4) square |
| 5) circle | 6) cross |
| 7) heart | 8) diamond |
| 9) star | 10) lightning |

Determine which letter is at each coordinate.

- | | |
|-------------|-------------|
| 11) (2, 9) | 12) (3, 5) |
| 13) (8, 0) | 14) (6, 3) |
| 15) (8, 7) | 16) (10, 2) |
| 17) (10, 0) | 18) (7, 3) |
| 19) (10, 1) | 20) (3, 10) |

1. _____
2. _____
3. _____
4. _____
5. _____
6. _____
7. _____
8. _____
9. _____
10. _____
11. _____
12. _____
13. _____
14. _____
15. _____
16. _____
17. _____
18. _____
19. _____
20. _____



Determine the coordinates of each figure.

- 1) moon
- 2) music note
- 3) triangle
- 4) square
- 5) circle
- 6) cross
- 7) heart
- 8) diamond
- 9) star
- 10) lightning

Determine which letter is at each coordinate.

- 11) (2, 9)
- 12) (3, 5)
- 13) (8, 0)
- 14) (6, 3)
- 15) (8, 7)
- 16) (10, 2)
- 17) (10, 0)
- 18) (7, 3)
- 19) (10, 1)
- 20) (3, 10)

Answers

- 1. (1, 2)
- 2. (10, 3)
- 3. (10, 6)
- 4. (1, 10)
- 5. (4, 3)
- 6. (3, 7)
- 7. (1, 5)
- 8. (5, 10)
- 9. (4, 8)
- 10. (4, 4)
- 11. B
- 12. D
- 13. E
- 14. J
- 15. G
- 16. H
- 17. F
- 18. K
- 19. A
- 20. C