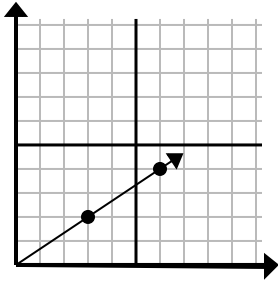




Determine which choice represents a point on the line if it were to continue.

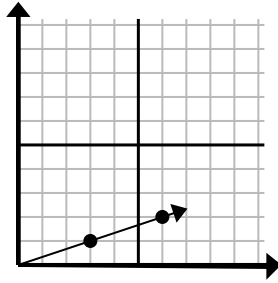
Answers

1)



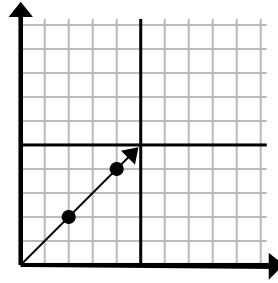
- A. (21, 14)
- B. (12, 8)
- C. (9, 6)
- D. (15, 10)

2)



- A. (18, 6)
- B. (12, 4)
- C. (9, 3)
- D. (10, 3)

3)



- A. (6, 6)
- B. (12, 12)
- C. (7, 7)
- D. (8, 4)

1. _____

2. _____

3. _____

4. _____

5. _____

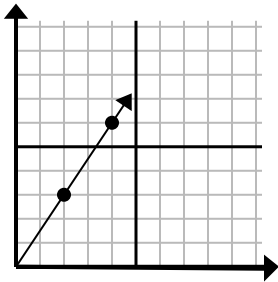
6. _____

7. _____

8. _____

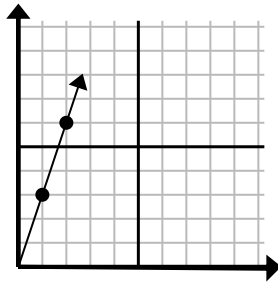
9. _____

4)



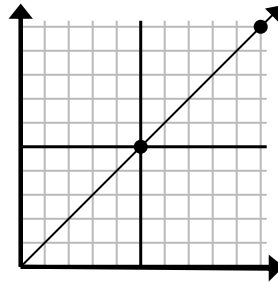
- A. (6, 9)
- B. (14, 21)
- C. (7, 5)
- D. (8, 7)

5)



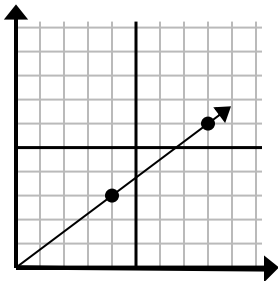
- A. (5, 4)
- B. (4, 8)
- C. (7, 21)
- D. (3, 9)

6)



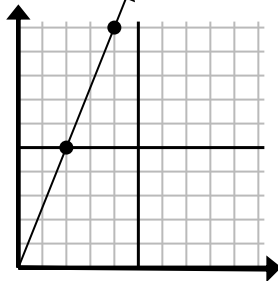
- A. (15, 6)
- B. (30, 30)
- C. (15, 15)
- D. (35, 35)

7)



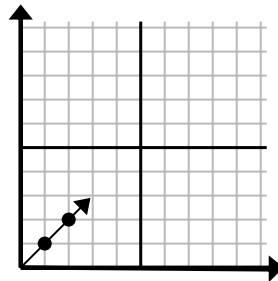
- A. (10, 5)
- B. (10, 6)
- C. (12, 9)
- D. (28, 21)

8)



- A. (12, 30)
- B. (8, 20)
- C. (6, 15)
- D. (8, 6)

9)

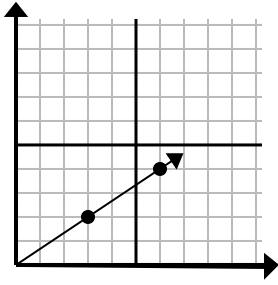


- A. (3, 3)
- B. (3, 2)
- C. (6, 6)
- D. (6, 3)



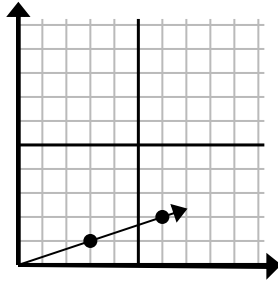
Determine which choice represents a point on the line if it were to continue.

1)



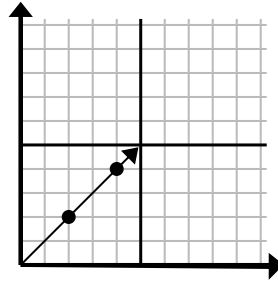
- A. (21, 14)
- B. (12, 8)
- C. (9, 6)
- D. (15, 10)

2)



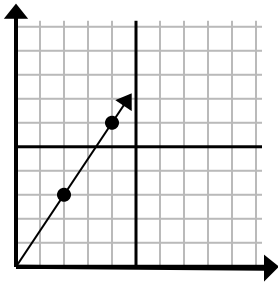
- A. (18, 6)
- B. (12, 4)
- C. (9, 3)
- D. (10, 3)

3)



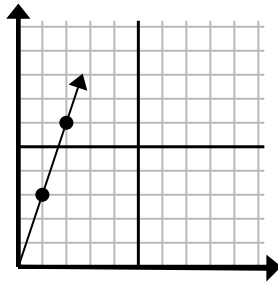
- A. (6, 6)
- B. (12, 12)
- C. (7, 7)
- D. (8, 4)

4)



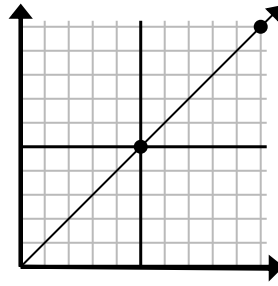
- A. (6, 9)
- B. (14, 21)
- C. (7, 5)
- D. (8, 7)

5)



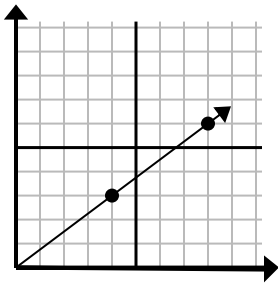
- A. (5, 4)
- B. (4, 8)
- C. (7, 21)
- D. (3, 9)

6)



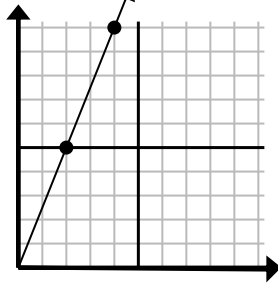
- A. (15, 6)
- B. (30, 30)
- C. (15, 15)
- D. (35, 35)

7)



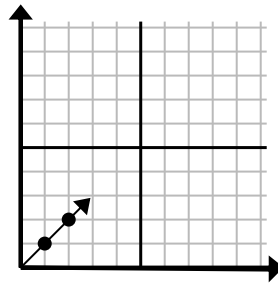
- A. (10, 5)
- B. (10, 6)
- C. (12, 9)
- D. (28, 21)

8)



- A. (12, 30)
- B. (8, 20)
- C. (6, 15)
- D. (8, 6)

9)



- A. (3, 3)
- B. (3, 2)
- C. (6, 6)
- D. (6, 3)

Answers

- 1. **C**
- 2. **C**
- 3. **A**
- 4. **A**
- 5. **D**
- 6. **C**
- 7. **C**
- 8. **C**
- 9. **A**