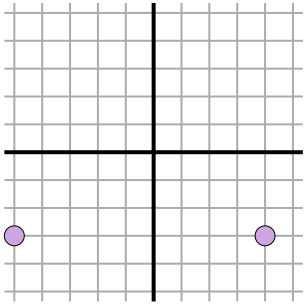




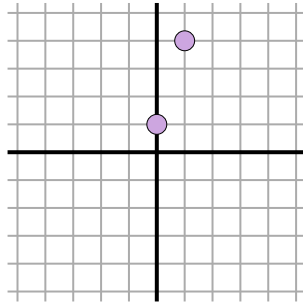
Find the distance between points. Round your answer to the nearest tenth.

Answers

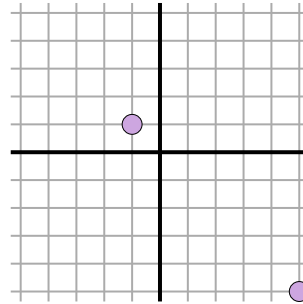
Ex)



1)



2)



Ex. 9

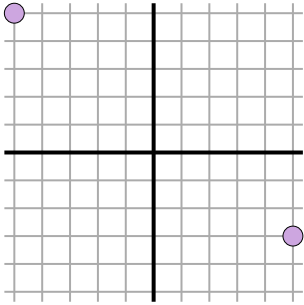
1. \_\_\_\_\_

2. \_\_\_\_\_

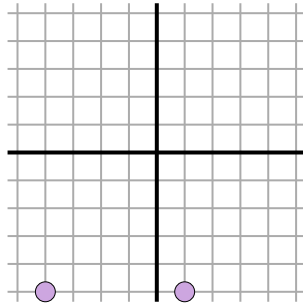
3. \_\_\_\_\_

4. \_\_\_\_\_

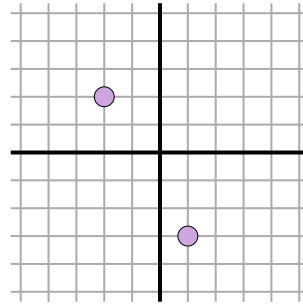
3)



4)



5)



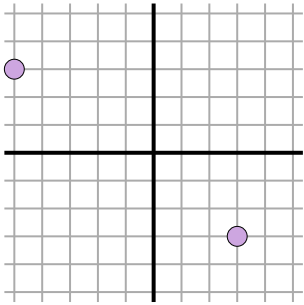
5. \_\_\_\_\_

6. \_\_\_\_\_

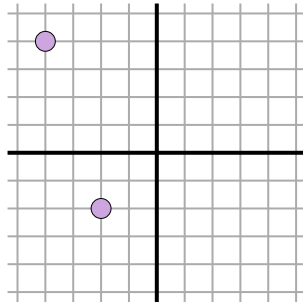
7. \_\_\_\_\_

8. \_\_\_\_\_

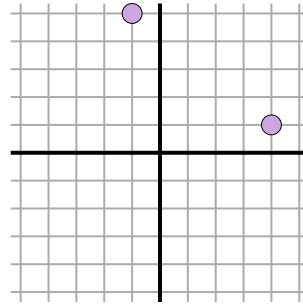
6)



7)



8)

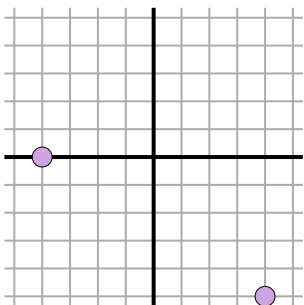


9. \_\_\_\_\_

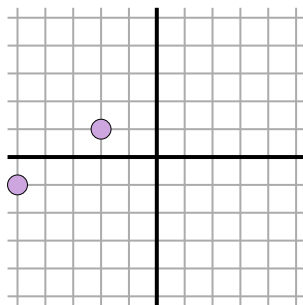
10. \_\_\_\_\_

11. \_\_\_\_\_

9)



10)



11)

