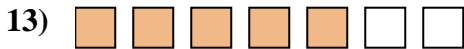
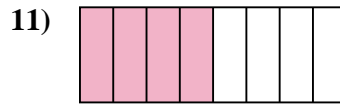
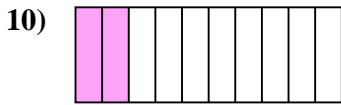
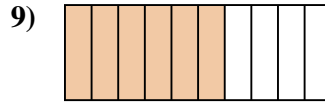
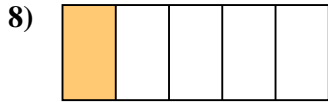
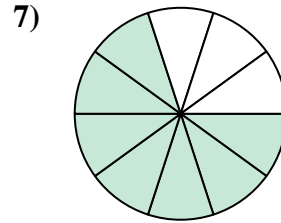
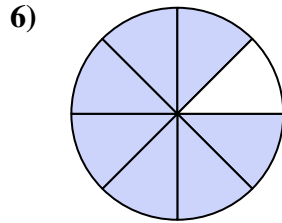
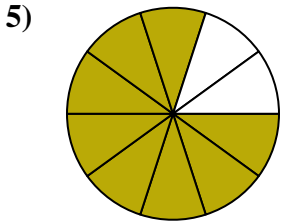


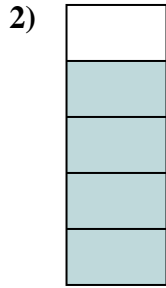




Determine if the shaded amount is 'more', 'less' or 'equal' to half.

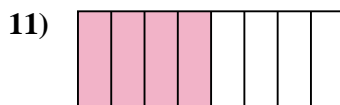
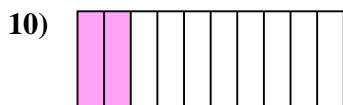
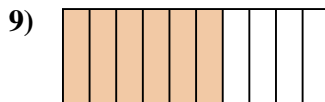

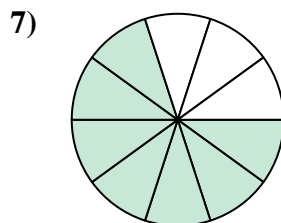
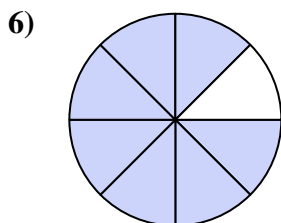
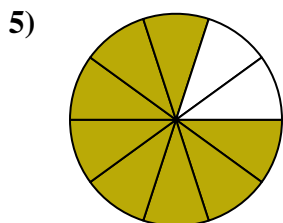


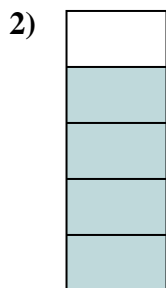

Answers



1. _____
2. _____
3. _____
4. _____
5. _____
6. _____
7. _____
8. _____
9. _____
10. _____
11. _____
12. _____
13. _____
14. _____
15. _____
16. _____
17. _____
18. _____
19. _____
20. _____



Determine if the shaded amount is 'more', 'less' or 'equal' to half.



Answers

1. less

2. more

3. less

4. less

5. more

6. more

7. more

8. less

9. more

10. less

11. equal

12. more

13. more

14. equal

15. equal

16. less

17. less

18. more

19. less

20. less