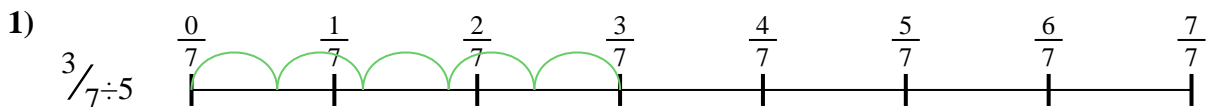





Use the numberline to solve each problem. The first is marked for you.

**Answers**



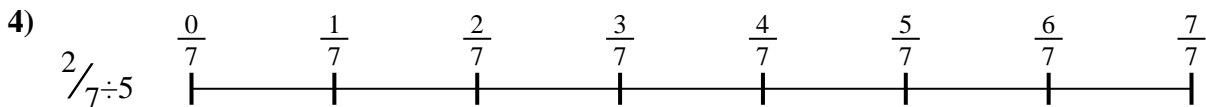
1. \_\_\_\_\_



2. \_\_\_\_\_



3. \_\_\_\_\_




4. \_\_\_\_\_



5. \_\_\_\_\_




6. \_\_\_\_\_



7. \_\_\_\_\_



8. \_\_\_\_\_

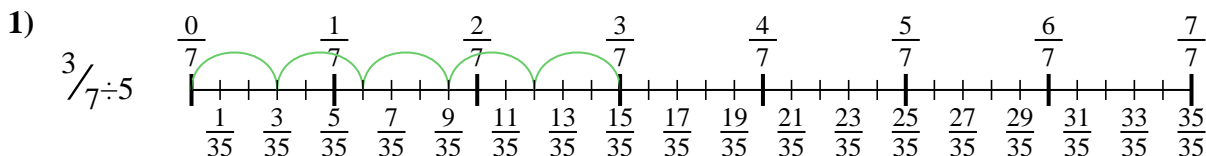


9. \_\_\_\_\_

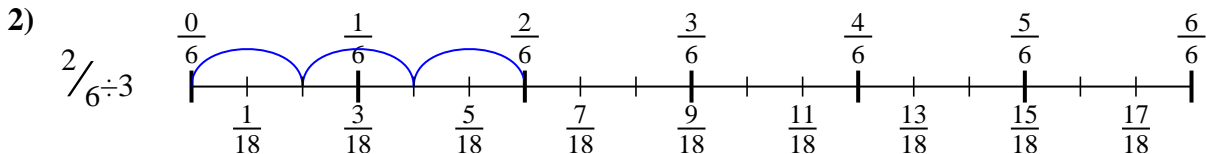


Use the numberline to solve each problem. The first is marked for you.

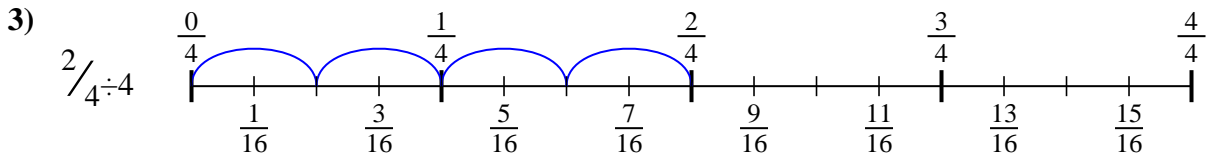
**Answers**



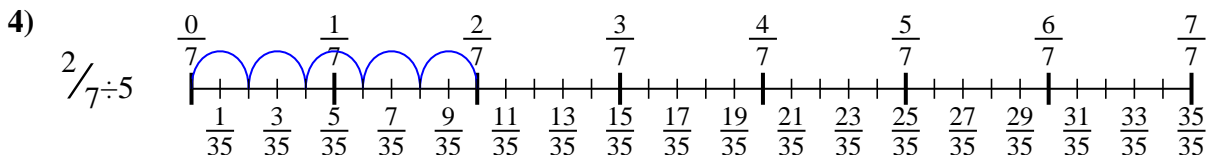
1.  $3/35$



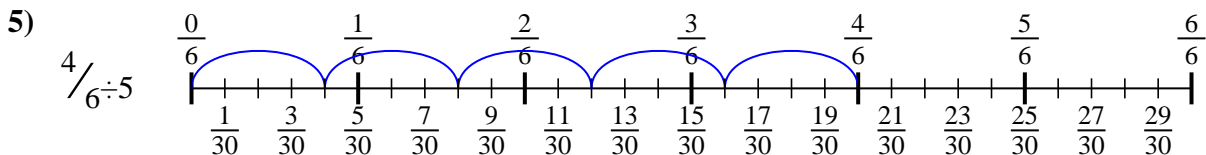
2.  $2/18$



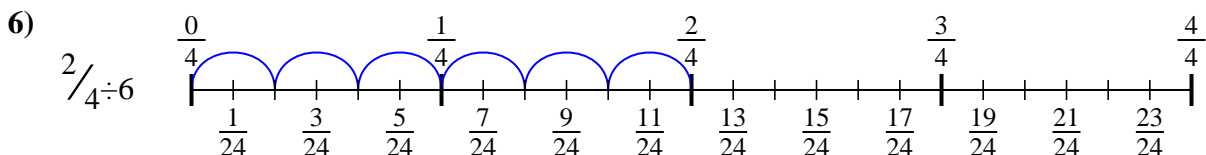
3.  $2/16$



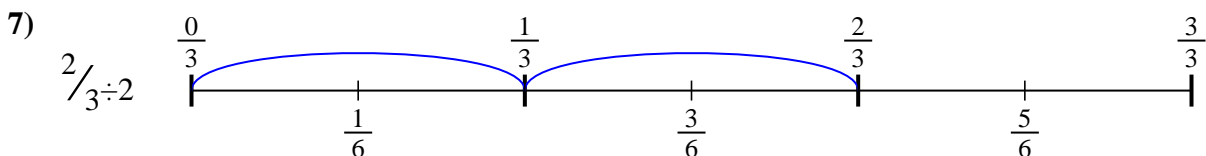
4.  $2/35$



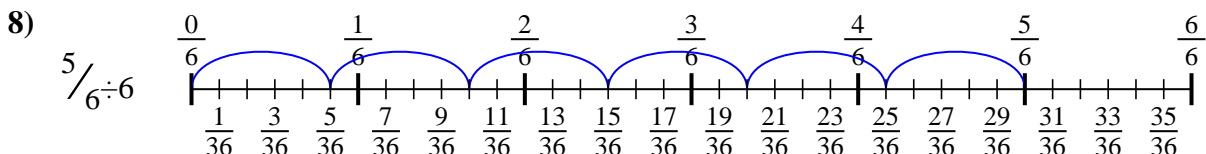
5.  $4/30$



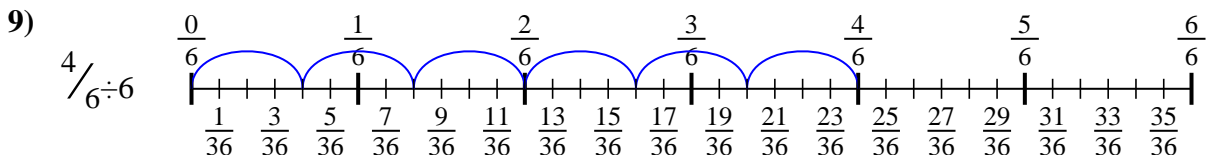
6.  $2/24$



7.  $2/6$



8.  $5/36$



9.  $4/36$



Use the numberline to solve each problem. The first is marked for you.

**Answers**

$2/18$

$2/24$

$5/36$

$2/16$

$4/36$

$3/35$

$2/35$

$4/30$

$2/6$

1. \_\_\_\_\_

2. \_\_\_\_\_

3. \_\_\_\_\_

4. \_\_\_\_\_

5. \_\_\_\_\_

6. \_\_\_\_\_

7. \_\_\_\_\_

8. \_\_\_\_\_

9. \_\_\_\_\_

