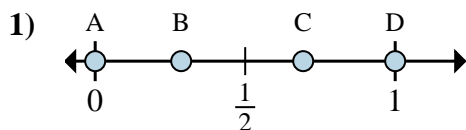
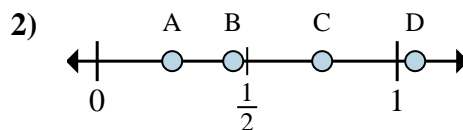
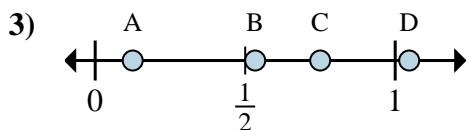
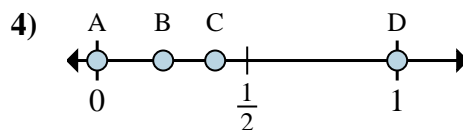
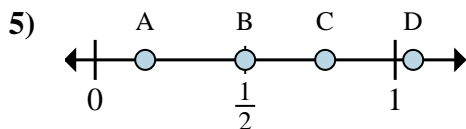
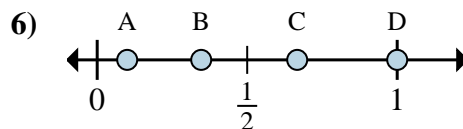
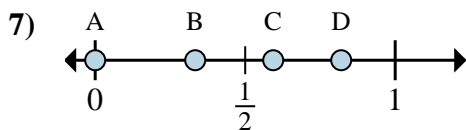
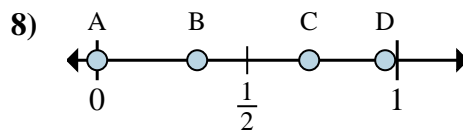




Determine which letter best shows the location of the fraction.

Answersa. Which letter best shows $\frac{0}{2}$?b. Which letter best shows $\frac{2}{2}$?a. Which letter best shows $\frac{1}{4}$?b. Which letter best shows $\frac{3}{4}$?a. Which letter best shows $\frac{6}{8}$?b. Which letter best shows $\frac{1}{8}$?a. Which letter best shows $\frac{0}{2}$?b. Which letter best shows $\frac{2}{2}$?a. Which letter best shows $\frac{3}{6}$?b. Which letter best shows $\frac{1}{6}$?a. Which letter best shows $\frac{2}{3}$?b. Which letter best shows $\frac{3}{3}$?a. Which letter best shows $\frac{0}{3}$?b. Which letter best shows $\frac{1}{3}$?a. Which letter best shows $\frac{0}{6}$?b. Which letter best shows $\frac{2}{6}$?

1. _____

2. _____

3. _____

4. _____

5. _____

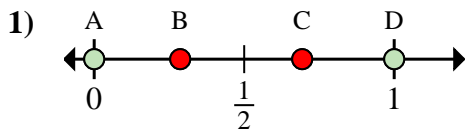
6. _____

7. _____

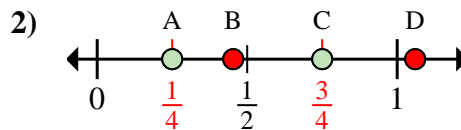
8. _____



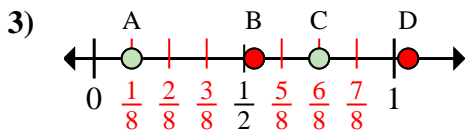
Determine which letter best shows the location of the fraction.

Answers

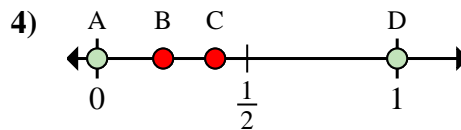
- a. Which letter best shows $\frac{0}{2}$?
b. Which letter best shows $\frac{2}{2}$?



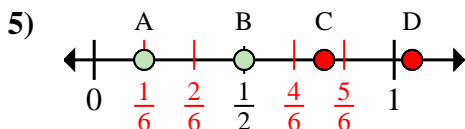
- a. Which letter best shows $\frac{1}{4}$?
b. Which letter best shows $\frac{3}{4}$?



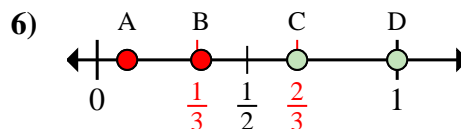
- a. Which letter best shows $\frac{6}{8}$?
b. Which letter best shows $\frac{1}{8}$?



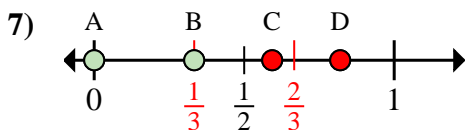
- a. Which letter best shows $\frac{0}{2}$?
b. Which letter best shows $\frac{2}{2}$?



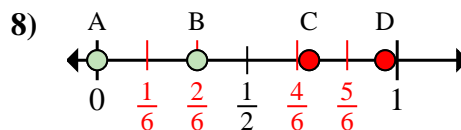
- a. Which letter best shows $\frac{3}{6}$?
b. Which letter best shows $\frac{1}{6}$?



- a. Which letter best shows $\frac{2}{3}$?
b. Which letter best shows $\frac{3}{3}$?



- a. Which letter best shows $\frac{0}{3}$?
b. Which letter best shows $\frac{1}{3}$?



- a. Which letter best shows $\frac{0}{6}$?
b. Which letter best shows $\frac{2}{6}$?

1. **A** **D**
2. **A** **C**
3. **C** **A**
4. **A** **D**
5. **B** **A**
6. **C** **D**
7. **A** **B**
8. **A** **B**